




ក្រឹះស្ថានធានាគុណ្ណនិងចែកផ្សាយ

ស្បែកហៅហ្វឹកហាត់ គណិតវិទ្យា

២


3	x	6	=	1	8
1	8	:	6	=	3
	8	-	9	=	



សៀវភៅហ្វឹកហាត់

គណិតវិទ្យា

ថ្នាក់ទី



អ្នកនិពន្ធ : លោក អ៊ុន គឹមស្រីន

រចនាទំព័រ : លោក គង់ ចិត្រា

ភាសាខ្មែរ ឬចម្លងសៀវភៅនេះ

រក្សាសិទ្ធិ ©

គ្រឹះស្ថានបោះពុម្ពនិងចែកចាយ

បោះពុម្ពឆ្នាំ ២០១៦

ISBN 9-789-995-001-728

ទេវវង្សកថា

យើងខ្ញុំយល់ឃើញថា នៅសាលាបឋមសិក្សាចំណេះទូទៅភ្នំខាងមាត់
សៀវភៅហ្វឹកហាត់គណិតវិទ្យាក្រៅម៉ោងសិក្សានៅឡើយ ។ ហេតុដូចនេះ
ហើយទើបយើងខ្ញុំបាននិកន៍នីតន្តសៀវភៅហ្វឹកហាត់គណិតវិទ្យាថ្នាក់ទី ២នេះ
ឡើង ក្នុងគោលបំណងជួយបំពេញបន្ថែមលើខ្លឹមសារសៀវភៅគណិតវិទ្យា
ថ្នាក់ទី ២របស់ក្រសួងអប់រំ យុវជន និងកីឡា ដើម្បីឱ្យសិស្សានុសិស្សហ្វឹកហាត់
គណិតវិទ្យា បន្ថែមទៀតនៅពេលទំនេរ ។

យើងខ្ញុំសង្ឃឹមថា សៀវភៅនេះនឹងតូលរួមចំណែកក្នុងការអភិវឌ្ឍចំណេះ
និងវិជ្ជាគណិតវិទ្យាជាមិនទាន់ឡើយ ។

ជាទីបញ្ចប់ យើងខ្ញុំសូមថ្លែងអំណរគុណយ៉ាងជ្រាលជ្រៅ ចំពោះលោកគ្រូ
អ្នកគ្រូ និងសហការី ដែលបានសហការនិងផ្តល់យោបល់ល្អៗ ក្នុងការនីតន្ត
សៀវភៅនេះឡើង ។

យើងខ្ញុំរង់ចាំទទួលរាល់ការទិញស្តាប់គាត់លោកគ្រូ អ្នកគ្រូ ហតាបិណ្ឌ
អាណាព្យាបាលសិស្ស និងប្រិយមិត្តគ្រប់មជ្ឈដ្ឋាន ។

សុខអរគុណ !



បំពេញចំនួន

១០	១២				
២០	២២				
៣០	៣២				
៤០	៤២				
៥០	៥២				
៦០	៦២				
៧០	៧២				
៨០	៨២				
៩០	៩២				



បំពេញចំនួន

១០០

១២០

២០០

២២០

៣០០

៣២០

៤០០

៤២០

៥០០

៥២០

៦០០

៦២០

៧០០

៧២០

៨០០

៨២០

៩០០

៩២០



បំពេញចំនួន

៤៣១

៤៣២

២០៥

២១០

៧៨១

៧៨៣

២៣៥


២៤៥


៨១០

៨៣០

៦០៣


៦០៦





បំពេញចំនួន

៥០២	៥០៤				
៦១៣	៦១៦				
២២២	៣៣៣				
១០១	២០២				
១៤១	២៤២				
២២៤	២២៨				





សរសេរលេខ

$$៦៤១ = ៦០០ + ៤០ + ១$$

$$៩១២ =$$

$$៤៤៤ =$$

$$៧៥៧ =$$

$$២០២ =$$

$$៩២០ =$$

$$៣១២ = ៣០០ + ១០ + ២$$

$$១៧៤ =$$

$$៩៧៧ =$$

$$៤៨៨ =$$

$$៨៥០ =$$

$$៥០៨ =$$



ចំនួនសេសនឹងគូ

1	2	3	4	5	6	7	8	9	10
11	12	13	14	15	16	17	18	19	20

ចំនួនគូ 

2									
---	--	--	--	--	--	--	--	--	--

ចំនួនសេស 

1									
---	--	--	--	--	--	--	--	--	--

31	42	50	63	72	53
70	91	43	88	64	85

ចំនួនគូ 

42									
----	--	--	--	--	--	--	--	--	--

ចំនួនសេស 

31									
----	--	--	--	--	--	--	--	--	--



ប្រៀបធៀបចំនួន



រៀបពីតូចទៅធំ

25

24

22

20

23

21

20

35

34

32

30

33

31

68

72

71

73

70

69

89


86

91

88

90

87



រៀបពីតូចទៅធំ

161

157

160

216

106

601

106

202

102

291

103

301

200

711

117

171

700

710

107

823

832

328

382

283

238



រៀបពីធំទៅតូច

14

16

15

19

17

18

19

65

62

61

63

60

64

79

76

81

78

80

77

85

84

82

80

83

81



រៀបពីធំទៅតូច

161

157

160

158

162

159

162

150

145

147

149

146

148

113

115

116

112

114

111

194

197

195

193

198

196



បូកគ្នានត្រាទុក

$$\begin{array}{r} + 28 \\ + 1 \\ \hline 29 \end{array}$$

$$\begin{array}{r} + 53 \\ + 4 \\ \hline \end{array}$$

$$\begin{array}{r} + 23 \\ + 6 \\ \hline \end{array}$$

$$\begin{array}{r} + 44 \\ + 4 \\ \hline \end{array}$$

$$\begin{array}{r} + 56 \\ + 2 \\ \hline \end{array}$$

$$\begin{array}{r} + 73 \\ + 3 \\ \hline \end{array}$$

$$\begin{array}{r} + 42 \\ + 6 \\ \hline \end{array}$$

$$\begin{array}{r} + 36 \\ + 3 \\ \hline \end{array}$$

$$\begin{array}{r} + 25 \\ + 2 \\ \hline \end{array}$$

$$\begin{array}{r} + 72 \\ + 7 \\ \hline \end{array}$$

$$\begin{array}{r} + 93 \\ + 4 \\ \hline \end{array}$$

$$\begin{array}{r} + 82 \\ + 3 \\ \hline \end{array}$$

 គណនា

$$\begin{array}{r} + 35 \\ + 23 \\ \hline 58 \end{array}$$

$$\begin{array}{r} + 47 \\ + 32 \\ \hline \end{array}$$

$$\begin{array}{r} + 71 \\ + 14 \\ \hline \end{array}$$

$$\begin{array}{r} + 38 \\ + 41 \\ \hline \end{array}$$

$$\begin{array}{r} + 52 \\ + 22 \\ \hline \end{array}$$

$$\begin{array}{r} + 63 \\ + 26 \\ \hline \end{array}$$

$$\begin{array}{r} + 25 \\ + 44 \\ \hline \end{array}$$


$$\begin{array}{r} + 33 \\ + 51 \\ \hline \end{array}$$

$$\begin{array}{r} + 55 \\ + 31 \\ \hline \end{array}$$

$$\begin{array}{r} + 43 \\ + 34 \\ \hline \end{array}$$

$$\begin{array}{r} + 82 \\ + 16 \\ \hline \end{array}$$

$$\begin{array}{r} + 73 \\ + 25 \\ \hline \end{array}$$



បំពេញចំនួន

$$\begin{array}{r} 35 \\ + \quad \square \\ \hline 38 \end{array}$$

$$\begin{array}{r} 84 \\ + \quad \square \\ \hline 89 \end{array}$$

$$\begin{array}{r} 74 \\ + \quad \square \\ \hline 77 \end{array}$$

$$\begin{array}{r} 82 \\ + \quad \square \\ \hline 88 \end{array}$$

$$\begin{array}{r} 28 \\ + \quad \square \\ \hline 39 \end{array}$$

$$\begin{array}{r} 37 \\ + \quad \square \\ \hline 39 \end{array}$$

$$\begin{array}{r} 73 \\ + \quad \square \\ \hline 77 \end{array}$$

$$\begin{array}{r} 55 \\ + \quad \square \\ \hline 57 \end{array}$$

$$\begin{array}{r} 15 \\ + \quad \square \\ \hline 18 \end{array}$$

$$\begin{array}{r} 44 \\ + \quad \square \\ \hline 48 \end{array}$$

$$\begin{array}{r} 51 \\ + \quad \square \\ \hline 58 \end{array}$$

$$\begin{array}{r} 27 \\ + \quad \square \\ \hline 29 \end{array}$$



បំពេញចំនួន

$$\begin{array}{r} 48 \\ + \boxed{51} \\ \hline 99 \end{array}$$

$$\begin{array}{r} 33 \\ + \boxed{} \\ \hline 73 \end{array}$$

$$\begin{array}{r} 44 \\ + \boxed{} \\ \hline 94 \end{array}$$

$$\begin{array}{r} 28 \\ + \boxed{} \\ \hline 98 \end{array}$$

$$\begin{array}{r} 55 \\ + \boxed{} \\ \hline 88 \end{array}$$

$$\begin{array}{r} 82 \\ + \boxed{} \\ \hline 92 \end{array}$$

$$\begin{array}{r} 79 \\ + \boxed{} \\ \hline 89 \end{array}$$

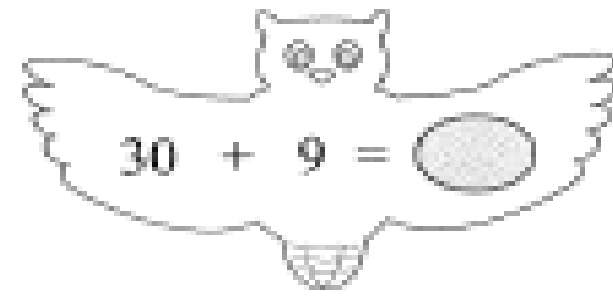
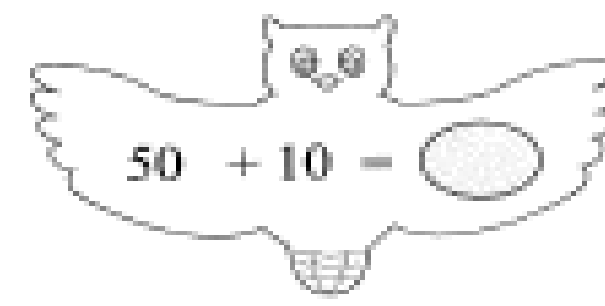
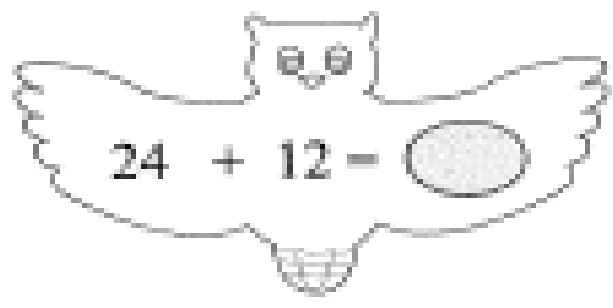
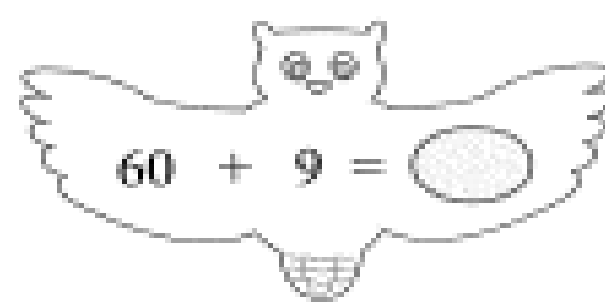
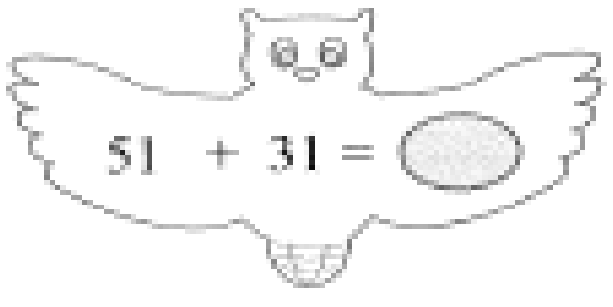
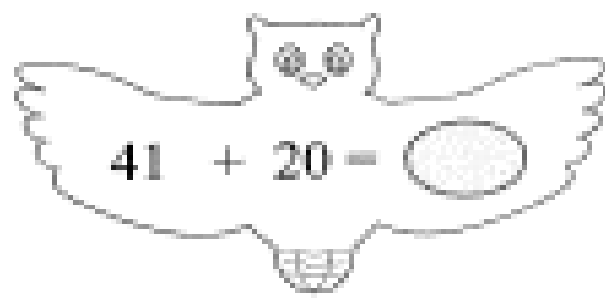
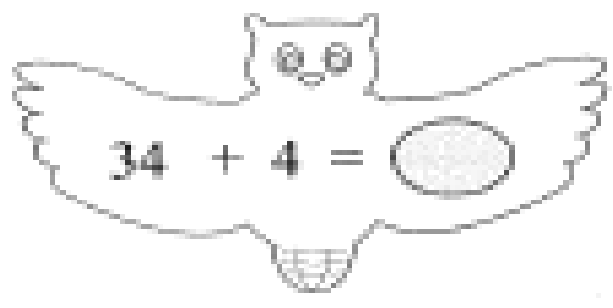
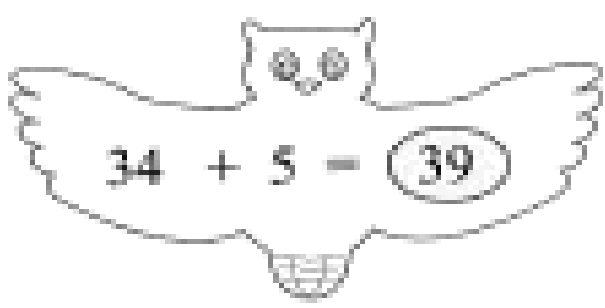
$$\begin{array}{r} 66 \\ + \boxed{} \\ \hline 99 \end{array}$$

$$\begin{array}{r} 89 \\ + \boxed{} \\ \hline 99 \end{array}$$

$$\begin{array}{r} 43 \\ + \boxed{} \\ \hline 87 \end{array}$$

$$\begin{array}{r} 34 \\ + \boxed{} \\ \hline 67 \end{array}$$

$$\begin{array}{r} 77 \\ + \boxed{} \\ \hline 99 \end{array}$$





ប្លុកមានត្រីកូត

$$\begin{array}{r} + 28 \\ + 5 \\ \hline \end{array}$$

$$\begin{array}{r} + 37 \\ + 4 \\ \hline \end{array}$$

$$\begin{array}{r} + 62 \\ + 9 \\ \hline \end{array}$$

$$\begin{array}{r} + 24 \\ + 9 \\ \hline \end{array}$$

$$\begin{array}{r} + 48 \\ + 3 \\ \hline \end{array}$$

$$\begin{array}{r} + 49 \\ + 5 \\ \hline \end{array}$$

$$\begin{array}{r} + 36 \\ + 7 \\ \hline \end{array}$$

$$\begin{array}{r} + 39 \\ + 4 \\ \hline \end{array}$$

$$\begin{array}{r} + 28 \\ + 4 \\ \hline \end{array}$$

$$\begin{array}{r} + 77 \\ + 7 \\ \hline \end{array}$$

$$\begin{array}{r} + 66 \\ + 6 \\ \hline \end{array}$$

$$\begin{array}{r} + 88 \\ + 8 \\ \hline \end{array}$$



គណិត

$$\begin{array}{r} + 47 \\ + 14 \\ \hline 61 \end{array}$$

$$\begin{array}{r} + 35 \\ + 46 \\ \hline \end{array}$$

$$\begin{array}{r} + 25 \\ + 25 \\ \hline \end{array}$$

$$\begin{array}{r} + 38 \\ + 23 \\ \hline \end{array}$$

$$\begin{array}{r} + 28 \\ + 58 \\ \hline \end{array}$$

$$\begin{array}{r} + 29 \\ + 22 \\ \hline \end{array}$$

$$\begin{array}{r} + 49 \\ + 24 \\ \hline \end{array}$$

$$\begin{array}{r} + 38 \\ + 44 \\ \hline \end{array}$$

$$\begin{array}{r} + 16 \\ + 48 \\ \hline \end{array}$$

$$\begin{array}{r} + 38 \\ + 25 \\ \hline \end{array}$$

$$\begin{array}{r} + 44 \\ + 27 \\ \hline \end{array}$$

$$\begin{array}{r} + 66 \\ + 27 \\ \hline \end{array}$$



បំពេញចំនួន

$$\begin{array}{r} 47 \\ + \quad 8 \\ \hline 55 \end{array}$$

$$\begin{array}{r} 81 \\ + \quad \square \\ \hline 90 \end{array}$$

$$\begin{array}{r} 72 \\ + \quad \square \\ \hline 81 \end{array}$$

$$\begin{array}{r} 66 \\ + \quad \square \\ \hline 74 \end{array}$$

$$\begin{array}{r} 47 \\ + \quad \square \\ \hline 56 \end{array}$$

$$\begin{array}{r} 56 \\ + \quad \square \\ \hline 63 \end{array}$$

$$\begin{array}{r} 77 \\ + \quad \square \\ \hline 84 \end{array}$$

$$\begin{array}{r} 85 \\ + \quad \square \\ \hline 91 \end{array}$$

$$\begin{array}{r} 88 \\ + \quad \square \\ \hline 92 \end{array}$$

$$\begin{array}{r} 35 \\ + \quad \square \\ \hline 41 \end{array}$$

$$\begin{array}{r} 52 \\ + \quad \square \\ \hline 61 \end{array}$$

$$\begin{array}{r} 27 \\ + \quad \square \\ \hline 31 \end{array}$$



បំពេញចំនួន

$$\begin{array}{r} 38 \\ + \boxed{45} \\ \hline 83 \end{array}$$

$$\begin{array}{r} 34 \\ + \boxed{} \\ \hline 51 \end{array}$$

$$\begin{array}{r} 72 \\ + \boxed{} \\ \hline 91 \end{array}$$

$$\begin{array}{r} 27 \\ + \boxed{} \\ \hline 42 \end{array}$$

$$\begin{array}{r} 42 \\ + \boxed{} \\ \hline 61 \end{array}$$

$$\begin{array}{r} 77 \\ + \boxed{} \\ \hline 92 \end{array}$$

$$\begin{array}{r} 32 \\ + \boxed{} \\ \hline 60 \end{array}$$

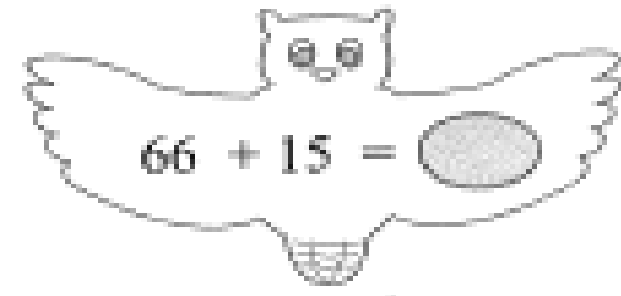
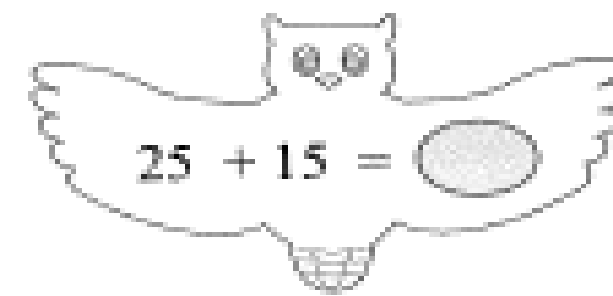
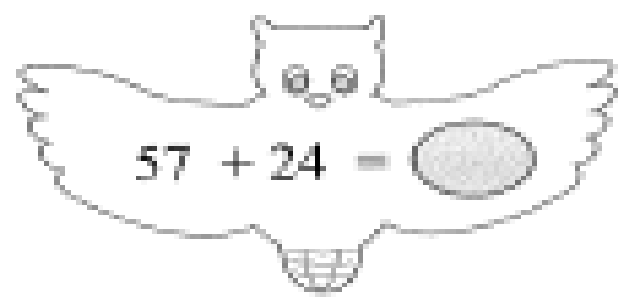
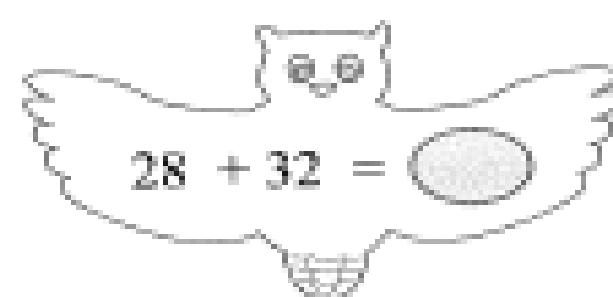
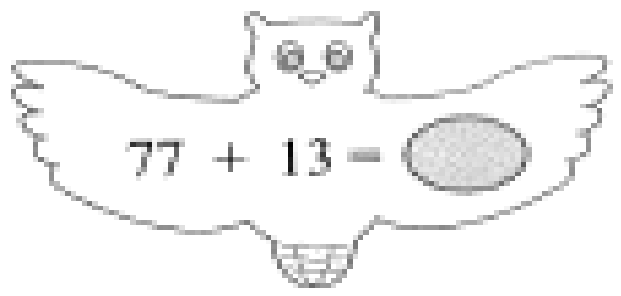
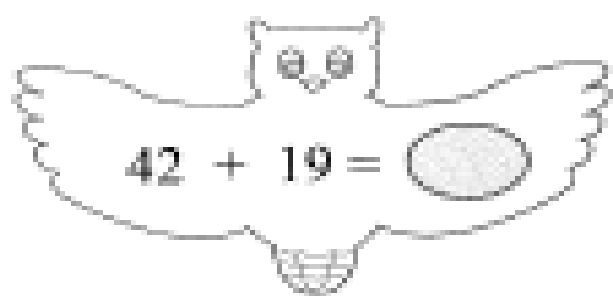
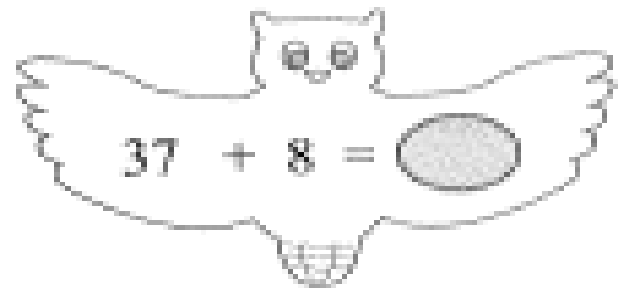
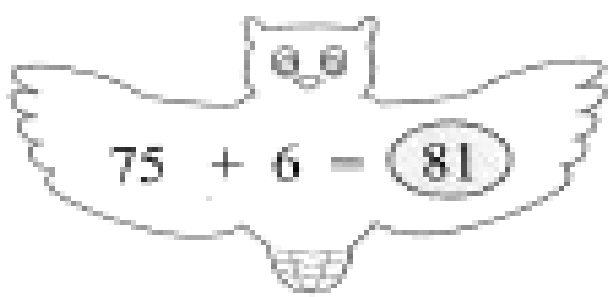
$$\begin{array}{r} 44 \\ + \boxed{} \\ \hline 63 \end{array}$$

$$\begin{array}{r} 55 \\ + \boxed{} \\ \hline 81 \end{array}$$

$$\begin{array}{r} 72 \\ + \boxed{} \\ \hline 90 \end{array}$$

$$\begin{array}{r} 29 \\ + \boxed{} \\ \hline 52 \end{array}$$

$$\begin{array}{r} 33 \\ + \boxed{} \\ \hline 80 \end{array}$$





ចំណោម

រកផលបូកនៃ 38 និង 25

$$\begin{array}{r}
 38 \\
 + 25 \\
 \hline
 \square
 \end{array}$$

ផលបូកស្មើ

ពេលត្រឹកពេលទឹកចាក់ថ្នាំឱ្យសិស្សបាន 47 នាក់
 ហើយល្ងាចចាក់បាន 28 នាក់ទៀត ។
 តើពេលទឹកចាក់ថ្នាំសរុបបានប៉ុន្មាននាក់ ?

$$\begin{array}{r}
 47 \\
 + 28 \\
 \hline
 \square
 \end{array}$$

ចាក់ថ្នាំបាន នាក់

មីងសំលក់មាន់បាន 52 ក្បាល
 ហើយភាត់លក់ដៃម 19 ក្បាលទៀត ។
 តើភាត់លក់មាន់ទាំងអស់បានប៉ុន្មានក្បាល ?

$$\begin{array}{r}
 52 \\
 + 19 \\
 \hline
 \square
 \end{array}$$



លក់បាន ក្បាល



ដកគ្នានិច្ច

$$\begin{array}{r} 56 \\ - 4 \\ \hline \boxed{52} \end{array}$$

$$\begin{array}{r} 88 \\ - 7 \\ \hline \boxed{} \end{array}$$

$$\begin{array}{r} 75 \\ - 3 \\ \hline \boxed{} \end{array}$$

$$\begin{array}{r} 37 \\ - 5 \\ \hline \boxed{} \end{array}$$

$$\begin{array}{r} 44 \\ - 4 \\ \hline \boxed{} \end{array}$$

$$\begin{array}{r} 53 \\ - 2 \\ \hline \boxed{} \end{array}$$

$$\begin{array}{r} 17 \\ - 6 \\ \hline \boxed{} \end{array}$$

$$\begin{array}{r} 55 \\ - 5 \\ \hline \boxed{} \end{array}$$

$$\begin{array}{r} 84 \\ - 3 \\ \hline \boxed{} \end{array}$$

$$\begin{array}{r} 52 \\ - 2 \\ \hline \boxed{} \end{array}$$

$$\begin{array}{r} 72 \\ - 2 \\ \hline \boxed{} \end{array}$$

$$\begin{array}{r} 94 \\ - 3 \\ \hline \boxed{} \end{array}$$

 គុណនា

$$\begin{array}{r} 57 \\ - 34 \\ \hline 23 \end{array}$$

$$\begin{array}{r} 88 \\ - 17 \\ \hline \end{array}$$

$$\begin{array}{r} 94 \\ - 23 \\ \hline \end{array}$$

$$\begin{array}{r} 55 \\ - 44 \\ \hline \end{array}$$

$$\begin{array}{r} 33 \\ - 12 \\ \hline \end{array}$$

$$\begin{array}{r} 37 \\ - 15 \\ \hline \end{array}$$

$$\begin{array}{r} 66 \\ - 44 \\ \hline \end{array}$$


$$\begin{array}{r} 27 \\ - 16 \\ \hline \end{array}$$

$$\begin{array}{r} 88 \\ - 77 \\ \hline \end{array}$$

$$\begin{array}{r} 92 \\ - 81 \\ \hline \end{array}$$

$$\begin{array}{r} 88 \\ - 66 \\ \hline \end{array}$$

$$\begin{array}{r} 70 \\ - 60 \\ \hline \end{array}$$



បំពេញចំនួន

$$\begin{array}{r} 87 \\ - \square \\ \hline 32 \end{array}$$

$$\begin{array}{r} 82 \\ - \square \\ \hline 60 \end{array}$$

$$\begin{array}{r} 47 \\ - \square \\ \hline 30 \end{array}$$

$$\begin{array}{r} 52 \\ - \square \\ \hline 10 \end{array}$$

$$\begin{array}{r} 17 \\ - \square \\ \hline 4 \end{array}$$

$$\begin{array}{r} 43 \\ - \square \\ \hline 30 \end{array}$$

$$\begin{array}{r} 27 \\ - \square \\ \hline 12 \end{array}$$

$$\begin{array}{r} 73 \\ - \square \\ \hline 30 \end{array}$$

$$\begin{array}{r} 95 \\ - \square \\ \hline 51 \end{array}$$

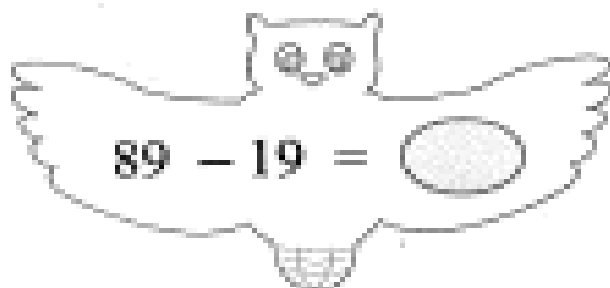
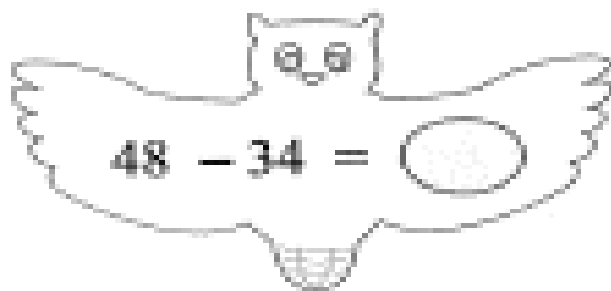
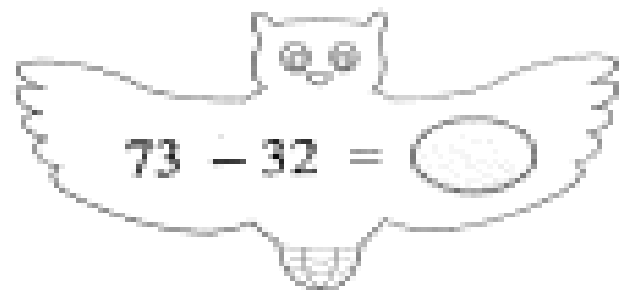
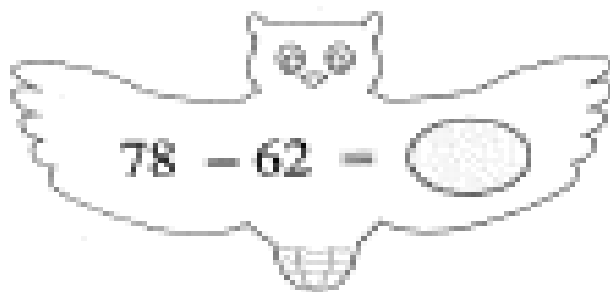
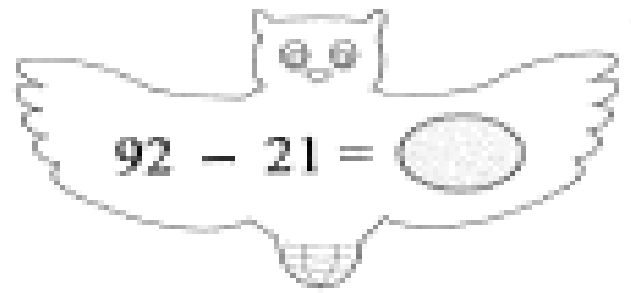
$$\begin{array}{r} 66 \\ - \square \\ \hline 22 \end{array}$$

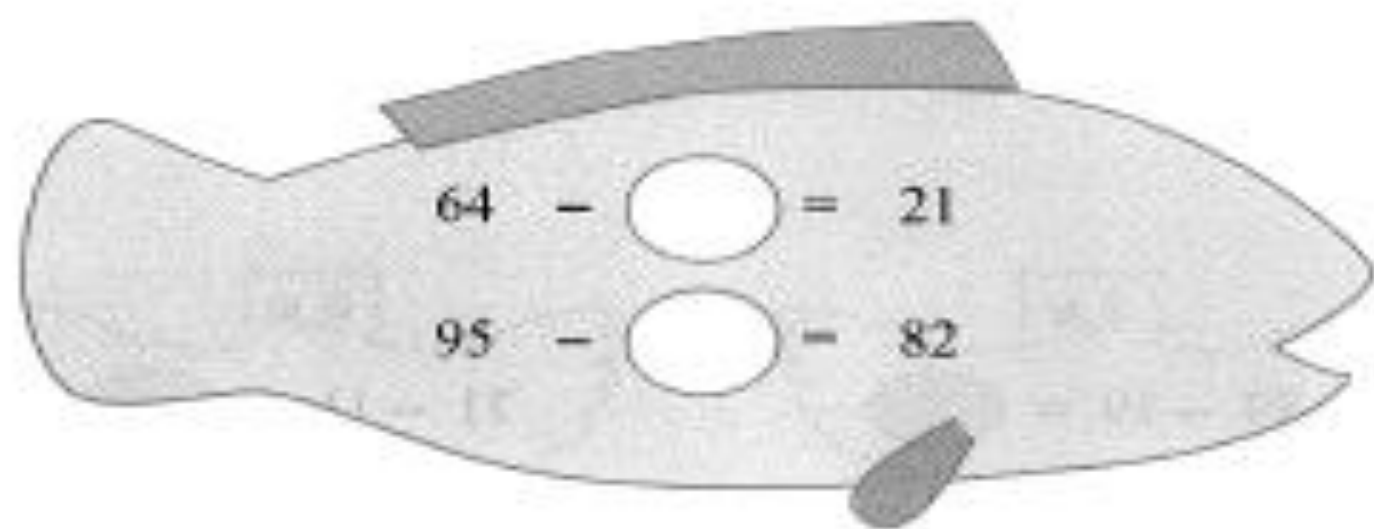
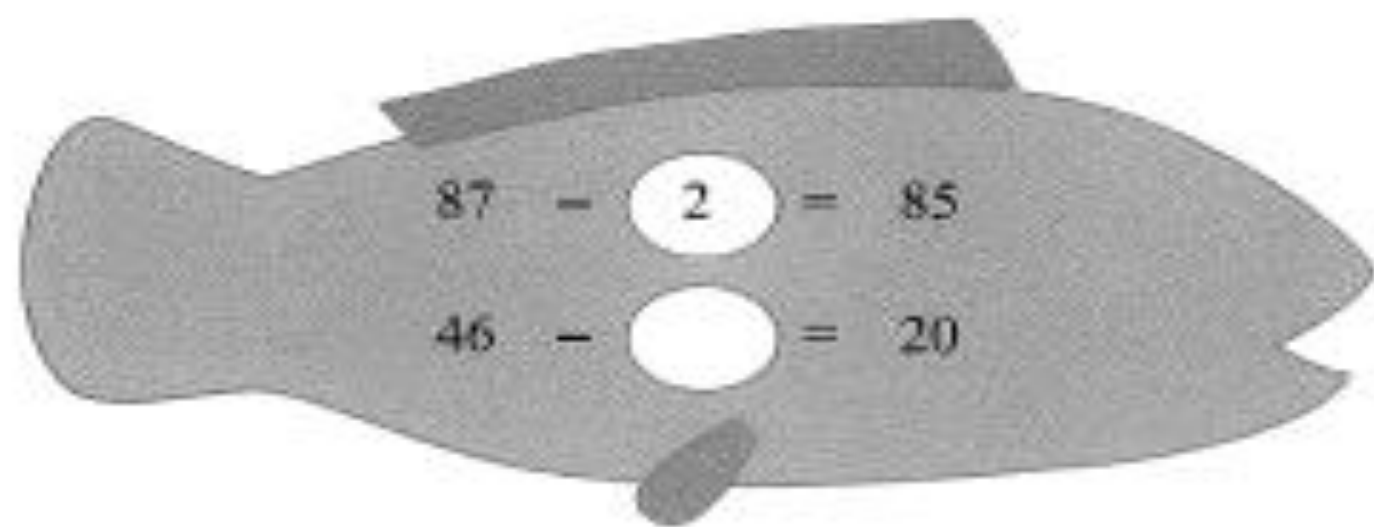
$$\begin{array}{r} 49 \\ - \square \\ \hline 12 \end{array}$$

$$\begin{array}{r} 79 \\ - \square \\ \hline 23 \end{array}$$



គណនា







ដកមាតិកា

$$\begin{array}{r} 35 \\ - 7 \\ \hline 28 \end{array}$$

$$\begin{array}{r} 43 \\ - 8 \\ \hline \end{array}$$

$$\begin{array}{r} 81 \\ - 9 \\ \hline \end{array}$$

$$\begin{array}{r} 42 \\ - 6 \\ \hline \end{array}$$

$$\begin{array}{r} 38 \\ - 9 \\ \hline \end{array}$$

$$\begin{array}{r} 92 \\ - 7 \\ \hline \end{array}$$

$$\begin{array}{r} 53 \\ - 8 \\ \hline \end{array}$$

$$\begin{array}{r} 47 \\ - 8 \\ \hline \end{array}$$

$$\begin{array}{r} 73 \\ - 5 \\ \hline \end{array}$$

$$\begin{array}{r} 61 \\ - 5 \\ \hline \end{array}$$

$$\begin{array}{r} 77 \\ - 9 \\ \hline \end{array}$$

$$\begin{array}{r} 27 \\ - 8 \\ \hline \end{array}$$



គណនា

$$\begin{array}{r} 64 \\ - 27 \\ \hline 37 \end{array}$$

$$\begin{array}{r} 55 \\ - 16 \\ \hline \end{array}$$

$$\begin{array}{r} 44 \\ - 15 \\ \hline \end{array}$$

$$\begin{array}{r} 71 \\ - 18 \\ \hline \end{array}$$

$$\begin{array}{r} 62 \\ - 48 \\ \hline \end{array}$$

$$\begin{array}{r} 32 \\ - 17 \\ \hline \end{array}$$

$$\begin{array}{r} 81 \\ - 23 \\ \hline \end{array}$$

$$\begin{array}{r} 37 \\ - 18 \\ \hline \end{array}$$

$$\begin{array}{r} 22 \\ - 14 \\ \hline \end{array}$$

$$\begin{array}{r} 91 \\ - 23 \\ \hline \end{array}$$

$$\begin{array}{r} 47 \\ - 19 \\ \hline \end{array}$$

$$\begin{array}{r} 82 \\ - 29 \\ \hline \end{array}$$



បំពេញចំនួន

$$\begin{array}{r} 62 \\ - \quad \square \\ \hline 54 \end{array}$$

$$\begin{array}{r} 24 \\ - \quad \square \\ \hline 17 \end{array}$$

$$\begin{array}{r} 37 \\ - \quad \square \\ \hline 29 \end{array}$$

$$\begin{array}{r} 45 \\ - \quad \square \\ \hline 38 \end{array}$$

$$\begin{array}{r} 54 \\ - \quad \square \\ \hline 45 \end{array}$$

$$\begin{array}{r} 64 \\ - \quad \square \\ \hline 57 \end{array}$$

$$\begin{array}{r} 46 \\ - \quad \square \\ \hline 38 \end{array}$$

$$\begin{array}{r} 73 \\ - \quad \square \\ \hline 69 \end{array}$$

$$\begin{array}{r} 37 \\ - \quad \square \\ \hline 29 \end{array}$$

$$\begin{array}{r} 92 \\ - \quad \square \\ \hline 89 \end{array}$$

$$\begin{array}{r} 47 \\ - \quad \square \\ \hline 35 \end{array}$$

$$\begin{array}{r} 77 \\ - \quad \square \\ \hline 68 \end{array}$$

បំពេញចំណុច

$$\begin{array}{r} 73 \\ - 34 \\ \hline 39 \end{array}$$

$$\begin{array}{r} 82 \\ - \square \\ \hline 58 \end{array}$$

$$\begin{array}{r} 28 \\ - \square \\ \hline 9 \end{array}$$

$$\begin{array}{r} 27 \\ - \square \\ \hline 8 \end{array}$$

$$\begin{array}{r} 37 \\ - \square \\ \hline 19 \end{array}$$

$$\begin{array}{r} 73 \\ - \square \\ \hline 48 \end{array}$$

$$\begin{array}{r} 72 \\ - \square \\ \hline 15 \end{array}$$

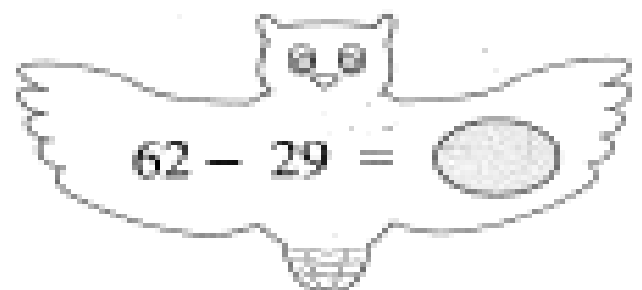
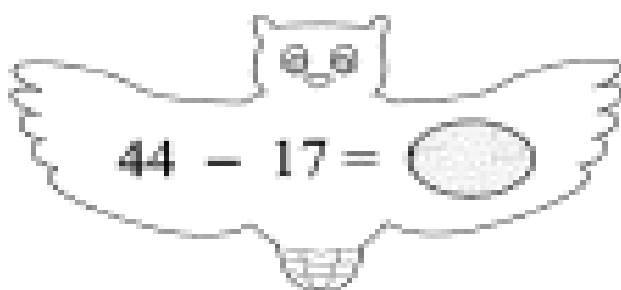
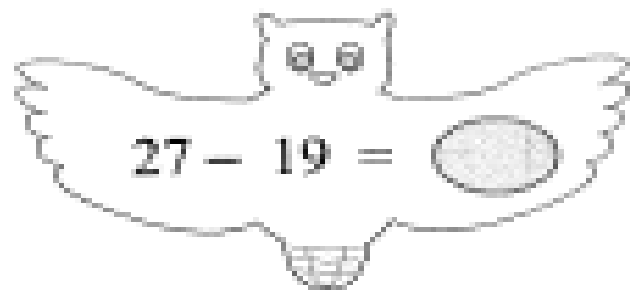
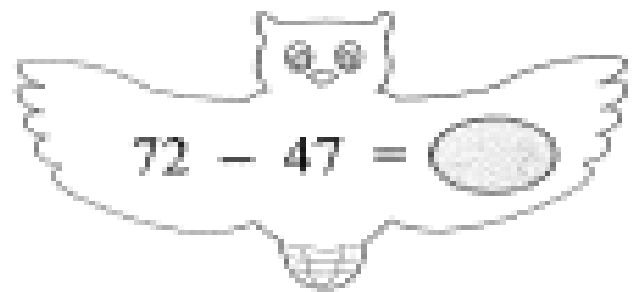
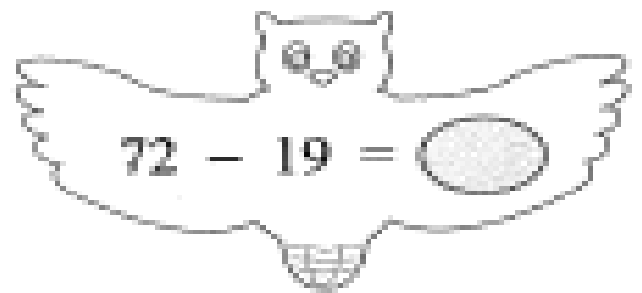
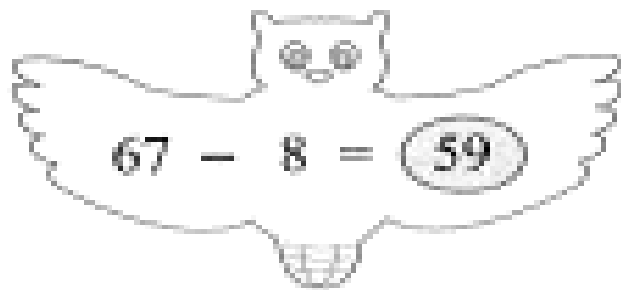
$$\begin{array}{r} 46 \\ - \square \\ \hline 29 \end{array}$$

$$\begin{array}{r} 64 \\ - \square \\ \hline 49 \end{array}$$

$$\begin{array}{r} 82 \\ - \square \\ \hline 3 \end{array}$$

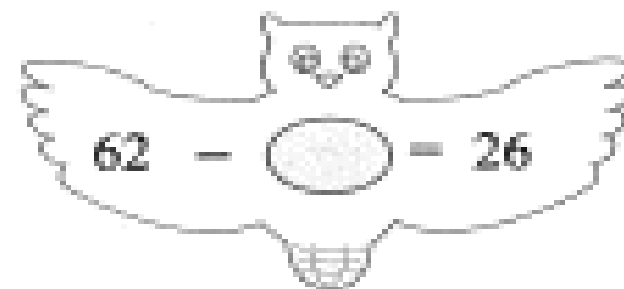
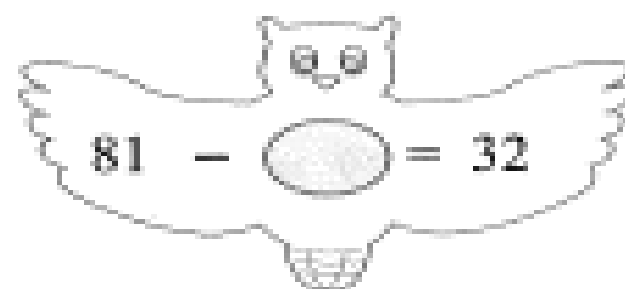
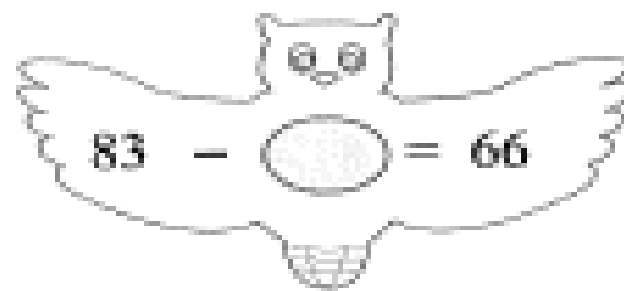
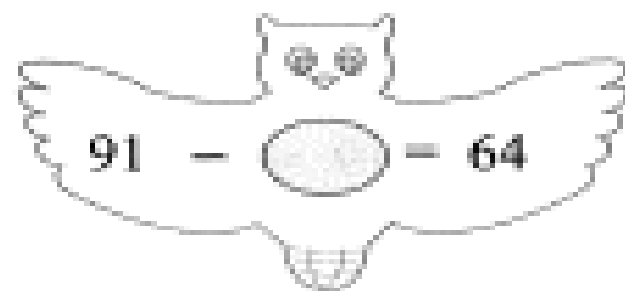
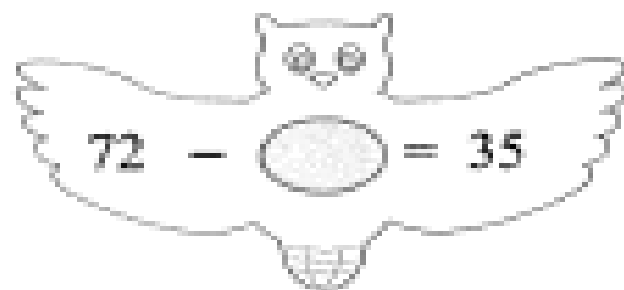
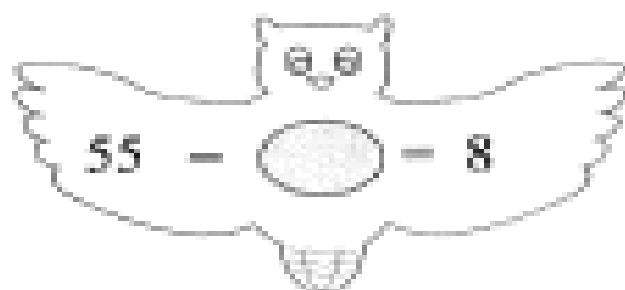
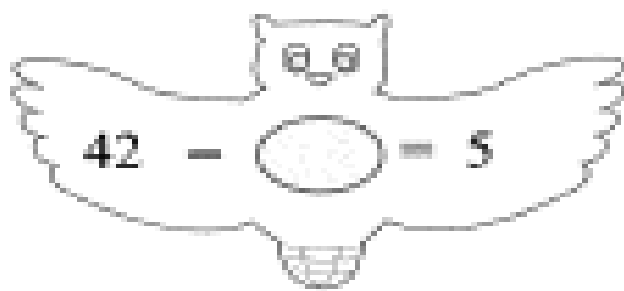
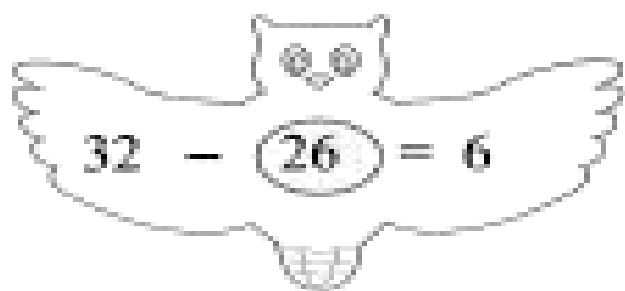
$$\begin{array}{r} 53 \\ - \square \\ \hline 16 \end{array}$$

$$\begin{array}{r} 35 \\ - \square \\ \hline 17 \end{array}$$





បំពេញចំនួន





ចំណោម

ថ្នាក់រៀនមួយមានសិស្ស 45 នាក់
ក្នុងនោះ សិស្សប្រុស 22 នាក់ ។
រកចំនួនសិស្សស្រី ។

$$\begin{array}{r} 45 \\ - 22 \\ \hline \end{array}$$



សិស្សស្រី នាក់

រកផលដករវាង 95 និង 17 ។

$$\begin{array}{r} 95 \\ - 17 \\ \hline \end{array}$$

ផលដកស្មើ

ពូសំបឹក្លីមមាន់និងទាសរុប 84 ក្បាល
បើមាន់មានចំនួន 32 ក្បាល ។
តើគាត់មានទាចំនួនប៉ុន្មាន ?

$$\begin{array}{r} 84 \\ - 32 \\ \hline \end{array}$$



ទាមានចំនួន ក្បាល



វិធីគុណ

បូកតួដូចគ្នា

$$2 + 2 + 2 = 6$$

$$5 + 5 + 5 = \boxed{15}$$

$$3 + 3 + 3 + 3 = \boxed{}$$

$$6 + 6 + 6 + 6 = \boxed{}$$

$$7 + 7 + 7 + 7 = \boxed{}$$

$$8 + 8 + 8 + 8 = \boxed{}$$

$$9 + 9 + 9 + 9 = \boxed{}$$

សំគាល់

$$0 + 0 + 0 = \boxed{0}$$

វិធីគុណ

$$2 \times 3 = 6$$

$$5 \times \boxed{3} = \boxed{15}$$

$$3 \times \boxed{} = \boxed{}$$

$$6 \times \boxed{} = \boxed{}$$

$$7 \times \boxed{} = \boxed{}$$

$$8 \times \boxed{} = \boxed{}$$

$$9 \times \boxed{} = \boxed{}$$

$$0 \times \boxed{3} = \boxed{0}$$



បំពេញចំនួន

$$2 \times \boxed{1} = \boxed{2}$$



$$3 \times \boxed{} = \boxed{}$$



$$4 \times \boxed{} = \boxed{}$$



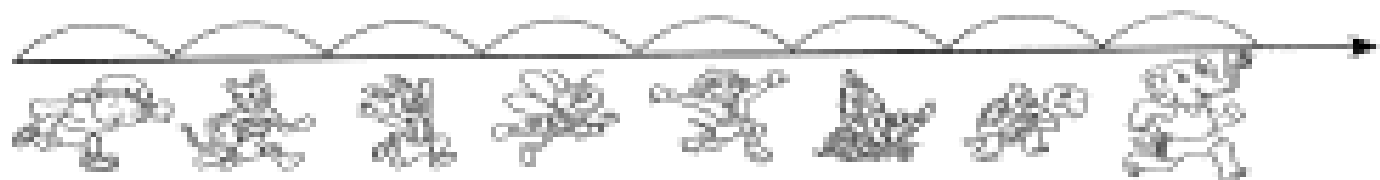
$$5 \times \boxed{} = \boxed{}$$




$$6 \times \boxed{} = \boxed{}$$





$$7 \times \boxed{} = \boxed{}$$






$$6 \times 4 = \square$$




$$5 \times 3 = \square$$


$$7 \times 3 = \square$$



$$4 \times 4 = \square$$

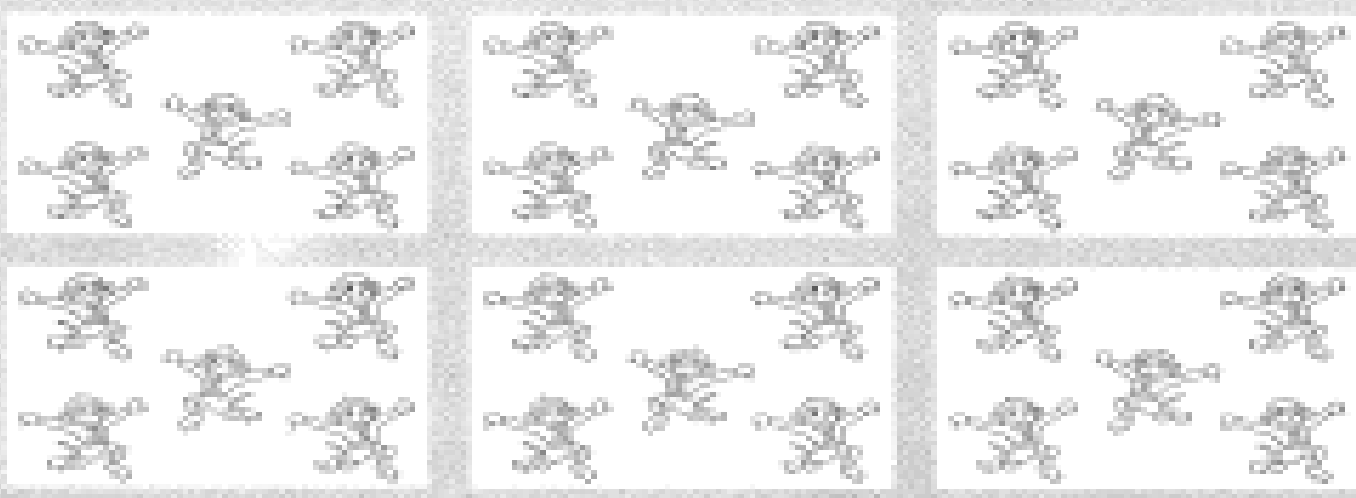


$$2 \times 5 = \square$$




$$6 \times 6 = \square$$


 **គណនា**



5 x 6 =



7 x 4 =



9 x 3 =





គណនា



$8 \times 4 = \square$



$5 \times 6 = \square$



$4 \times 8 = \square$

តួណាង

$3 \times 4 =$

$3 \times 9 =$

$5 \times 8 =$

$6 \times 4 =$

$3 \times 3 =$

$6 \times 3 =$

$6 \times 0 =$


$9 \times 4 =$

$5 \times 6 =$

$2 \times 9 =$

$7 \times 2 =$

$4 \times 7 =$





បំពេញតារាងនៃវិធីគុណ

x	1	2	3	4	5	6	7	8	9	10
1	1	2	3	4	5	6	7	8	9	10
2	2	4	6	8	10	12	14	16	18	20
3	3	6	9	12	15	18	21	24	27	30
4	4	8								
5	5	10								
6	6	12								
7	7	14								
8	8	16								
9	9	18								
10	10	20								

$4 \times 3 = \boxed{12}$



បំពេញតារាងនៃវិធីគុណ

x	2	5	6	3	8	7	4	1	9
3									
8								8	
5									
2									
7				21					
4									
9									
1									
8									




$$8 \times 1 = \boxed{8}$$

$$7 \times 3 = \boxed{21}$$



១ ចំណោទ

បានមួយមាននំ 6 ។
 តើបាន 7 មាននំប៉ុន្មាន ?




6 x 7 = មាននំ 



ក្នុងមួយជួរគេដាំដើមឈើ 8 ដើម ។ តើ 6 ជួរគេដាំដើមឈើប៉ុន្មានដើម ?

8 x 6 = ចំនួនដើមឈើ 

សិស្សម្នាក់ទទួលសៀវភៅ 5 ក្បាល ។
 តើគ្រូមានសៀវភៅប៉ុន្មានក្បាល
 ដើម្បីចែកឱ្យសិស្ស 6 នាក់ ?






5 x 6 = ចំនួនសៀវភៅ 


?

ប្រភាគ

តើរូបណាតាងឱ្យប្រភាគ $\frac{1}{4}$



តើរូបណាតាងឱ្យប្រភាគ $\frac{1}{2}$



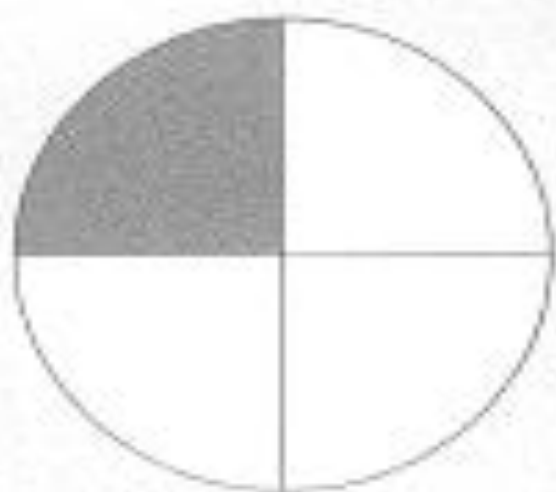
តើរូបណាតាងឱ្យប្រភាគ $\frac{1}{2}$



តើរូបណាតាងឱ្យប្រភាគ $\frac{1}{4}$



ជាតំរូបដែលតាងឱ្យប្រភាគ



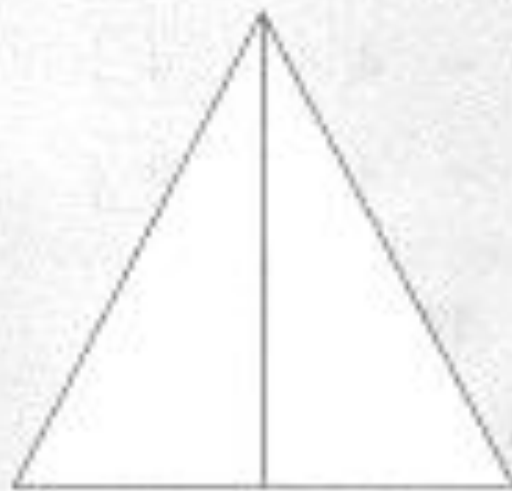
$\frac{1}{4}$



$\frac{1}{2}$



$\frac{1}{4}$



$\frac{1}{2}$

ការប្រៀបធៀបវិធីដកនិងវិធីចែក

វិធីដកក្នុង 2

$$6 - 2 = \boxed{4}$$

$$4 - 2 = \boxed{2}$$

$$2 - 2 = \boxed{0}$$

វិធីចែក

$$6 : 2 = \boxed{3}$$

វិធីដកក្នុង 4

$$12 - 4 = \boxed{8}$$

$$8 - 4 = \boxed{4}$$

$$4 - 4 = \boxed{0}$$

វិធីចែក

$$12 : 4 = \boxed{}$$

វិធីដកក្នុង 5

$$15 - 5 = \boxed{10}$$

$$10 - 5 = \boxed{5}$$

$$5 - 5 = \boxed{0}$$

វិធីចែក

$$15 : 5 = \boxed{}$$



បំពេញចំនួន

$$8 : \boxed{4} = \boxed{2}$$



$$9 : \boxed{} = \boxed{}$$



$$12 : \boxed{} = \boxed{}$$



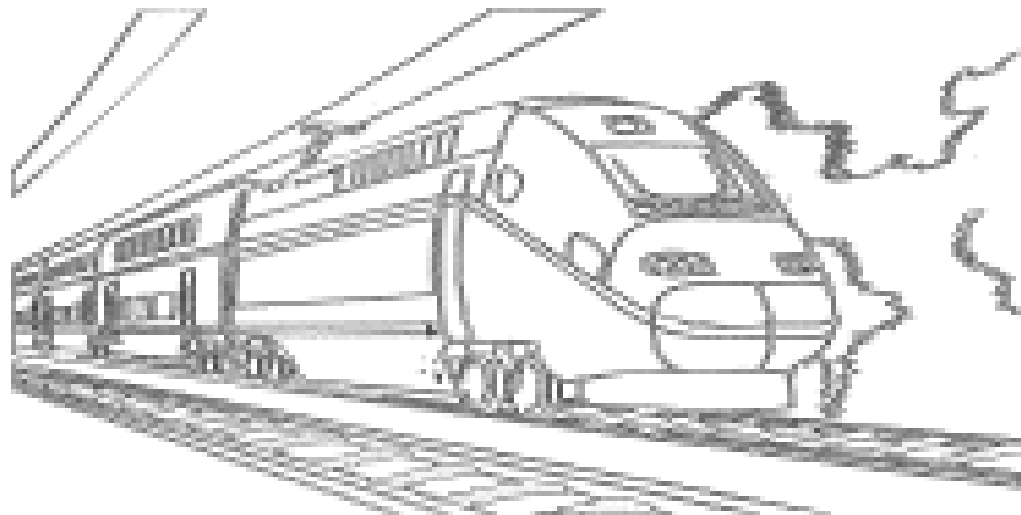
$$20 : \boxed{} = \boxed{}$$




$$21 : \boxed{} = \boxed{}$$




$$15 : \boxed{} = \boxed{}$$



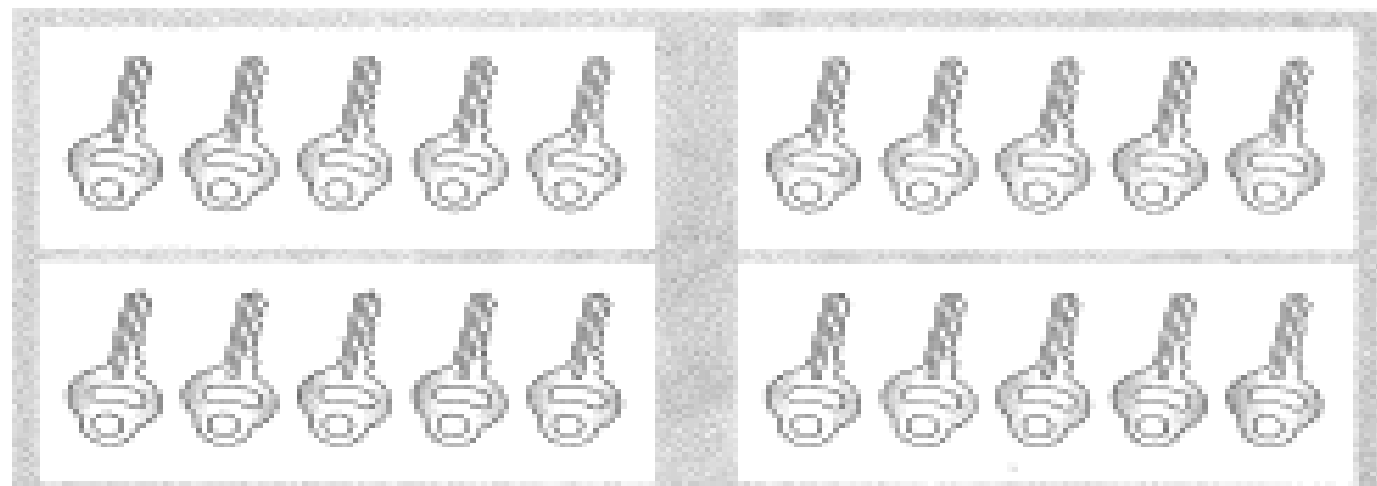
គណនា



12 : 3 =




12 : 4 =




20 : 5 =

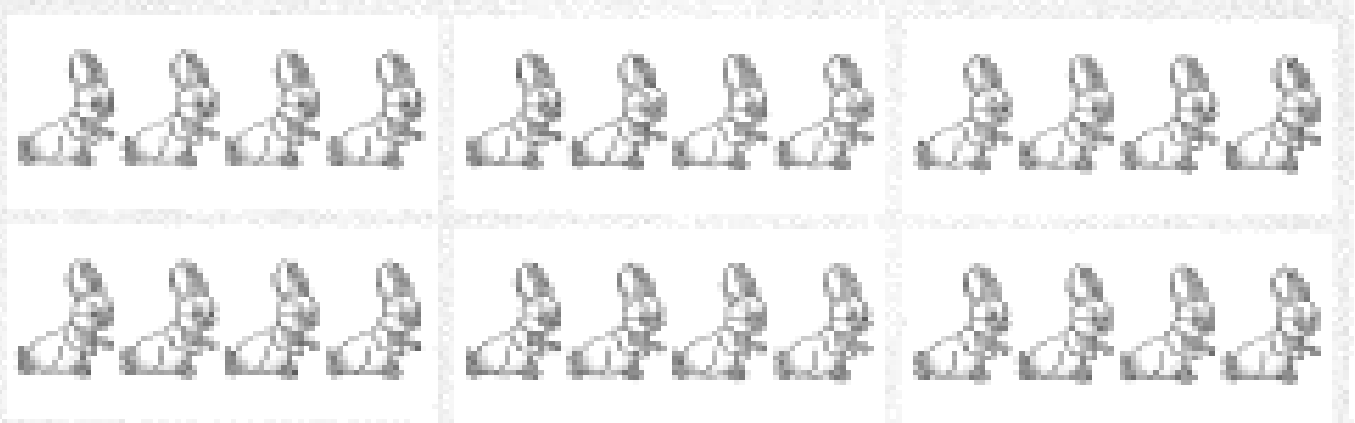
គណនា



$$18 : 6 = \square$$









$$30 : 5 = \square$$







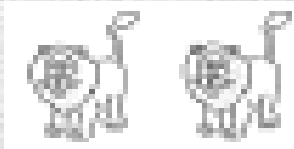
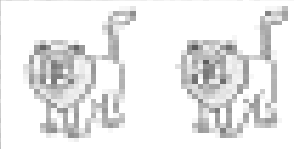


$$24 : 4 = \square$$







គណិត

$18 : 3 = \square$

$16 : 2 = \square$


		
		

$36 : 6 = \square$


$$14 : 2 = \square$$




$$16 : 4 = \square$$




$$20 : 5 = \square$$




$$25 : 5 = \square$$




$$28 : 7 = \square$$




$$28 : 4 = \square$$




21 : 3 =




42 : 7 =





49 : 7 =




32 : 4 =



56 : 8 =



45 : 9 =



1 ផ្ទៀងផ្ទាត់វិធីចែក

$$4 \times 3 = 12$$

$$12 : 4 = 3$$

$$3 \times 4 = 12$$

$$12 : 3 = 4$$

គណនាវិធីចែក រួចផ្ទៀងផ្ទាត់វិធីគុណ

$$15 : 3 = 5$$

$$3 \times 5 = 15$$

$$24 : 2 = \square$$

$$\square \times \square = \square$$

$$18 : 2 = \square$$

$$\square \times \square = \square$$

$$30 : 6 = \square$$

$$\square \times \square = \square$$

$$14 : 2 = \square$$

$$\square \times \square = \square$$

$$42 : 7 = \square$$

$$\square \times \square = \square$$




បំពេញចំនួន




$$3 \times \square = \square$$

$$9 : \square = \square$$



$$8 \times \square = \square$$

$$32 : \square = \square$$



$$5 \times \square = \square$$


$$30 : \square = \square$$

ចំណោទ

គេយកខ្លោងដៃ 15 ដើម

ទៅចែកឱ្យសិស្ស 3 នាក់ ។


តើម្នាក់ៗទទួលបានខ្លោងដៃប៉ុន្មាន ?



$15 : 3 = \square$ ម្នាក់ៗទទួលបាន \square ដើម

សិស្ស 4 នាក់ មានសៀវភៅ 20 ក្បាល ។

តើម្នាក់ៗមានសៀវភៅប៉ុន្មាន ?



$20 : 4 = \square$ ម្នាក់ៗមានសៀវភៅ \square ក្បាល

ក្នុងមួយជួរដាំដើមឈើបាន 6 ដើម ។ តើ 18 ដើមដាំបានប៉ុន្មានជួរ ?



$18 : 6 = \square$ ដើមឈើដាំបាន \square ជួរ



ប្រវែង

ខ្មៅដៃទាំងពីរដើមមានប្រវែងសរុប




5 សម



7 សម

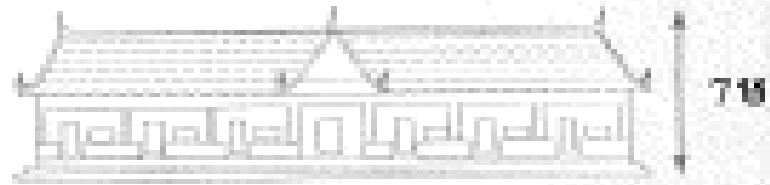
$$5 + 7 = \boxed{} \text{ សម}$$

ចង្កោលទង់ជាតិខ្ពស់ជាងសាលារៀន



10 ម

$$10 - 7 = \boxed{} \text{ ម}$$



7 ម

ខ្មៅដៃ 4 ដើមមានប្រវែង



8 សម



8 សម



8 សម




8 សម

$$8 \times 4 = \boxed{} \text{ សម}$$

ចម្ការមួយជុំមានចម្កាយ

40 ម



100 ម

40 ម

100 ម

$$40 + 100 + 40 + 100 = \boxed{} \text{ ម}$$

សំភាសៈ : សង់ទីម៉ែត្រ = សម , ម៉ែត្រ = ម



ទម្ងន់


ពូសំលក់ដំឡូងលើកទី 1 បាន 350 គក

និងលើកទី 2 បាន 78 គក ។

តើគាត់លក់ដំឡូងសរុបបានប៉ុន្មាន ?



$$350 + 78 = \square \text{ គក}$$



ខ្ញុំមានទម្ងន់ 125 គក



ខ្ញុំមានទម្ងន់ 85 គក

គោច្នន់ជាងជ្រូក

$$125 - 85 = \square \text{ គក}$$

ត្រីមួយក្បាលមានទម្ងន់ 5 គក ។

តើត្រី 7 ក្បាលមានទម្ងន់ប៉ុន្មាន គក ?




$$5 \times 7 = \square \text{ គក}$$

បារមួយមានស្រូវ 72 គក ។ គេផ្ទេរស្រូវនោះដាក់ក្នុងថង់ 8 ។

តើថង់នីមួយៗមានស្រូវប៉ុន្មាន ?

$$72 : 8 = \square \text{ គក}$$



សំភាសៈ : គីឡូក្រាម = គក



ចំណុះ

មីងសំលក់ទឹកស្អាតលើកទី 1 បាន 17 ល ហើយលើកទី 2 បាន 28 ល ។
តើគាត់លក់សរុបបានប៉ុន្មាន ?

$$17 + 28 = \boxed{} \text{ ល}$$

គាត់លក់សរុបបាន ល



ចុងមួយមានចំណុះច្រើនជាងក្នុងប៉ុន្មាន ?

$$35 - 25 = \boxed{} \text{ ល}$$


ចុងមានចំណុះច្រើនជាងក្នុង ល



ក្នុងមួយត្រង់ទឹកស្អាតបាន 7 ល ។ តើក្នុង 8 ត្រង់បានប៉ុន្មាន ?

$$7 \times 8 = \boxed{} \text{ ល}$$

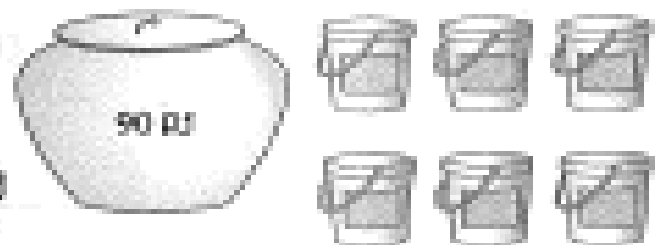
ត្រង់បាន ល



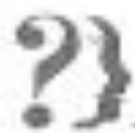
គេផ្ទេរទឹកពីរោងទៅចុង 6 ។ តើចុងនីមួយៗមានទឹកប៉ុន្មាន ?

$$90 : 6 = \boxed{} \text{ ល}$$

ចុងនីមួយៗមានចំណុះទឹក ល



សំភាល់ : លីត្រ = ល



វិធីបូកលេខបីខ្ទង់



បូកគ្នាទ្រព្យ

$$\begin{array}{r} 156 \\ + 32 \\ \hline 188 \end{array}$$

$$\begin{array}{r} 246 \\ + 42 \\ \hline \end{array}$$

$$\begin{array}{r} 555 \\ + 44 \\ \hline \end{array}$$

$$\begin{array}{r} 333 \\ + 66 \\ \hline \end{array}$$

$$\begin{array}{r} 770 \\ + 25 \\ \hline \end{array}$$

$$\begin{array}{r} 816 \\ + 33 \\ \hline \end{array}$$

$$\begin{array}{r} 444 \\ + 25 \\ \hline \end{array}$$

$$\begin{array}{r} 310 \\ + 74 \\ \hline \end{array}$$

$$\begin{array}{r} 907 \\ + 92 \\ \hline \end{array}$$

$$\begin{array}{r} 807 \\ + 81 \\ \hline \end{array}$$

$$\begin{array}{r} 302 \\ + 31 \\ \hline \end{array}$$

$$\begin{array}{r} 527 \\ + 31 \\ \hline \end{array}$$



គណនា

$$\begin{array}{r} + 331 \\ + 252 \\ \hline 583 \end{array}$$

$$\begin{array}{r} + 210 \\ + 246 \\ \hline \end{array}$$

$$\begin{array}{r} + 114 \\ + 103 \\ \hline \end{array}$$

$$\begin{array}{r} + 113 \\ + 305 \\ \hline \end{array}$$

$$\begin{array}{r} + 352 \\ + 123 \\ \hline \end{array}$$

$$\begin{array}{r} + 413 \\ + 173 \\ \hline \end{array}$$

$$\begin{array}{r} + 156 \\ + 543 \\ \hline \end{array}$$

$$\begin{array}{r} + 328 \\ + 571 \\ \hline \end{array}$$

$$\begin{array}{r} + 182 \\ + 517 \\ \hline \end{array}$$

$$\begin{array}{r} + 203 \\ + 750 \\ \hline \end{array}$$

$$\begin{array}{r} + 250 \\ + 307 \\ \hline \end{array}$$

$$\begin{array}{r} + 668 \\ + 121 \\ \hline \end{array}$$



បំពេញចំនួន

$$\begin{array}{r} 326 \\ + \quad 52 \\ \hline 378 \end{array}$$

$$\begin{array}{r} 513 \\ + \quad \square \\ \hline 575 \end{array}$$

$$\begin{array}{r} 372 \\ + \quad \square \\ \hline 395 \end{array}$$

$$\begin{array}{r} 371 \\ + \quad \square \\ \hline 399 \end{array}$$

$$\begin{array}{r} 814 \\ + \quad \square \\ \hline 888 \end{array}$$

$$\begin{array}{r} 309 \\ + \quad \square \\ \hline 379 \end{array}$$

$$\begin{array}{r} 271 \\ + \quad \square \\ \hline 298 \end{array}$$

$$\begin{array}{r} 828 \\ + \quad \square \\ \hline 899 \end{array}$$

$$\begin{array}{r} 743 \\ + \quad \square \\ \hline 777 \end{array}$$

$$\begin{array}{r} 398 \\ + \quad \square \\ \hline 389 \end{array}$$

$$\begin{array}{r} 451 \\ + \quad \square \\ \hline 497 \end{array}$$

$$\begin{array}{r} 676 \\ + \quad \square \\ \hline 689 \end{array}$$



បំពេញចំនួន

$$\begin{array}{r} 282 \\ + \\ \boxed{510} \\ \hline 792 \end{array}$$

$$\begin{array}{r} 423 \\ + \\ \boxed{} \\ \hline 657 \end{array}$$

$$\begin{array}{r} 506 \\ + \\ \boxed{} \\ \hline 699 \end{array}$$

$$\begin{array}{r} 443 \\ + \\ \boxed{} \\ \hline 599 \end{array}$$

$$\begin{array}{r} 710 \\ + \\ \boxed{} \\ \hline 828 \end{array}$$

$$\begin{array}{r} 813 \\ + \\ \boxed{} \\ \hline 957 \end{array}$$

$$\begin{array}{r} 731 \\ + \\ \boxed{} \\ \hline 977 \end{array}$$

$$\begin{array}{r} 709 \\ + \\ \boxed{} \\ \hline 889 \end{array}$$

$$\begin{array}{r} 724 \\ + \\ \boxed{} \\ \hline 948 \end{array}$$

$$\begin{array}{r} 413 \\ + \\ \boxed{} \\ \hline 588 \end{array}$$

$$\begin{array}{r} 523 \\ + \\ \boxed{} \\ \hline 779 \end{array}$$

$$\begin{array}{r} 709 \\ + \\ \boxed{} \\ \hline 879 \end{array}$$

គណិត គណិត

$234 + 522 = \square$

$504 + 64 = \square$

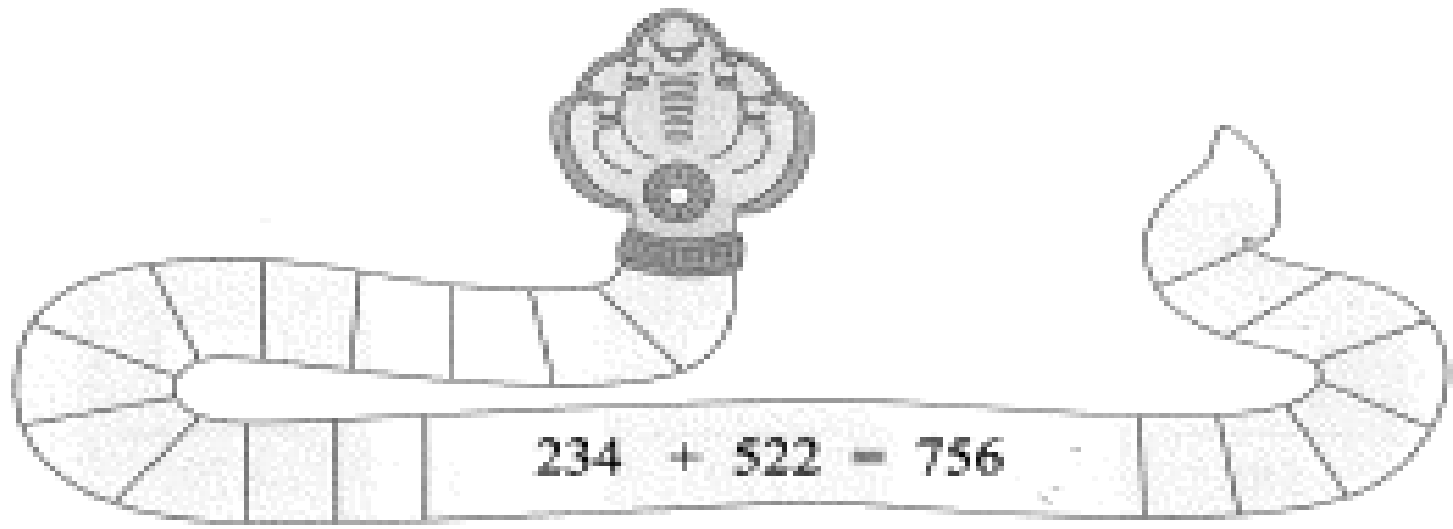
$703 + 72 = \square$

$405 + 202 = \square$

$333 + 404 = \square$

$472 + 222 = \square$

$101 + 303 = \square$





បំពេញចំនួន

$$182 + 810 = 992$$

$$273 + \square = 777$$

$$718 + \square = 759$$

$$906 + \square = 999$$

$$601 + \square = 777$$

$$818 + \square = 870$$

បូកមានត្រីមូក

$$\begin{array}{r} + 156 \\ + 78 \\ \hline 234 \end{array}$$

$$\begin{array}{r} + 182 \\ + 27 \\ \hline \end{array}$$

$$\begin{array}{r} + 928 \\ + 28 \\ \hline \end{array}$$

$$\begin{array}{r} + 244 \\ + 37 \\ \hline \end{array}$$

$$\begin{array}{r} + 436 \\ + 36 \\ \hline \end{array}$$

$$\begin{array}{r} + 678 \\ + 71 \\ \hline \end{array}$$

$$\begin{array}{r} + 178 \\ + 75 \\ \hline \end{array}$$

$$\begin{array}{r} + 119 \\ + 64 \\ \hline \end{array}$$

$$\begin{array}{r} + 406 \\ + 57 \\ \hline \end{array}$$

$$\begin{array}{r} + 552 \\ + 82 \\ \hline \end{array}$$

$$\begin{array}{r} + 413 \\ + 93 \\ \hline \end{array}$$

$$\begin{array}{r} + 368 \\ + 86 \\ \hline \end{array}$$



គណនា

$$\begin{array}{r} 373 \\ + 270 \\ \hline 643 \end{array}$$

$$\begin{array}{r} 445 \\ + 276 \\ \hline \end{array}$$

$$\begin{array}{r} 708 \\ + 273 \\ \hline \end{array}$$

$$\begin{array}{r} 456 \\ + 236 \\ \hline \end{array}$$

$$\begin{array}{r} 655 \\ + 277 \\ \hline \end{array}$$

$$\begin{array}{r} 379 \\ + 132 \\ \hline \end{array}$$

$$\begin{array}{r} 509 \\ + 293 \\ \hline \end{array}$$

$$\begin{array}{r} 778 \\ + 126 \\ \hline \end{array}$$

$$\begin{array}{r} 528 \\ + 188 \\ \hline \end{array}$$

$$\begin{array}{r} 678 \\ + 177 \\ \hline \end{array}$$

$$\begin{array}{r} 739 \\ + 181 \\ \hline \end{array}$$

$$\begin{array}{r} 492 \\ + 218 \\ \hline \end{array}$$



ပုံစံပြန်

$$\begin{array}{r} 156 \\ + \boxed{67} \\ \hline 223 \end{array}$$

$$\begin{array}{r} 776 \\ + \square \\ \hline 802 \end{array}$$

$$\begin{array}{r} 703 \\ + \square \\ \hline 792 \end{array}$$

$$\begin{array}{r} 424 \\ + \square \\ \hline 516 \end{array}$$

$$\begin{array}{r} 525 \\ + \square \\ \hline 574 \end{array}$$

$$\begin{array}{r} 819 \\ + \square \\ \hline 884 \end{array}$$

$$\begin{array}{r} 848 \\ + \square \\ \hline 906 \end{array}$$


$$\begin{array}{r} 717 \\ + \square \\ \hline 801 \end{array}$$

$$\begin{array}{r} 725 \\ + \square \\ \hline 810 \end{array}$$

$$\begin{array}{r} 393 \\ + \square \\ \hline 421 \end{array}$$

$$\begin{array}{r} 616 \\ + \square \\ \hline 725 \end{array}$$

$$\begin{array}{r} 209 \\ + \square \\ \hline 314 \end{array}$$



បំពេញចំនួន

$$\begin{array}{r} 629 \\ + 184 \\ \hline 813 \end{array}$$

$$\begin{array}{r} 570 \\ + \square \\ \hline 729 \end{array}$$

$$\begin{array}{r} 550 \\ + \square \\ \hline 705 \end{array}$$

$$\begin{array}{r} 508 \\ + \square \\ \hline 807 \end{array}$$

$$\begin{array}{r} 662 \\ + \square \\ \hline 917 \end{array}$$

$$\begin{array}{r} 607 \\ + \square \\ \hline 812 \end{array}$$

$$\begin{array}{r} 207 \\ + \square \\ \hline 371 \end{array}$$

$$\begin{array}{r} 355 \\ + \square \\ \hline 610 \end{array}$$

$$\begin{array}{r} 327 \\ + \square \\ \hline 574 \end{array}$$

$$\begin{array}{r} 424 \\ + \square \\ \hline 604 \end{array}$$

$$\begin{array}{r} 405 \\ + \square \\ \hline 680 \end{array}$$

$$\begin{array}{r} 680 \\ + \square \\ \hline 820 \end{array}$$



គណនា

$303 + 209 = \boxed{512}$

$717 + 108 = \boxed{}$

$144 + 77 = \boxed{}$

$902 + 29 = \boxed{}$

$171 + 181 = \boxed{}$

$172 + 189 = \boxed{}$

$299 + 388 = \boxed{}$

$303 + 288 = \boxed{}$





បំពេញចំនួន

$$304 + \boxed{108} = 412$$

$$717 + \boxed{} = 999$$

$$243 + \boxed{} = 300$$

$$912 + \boxed{} = 990$$

$$119 + \boxed{} = 323$$

$$811 + \boxed{} = 910$$

$$725 + \boxed{} = 970$$

$$735 + \boxed{} = 920$$



$$717 + \boxed{282} = 999$$

ចំណោទ

ពូសំមានទា 248 ក្បាល
 ភាត់ទីញថែម 48 ក្បាលទៀត ។
 តើភាត់មានទាទាំងអស់ប៉ុន្មានក្បាល ?


$$\begin{array}{r} 284 \\ + 48 \\ \hline \square \end{array}$$



ពូសំមានទា ក្បាល

ភូមិភ្នំមានស្រ្តី 386 នាក់ បុរស 341 នាក់ ។
 តើភូមិភ្នំមានប្រជាជនទាំងអស់ប៉ុន្មាននាក់ ?

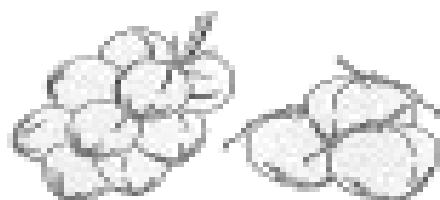
$$\begin{array}{r} 386 \\ + 341 \\ \hline \square \end{array}$$




ភូមិភ្នំមានប្រជាជន នាក់

ពេលព្រឹកគេលក់ដូងបាន 183 ថ្លៃ
 ពេលល្ងាចលក់បាន 48 ថ្លៃ ។
 តើភាត់លក់ដូងសរុបបានប៉ុន្មានថ្លៃ ?

$$\begin{array}{r} 183 \\ + 48 \\ \hline \square \end{array}$$



លក់ដូងសរុប ថ្លៃ



វិធីដកលេខបីខ្ទង់



ដកគ្នាទង្វិះ

$$\begin{array}{r} 575 \\ - 64 \\ \hline 511 \end{array}$$

$$\begin{array}{r} 176 \\ - 65 \\ \hline \end{array}$$

$$\begin{array}{r} 288 \\ - 66 \\ \hline \end{array}$$

$$\begin{array}{r} 486 \\ - 71 \\ \hline \end{array}$$

$$\begin{array}{r} 679 \\ - 28 \\ \hline \end{array}$$

$$\begin{array}{r} 588 \\ - 55 \\ \hline \end{array}$$

$$\begin{array}{r} 163 \\ - 63 \\ \hline \end{array}$$

$$\begin{array}{r} 382 \\ - 71 \\ \hline \end{array}$$

$$\begin{array}{r} 318 \\ - 17 \\ \hline \end{array}$$

$$\begin{array}{r} 843 \\ - 32 \\ \hline \end{array}$$

$$\begin{array}{r} 683 \\ - 73 \\ \hline \end{array}$$

$$\begin{array}{r} 471 \\ - 61 \\ \hline \end{array}$$

$$\begin{array}{r} 379 \\ - 267 \\ \hline \end{array}$$

$$\begin{array}{r} 581 \\ - 471 \\ \hline \end{array}$$

$$\begin{array}{r} 351 \\ - 241 \\ \hline \end{array}$$

$$\begin{array}{r} 692 \\ - 582 \\ \hline \end{array}$$

$$\begin{array}{r} 513 \\ - 412 \\ \hline \end{array}$$

$$\begin{array}{r} 401 \\ - 300 \\ \hline \end{array}$$

$$\begin{array}{r} 351 \\ - 241 \\ \hline \end{array}$$

$$\begin{array}{r} 333 \\ - 103 \\ \hline \end{array}$$

$$\begin{array}{r} 567 \\ - 416 \\ \hline \end{array}$$

$$\begin{array}{r} 165 \\ - 105 \\ \hline \end{array}$$

$$\begin{array}{r} 724 \\ - 524 \\ \hline \end{array}$$

$$\begin{array}{r} 659 \\ - 148 \\ \hline \end{array}$$



បំពេញចំណុច

$$\begin{array}{r} 127 \\ - \quad \boxed{25} \\ \hline 102 \end{array}$$

$$\begin{array}{r} 577 \\ - \quad \boxed{} \\ \hline 501 \end{array}$$

$$\begin{array}{r} 740 \\ - \quad \boxed{} \\ \hline 700 \end{array}$$

$$\begin{array}{r} 352 \\ - \quad \boxed{} \\ \hline 310 \end{array}$$

$$\begin{array}{r} 523 \\ - \quad \boxed{} \\ \hline 500 \end{array}$$

$$\begin{array}{r} 442 \\ - \quad \boxed{} \\ \hline 401 \end{array}$$

$$\begin{array}{r} 927 \\ - \quad \boxed{} \\ \hline 901 \end{array}$$

$$\begin{array}{r} 729 \\ - \quad \boxed{} \\ \hline 702 \end{array}$$

$$\begin{array}{r} 127 \\ - \quad \boxed{} \\ \hline 100 \end{array}$$

$$\begin{array}{r} 737 \\ - \quad \boxed{} \\ \hline 710 \end{array}$$

$$\begin{array}{r} 392 \\ - \quad \boxed{} \\ \hline 310 \end{array}$$

$$\begin{array}{r} 230 \\ - \quad \boxed{} \\ \hline 200 \end{array}$$



បំពេញចំនួន

$$\begin{array}{r} 670 \\ - \\ \boxed{157} \\ \hline 513 \end{array}$$

$$\begin{array}{r} 787 \\ - \\ \boxed{} \\ \hline 61 \end{array}$$

$$\begin{array}{r} 381 \\ - \\ \boxed{} \\ \hline 104 \end{array}$$

$$\begin{array}{r} 431 \\ - \\ \boxed{} \\ \hline 100 \end{array}$$

$$\begin{array}{r} 169 \\ - \\ \boxed{} \\ \hline 15 \end{array}$$

$$\begin{array}{r} 919 \\ - \\ \boxed{} \\ \hline 201 \end{array}$$

$$\begin{array}{r} 173 \\ - \\ \boxed{} \\ \hline 0 \end{array}$$


$$\begin{array}{r} 879 \\ - \\ \boxed{} \\ \hline 11 \end{array}$$

$$\begin{array}{r} 882 \\ - \\ \boxed{} \\ \hline 100 \end{array}$$

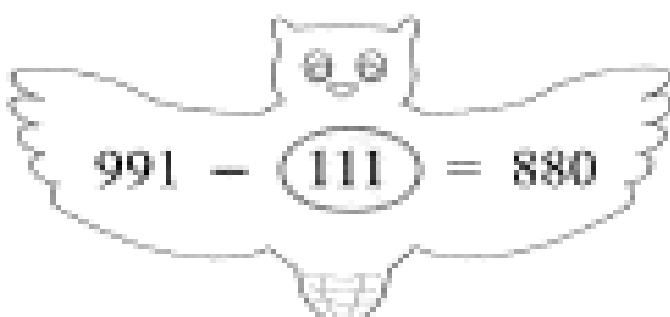
$$\begin{array}{r} 254 \\ - \\ \boxed{} \\ \hline 50 \end{array}$$

$$\begin{array}{r} 991 \\ - \\ \boxed{} \\ \hline 110 \end{array}$$

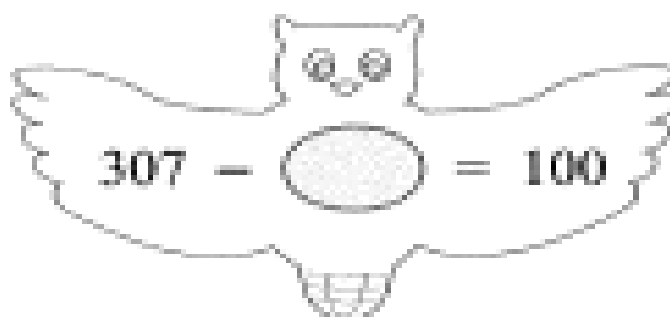
$$\begin{array}{r} 533 \\ - \\ \boxed{} \\ \hline 100 \end{array}$$



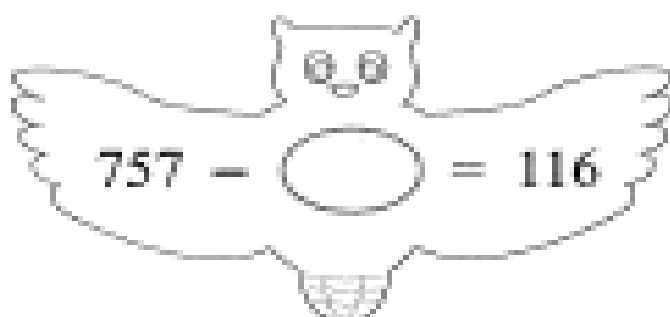
បំពេញចំនួន



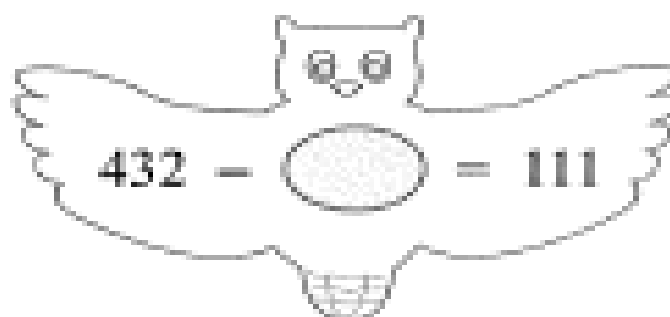
991 - 111 = 880



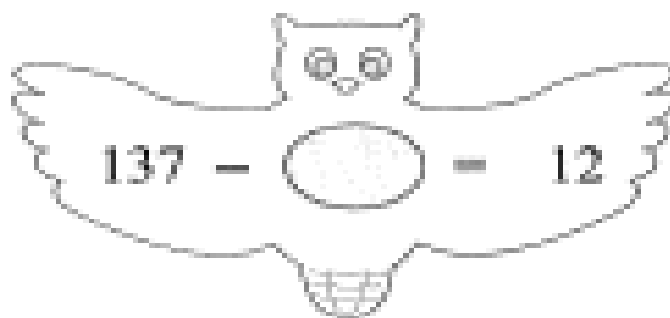
307 - = 100



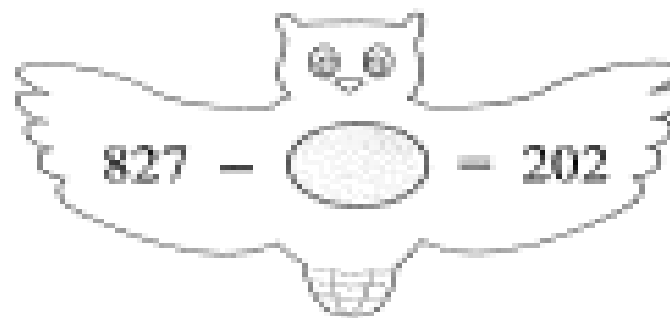
757 - = 116



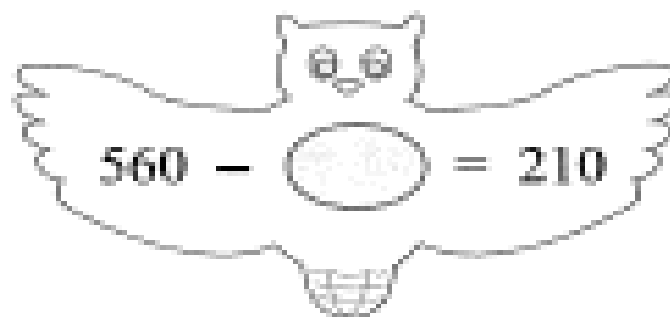
432 - = 111



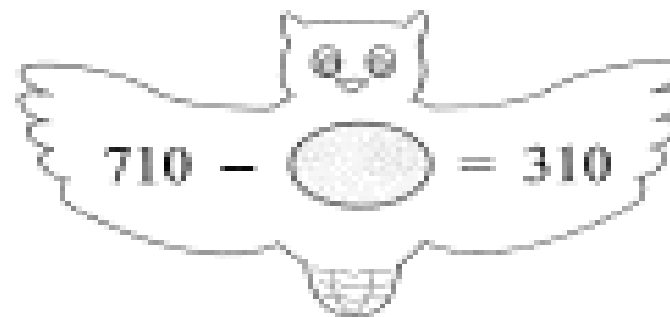
137 - = 12



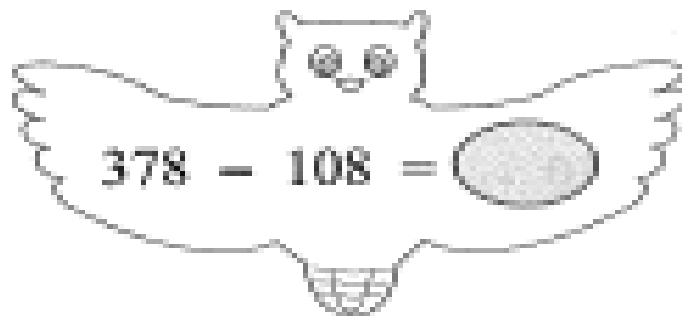
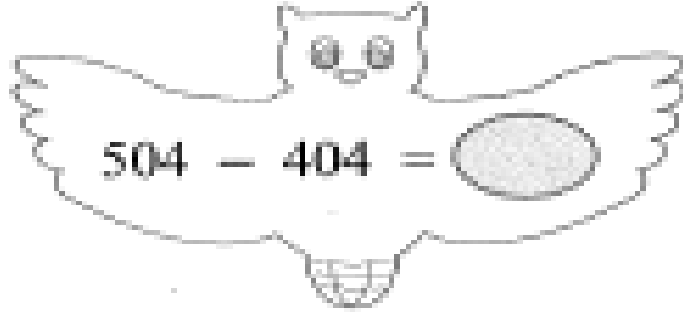
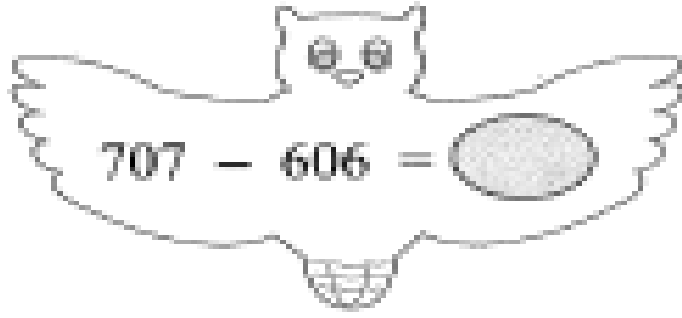
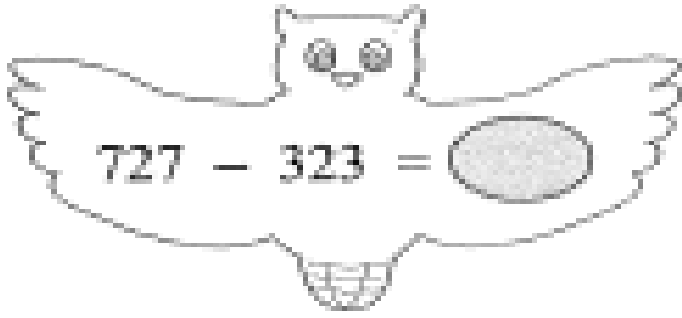
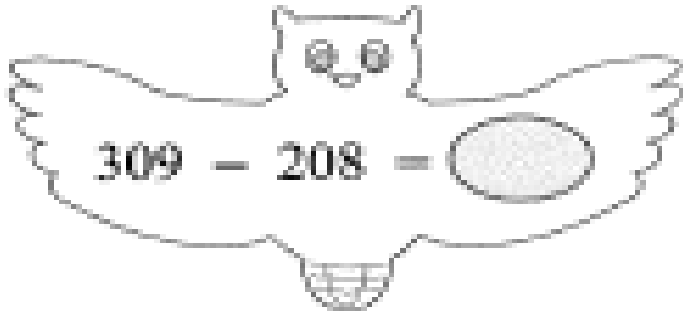
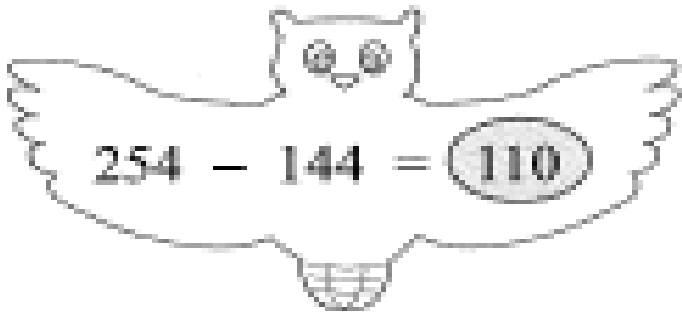
827 - = 202



560 - = 210



710 - = 310





ដកមាតិកា

$$\begin{array}{r} 230 \\ - 80 \\ \hline 150 \end{array}$$

$$\begin{array}{r} 691 \\ - 42 \\ \hline \end{array}$$

$$\begin{array}{r} 186 \\ - 79 \\ \hline \end{array}$$

$$\begin{array}{r} 914 \\ - 83 \\ \hline \end{array}$$

$$\begin{array}{r} 506 \\ - 27 \\ \hline \end{array}$$

$$\begin{array}{r} 810 \\ - 74 \\ \hline \end{array}$$

$$\begin{array}{r} 741 \\ - 18 \\ \hline \end{array}$$

$$\begin{array}{r} 292 \\ - 75 \\ \hline \end{array}$$

$$\begin{array}{r} 371 \\ - 82 \\ \hline \end{array}$$

$$\begin{array}{r} 280 \\ - 72 \\ \hline \end{array}$$

$$\begin{array}{r} 537 \\ - 48 \\ \hline \end{array}$$

$$\begin{array}{r} 620 \\ - 28 \\ \hline \end{array}$$

$$\begin{array}{r} 345 \\ - 172 \\ \hline 173 \end{array}$$

$$\begin{array}{r} 152 \\ - 124 \\ \hline \end{array}$$

$$\begin{array}{r} 564 \\ - 139 \\ \hline \end{array}$$

$$\begin{array}{r} 892 \\ - 707 \\ \hline \end{array}$$

$$\begin{array}{r} 975 \\ - 783 \\ \hline \end{array}$$

$$\begin{array}{r} 653 \\ - 492 \\ \hline \end{array}$$

$$\begin{array}{r} 817 \\ - 285 \\ \hline \end{array}$$

$$\begin{array}{r} 406 \\ - 237 \\ \hline \end{array}$$

$$\begin{array}{r} 387 \\ - 296 \\ \hline \end{array}$$

$$\begin{array}{r} 178 \\ - 99 \\ \hline \end{array}$$

$$\begin{array}{r} 974 \\ - 466 \\ \hline \end{array}$$

$$\begin{array}{r} 792 \\ - 247 \\ \hline \end{array}$$



បំពេញចំនួន

$$\begin{array}{r} 423 \\ - \quad \square \\ \hline 406 \end{array}$$

$$\begin{array}{r} 745 \\ - \quad \square \\ \hline 662 \end{array}$$

$$\begin{array}{r} 577 \\ - \quad \square \\ \hline 499 \end{array}$$

$$\begin{array}{r} 939 \\ - \quad \square \\ \hline 854 \end{array}$$

$$\begin{array}{r} 456 \\ - \quad \square \\ \hline 409 \end{array}$$

$$\begin{array}{r} 314 \\ - \quad \square \\ \hline 287 \end{array}$$

$$\begin{array}{r} 821 \\ - \quad \square \\ \hline 792 \end{array}$$

$$\begin{array}{r} 178 \\ - \quad \square \\ \hline 9 \end{array}$$

$$\begin{array}{r} 172 \\ - \quad \square \\ \hline 90 \end{array}$$

$$\begin{array}{r} 250 \\ - \quad \square \\ \hline 195 \end{array}$$

$$\begin{array}{r} 417 \\ - \quad \square \\ \hline 340 \end{array}$$

$$\begin{array}{r} 900 \\ - \quad \square \\ \hline 868 \end{array}$$



បំពេញចំនួន

$$\begin{array}{r} 421 \\ - 131 \\ \hline 290 \end{array}$$

$$\begin{array}{r} 747 \\ - \square \\ \hline 482 \end{array}$$

$$\begin{array}{r} 806 \\ - \square \\ \hline 199 \end{array}$$

$$\begin{array}{r} 555 \\ - \square \\ \hline 295 \end{array}$$

$$\begin{array}{r} 693 \\ - \square \\ \hline 219 \end{array}$$

$$\begin{array}{r} 412 \\ - \square \\ \hline 286 \end{array}$$

$$\begin{array}{r} 909 \\ - \square \\ \hline 750 \end{array}$$

$$\begin{array}{r} 711 \\ - \square \\ \hline 489 \end{array}$$

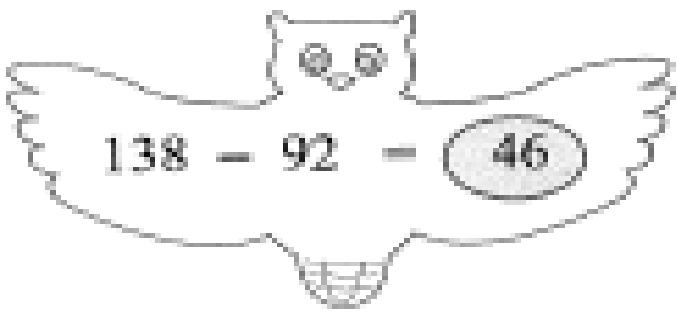
$$\begin{array}{r} 534 \\ - \square \\ \hline 179 \end{array}$$

$$\begin{array}{r} 478 \\ - \square \\ \hline 180 \end{array}$$

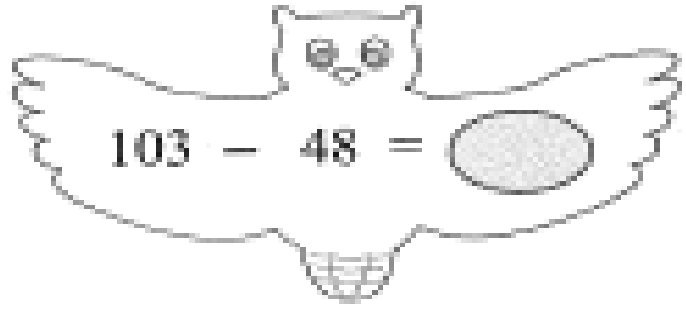
$$\begin{array}{r} 235 \\ - \square \\ \hline 90 \end{array}$$

$$\begin{array}{r} 255 \\ - \square \\ \hline 89 \end{array}$$

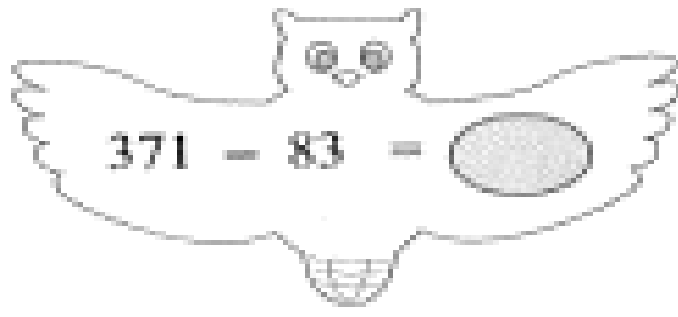
គណនា



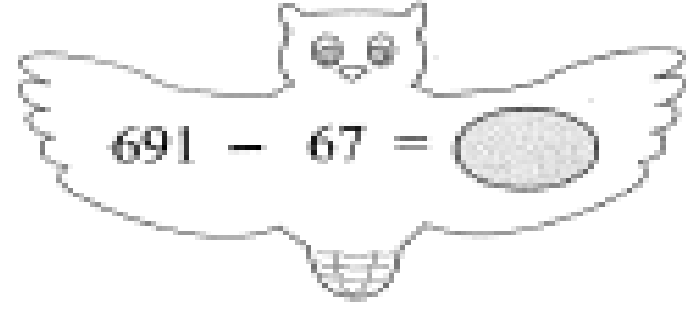
138 - 92 = 46



103 - 48 =



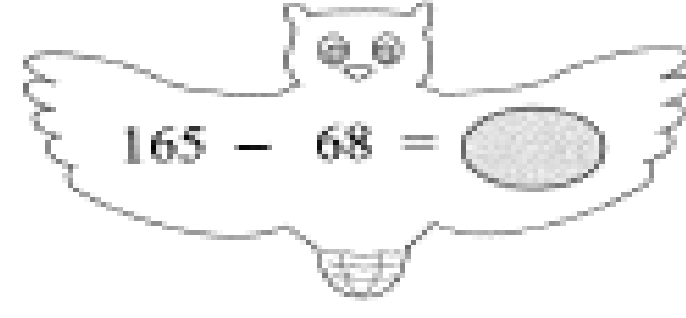
371 - 83 =



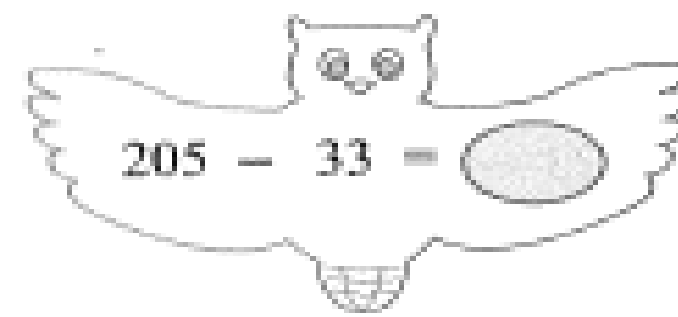
691 - 67 =



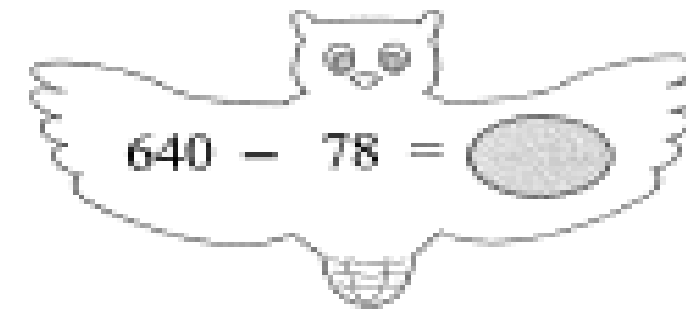
186 - 99 =



165 - 68 =



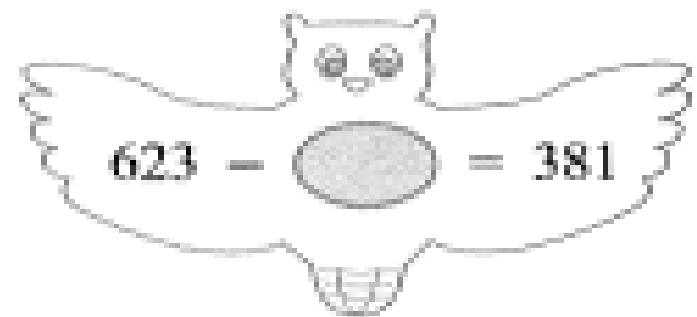
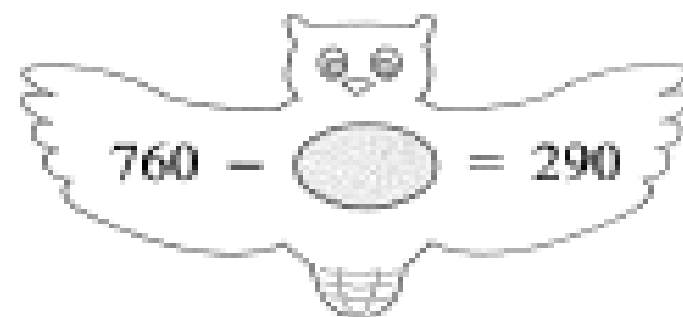
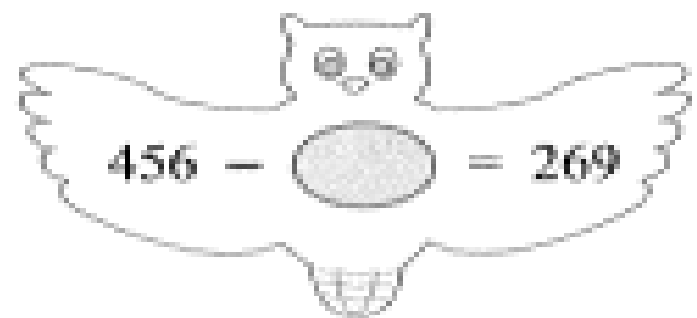
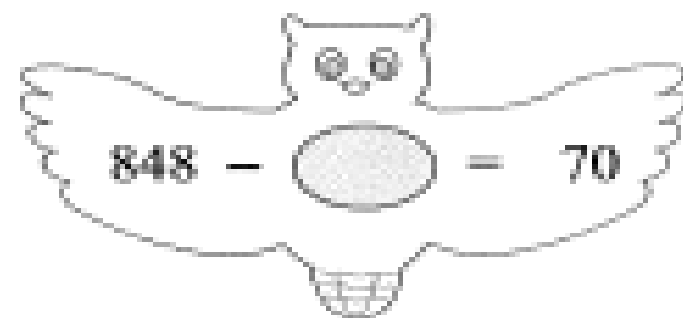
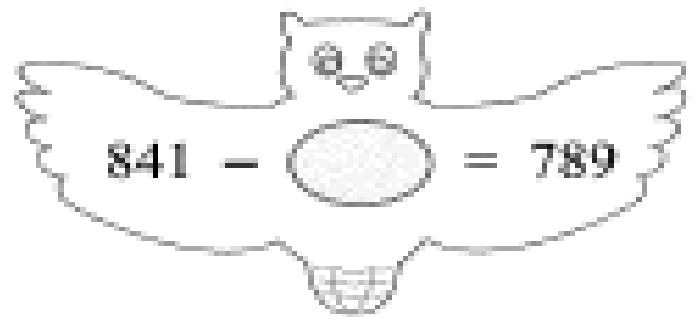
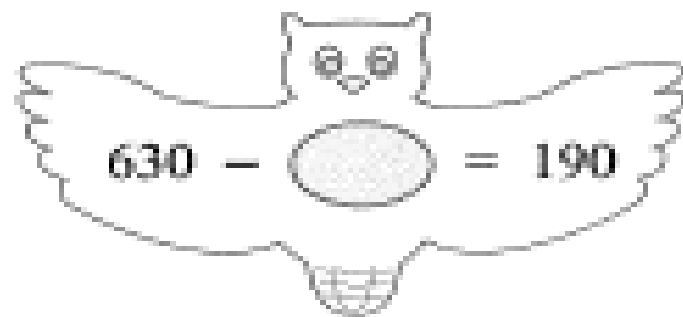
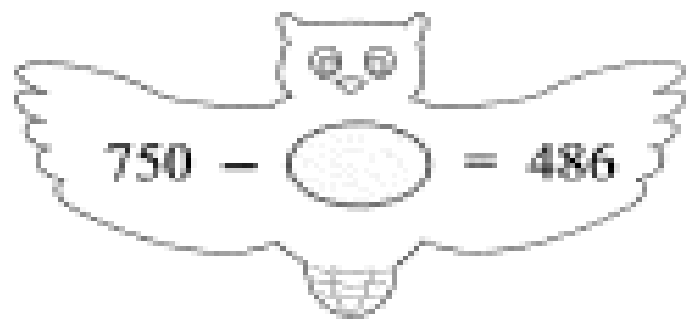
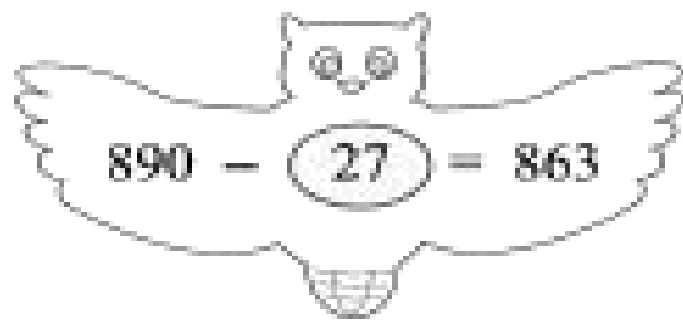
205 - 33 =



640 - 78 =



បំពេញចំនួន



ចំណោទ

ឆ្នាំទៅសាលាមានសិស្ស 496 នាក់
 ឆ្នាំនេះសាលាមានសិស្ស 512 នាក់ ។
 តើសិស្សកើនជាងឆ្នាំទៅប៉ុន្មាននាក់ ?

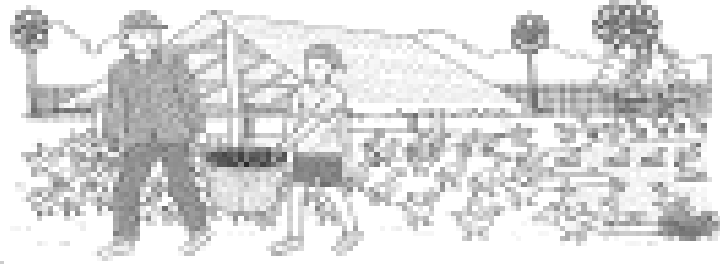
$$\begin{array}{r} 512 \\ - 496 \\ \hline \square \end{array}$$



សិស្សកើនជាង នាក់

ក្នុងចំណោមមេទា 845 ក្បាល
 ពងបានតែ 718 ត្រាប់ ។
 តើមេទាប៉ុន្មានក្បាលមិនបានពង ?


$$\begin{array}{r} 845 \\ - 718 \\ \hline \square \end{array}$$



មេទាមិនបានពង ក្បាល

ផ្ទុំបេះផ្លែស្វាយបាន 84 ផ្លែ
 ហើយត្រូវការទិញ 120 ផ្លែ ។
 តើផ្ទុំត្រូវបេះផ្លែស្វាយថែមប៉ុន្មានទៀត ?

$$\begin{array}{r} 120 \\ - 84 \\ \hline \square \end{array}$$



ត្រូវបេះថែម ផ្លែ

សុទ្ធចិញខ្មៅដៃមួយថ្លៃ 700 រៀល និងដីរលុបមួយ
ថ្លៃ 200 រៀល ។ តើសុទ្ធចិញអស់ប្រាក់ប៉ុន្មាន ?

សុទ្ធចិញអស់ប្រាក់ រៀល



$$\begin{array}{r} 700 \\ + 200 \\ \hline \square \end{array}$$

បុណ្យាយកប្រាក់ 1000 រៀល ទៅទិញខ្មៅដៃមួយដើម
ថ្លៃ 700 រៀល ។ តើគេអាចលុយឱ្យទិញប៉ុន្មានរៀល ?

អាចទិញ រៀល



$$\begin{array}{r} 1000 \\ - 700 \\ \hline \square \end{array}$$

ចេកមួយថ្លៃថ្លៃ 200 រៀល ។
តើចេក 5 ថ្លៃថ្លៃប៉ុន្មាន ?

ចេក 5 ថ្លៃថ្លៃ រៀល



$$\begin{array}{r} 5 \\ \times 200 \\ \hline \square \end{array}$$

បុណ្យទិញទំនៀក 4 ថ្លៃ 800 រៀល ។
តើទំនៀកមួយថ្លៃប៉ុន្មាន ?

ទំនៀកមួយថ្លៃ រៀល




$$800 : 4 = \square$$

១១

ធរណីមាត្រ




តើរូបមួយមានអង្កត់ប៉ុន្មាន ?




មានអង្កត់



មានអង្កត់



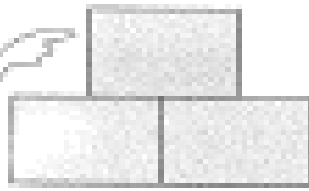
មានអង្កត់




មានអង្កត់




តើរូបមានការប៉ុន្មាន ?




មានការ




មានការ



មានការ




មានការ



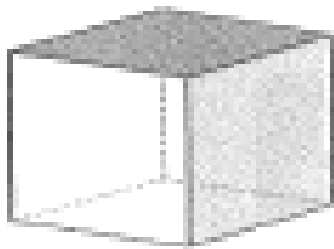
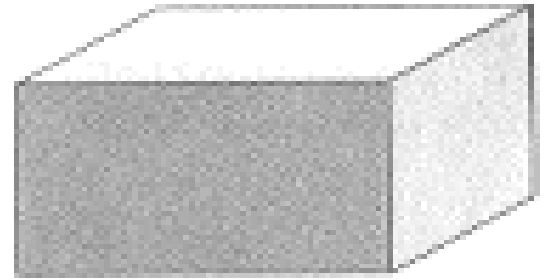
មានការ





ចូរគូសសញ្ញា





រូបលកាជាស៊ីឡាំង




រូបលកាជាគូប




រូបលកាជានង្វង់





រូបលកាជាការេ




ពេលវេលា





ពួកសត្វរំលែកនៅម៉ោង ព្រឹក



បុណ្យទៅរៀននៅម៉ោង ព្រឹក









ពួកសត្វក្រោយព្រលឹកនៅម៉ោង ល្ងាច



បុណ្យមើលទូរទស្សន៍នៅម៉ោង ល្ងាច



ឧទ្ធរណ៍

ឈ្មោះ	 តាងមាន់ ៨	 តាងទា ៨
ពូសំ		
ពូម៉េង		

ពូសំមាន់មាន់	$4 \times 8 =$	<input type="text"/>	ក្បាល
ពូសំមាន់ទា	$3 \times 8 =$	<input type="text"/>	ក្បាល
ពូម៉េងមាន់មាន់	$5 \times 8 =$	<input type="text"/>	ក្បាល
ពូម៉េងមាន់ទា	$6 \times 8 =$	<input type="text"/>	ក្បាល

ថ្លៃ	 តាងសៀវភៅ 10	 តាងខ្មៅដៃ 9
ចំនុច		
អង្ការ		

ថ្លៃចំនុចលក់សៀវភៅបាន	$4 \times 10 =$	<input type="text"/>	ក្បាល
ថ្លៃចំនុចលក់ខ្មៅដៃបានបាន	$6 \times 9 =$	<input type="text"/>	ដើម
ថ្លៃអង្ការលក់សៀវភៅបាន	$7 \times 10 =$	<input type="text"/>	ក្បាល
ថ្លៃអង្ការលក់ខ្មៅដៃបាន	$7 \times 9 =$	<input type="text"/>	ដើម

ចូរដាត់ពណ៌តាមគំរូ

ចូរបំពេញចំនួនតាមលំនាំ

5	8	11				
12	23	34				

$$9 + 2 = 11$$

$$3 - 1 = 2$$

$$7 + 4 = 11$$

$$5 - 3 = 2$$

$$\square + \square = 11$$

$$\square - \square = 2$$

$$\square + \square = 11$$

$$\square - \square = 2$$



$$9 + 3 = 12$$



$$24 - 9 = 15$$



$$\frac{1}{3}$$

