



ក្រសួងអប់រំ យុវជន និងកីឡា

សម្រាប់សិស្ស

# សៀវភៅហ្វឹកហ្វាត់


## គណិតវិទ្យា



ក្រសួងអប់រំ យុវជន និងកីឡា

# សៀវភៅហ្វឹកហាត់ តណីតវិទ្យា

ថ្នាក់ទី



អ្នករៀបរៀង : លោក អ៊ិន សិមស្រីន  
វិចិត្រករ : លោក គង់ ជាតិ  
អ្នករចនា : លោក ជុំ សត្យា

ហាមឥតអនុញ្ញាតចម្លងសៀវភៅនេះ

រក្សាសិទ្ធិ ©

គ្រឹះស្ថានបោះពុម្ពនិងចែកចាយ  
បោះពុម្ពឆ្នាំ ២០១៨

**ការផ្គត់ផ្គង់**

ដោយយល់ឃើញថា នៅសាលាបឋមសិក្សាចំណេះទូទៅពុំទាន់មាន  
សៀវភៅសម្រាប់ហ្វឹកហាត់គណិតវិទ្យាក្រៅម៉ោងសិក្សានៅឡើយ ។ ហេតុដូច  
នេះហើយ យើងយើងខ្ញុំបានទិត្តរៀបរៀងសៀវភៅហ្វឹកហាត់គណិតវិទ្យាថ្នាក់  
ទី១នេះឡើង ក្នុងគោលបំណងជួយបំពេញបន្ថែមលើខ្លឹមសារសៀវភៅគណិត  
វិទ្យាថ្នាក់ទី ១របស់ក្រសួងអប់រំ យុវជន និងកីឡា ដើម្បីឱ្យសិស្សានុសិស្សហ្វឹក  
ហាត់អាណ សរសេរ និងហាត់ធ្វើលេខ នៅពេលទំនេរ ។




យើងខ្ញុំសង្ឃឹមថា សៀវភៅនេះនឹងចូលរួមចំណែកក្នុងការអភិវឌ្ឍ  
ចំណេះដឹងផ្នែកគណិតវិទ្យាជាមិនខានឡើយ ។



ជាទីបញ្ចប់ យើងខ្ញុំសូមផ្ដេងអំណរគុណយ៉ាងជ្រាលជ្រៅចំពោះលោកគ្រូ  
អ្នកគ្រូ និងសហការីដែលបានសហការនិងផ្តល់យោបល់ដ៏ល្អៗ ក្នុងការរៀប  
រៀងសៀវភៅនេះឡើង ។

យើងខ្ញុំរង់ចាំទទួលរាល់ការទិត្តនស្តាបនាពីលោកគ្រូ អ្នកគ្រូ មាតាបិតា  
អាណាព្យាបាលសិស្ស និងប្រិយមិត្តអ្នកអានគ្រប់មជ្ឈដ្ឋាន ។




អាណតិ៍ ងសរសេរលេខ

	
	
<p>មួយ</p>	





អាណតិ៍ងសរសេរលេខ



២

ពីរ



២ ២ ២ ២ ២ ២ ២ ២

២ ២ ២ ២ ២ ២ ២ ២

២

២

២

២



# អាត និង សរសេរលេខ



៣

សរ



៣ ៣ ៣ ៣ ៣ ៣ ៣ ៣

៣ ៣ ៣ ៣ ៣ ៣ ៣

៣

៣

៣

៣

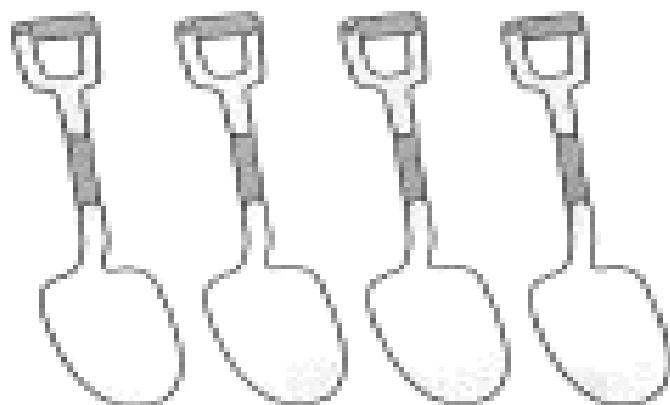


អាង ធីង សរសេរលេខ



៤

បួន



៤ ៤ ៤ ៤ ៤ ៤ ៤ ៤

៤ ៤ ៤ ៤ ៤ ៤ ៤ ៤

៤

៤

៤

៤



អាណតិ៍ ឯកសរសេរលេខ



៥

ក្រែង



៥

៥

៥

៥

៥

៥

៥

៥

៥

៥

៥

៥

៥

៥

៥

៥

៥

៥



៥




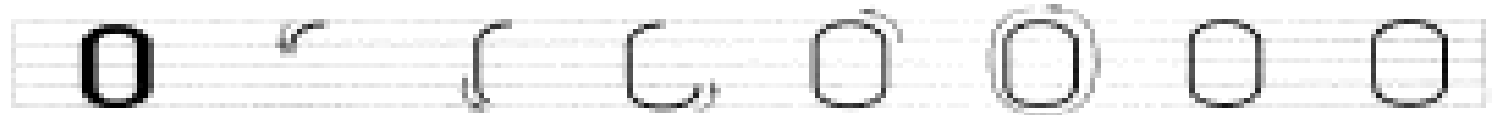
៥










អាណតិ៍ឯកសរសេរលេខ

	
០	
ស្នូន្យ	



?




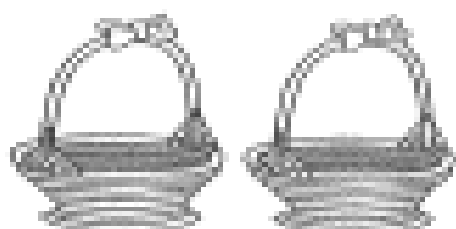




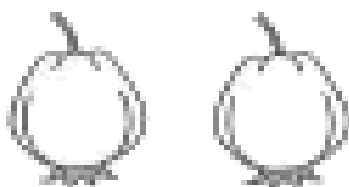

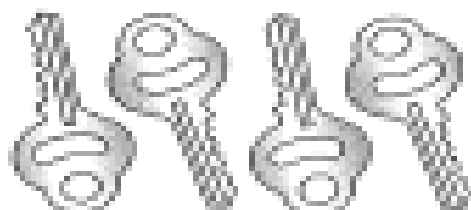





គូសរង្វង់លេខតាមចំនួនរូប

<p>ឧទាហរណ៍</p> 	<p>៥ ២ ១</p>
	<p>១ ២ ៣</p>
	<p>៥ ២ ១</p>
	<p>៥ ១ ៣</p>
	<p>៤ ៣ ២</p>



សរសេរលេខតាមថ្នល់រូប

ឧទាហរណ៍






អាណតិ៍ឯសរសេរលេខ



៦

ប្រាំមួយ



៦ ៦ ៦ ៦ ៦ ៦ ៦ ៦

៦ ៦ ៦ ៦ ៦ ៦ ៦ ៦

៦



៦

៦

៦



អាណតិ៍ ឆបសរសេរលេខ

	
<p>៧</p>	
<p>ប្រាំពីរ</p>	

៧ ៧ ៧ ៧ ៧ ៧ ៧ ៧

៧ ៧ ៧ ៧ ៧ ៧ ៧ ៧

៧



៧

៧

៧



អាណត្តិសរសេរលេខ

	
<p>៥</p>	
<p>ប្រាំបី</p>	

៥ ៥ ៥ ៥ ៥ ៥ ៥ ៥

៥ ១ ២ ៣ ៤ ៥ ៦ ៧

៥



៥

៥

៥



អាណតិ៍ ៥ សរសេរលេខ

	
<p>៧</p>	
<p>ប្រាំបួន</p>	

៧ ៧ ៧ ៧ ៧ ៧ ៧ ៧ ៧

៧ ៧ ៧ ៧ ៧ ៧ ៧ ៧ ៧

៧

៧

៧

៧



អាណតិ៍សរសេរលេខ



១០

ដប់



១០ ១០ ១០ ១០ ១០ ១០

១០ ១០ ១០ ១០ ១០ ១០

១០

១០

១០

១០



?

សរសេរលេខ ១ ដល់ ១០

១

២

៣

៤

៥

៦

៧

៨

៩

១០




ដាត់ពណ៌រូបតាមលេខ

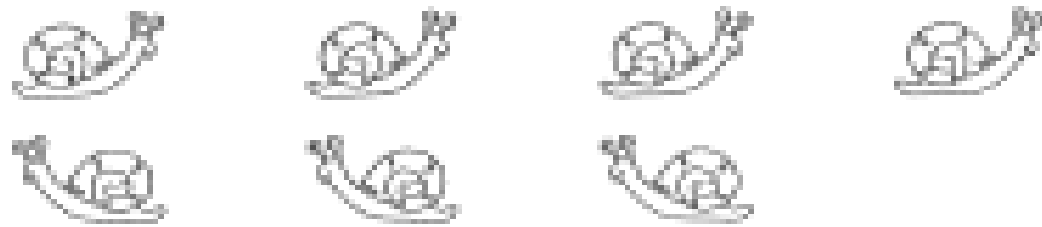
១	
៣	
២	
៥	
៧	
១០	
៤	
៦	
៨	
១០	



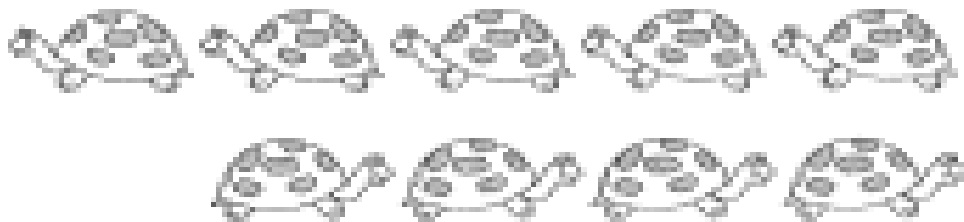
គូសវង់លេខតាមចំនួនរូប



៤  
៧  
៩



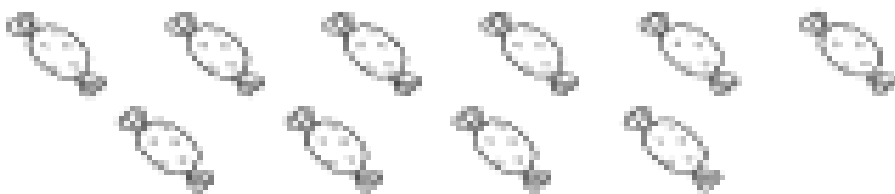
៥  
៧  
៧



៧  
៧  
៧



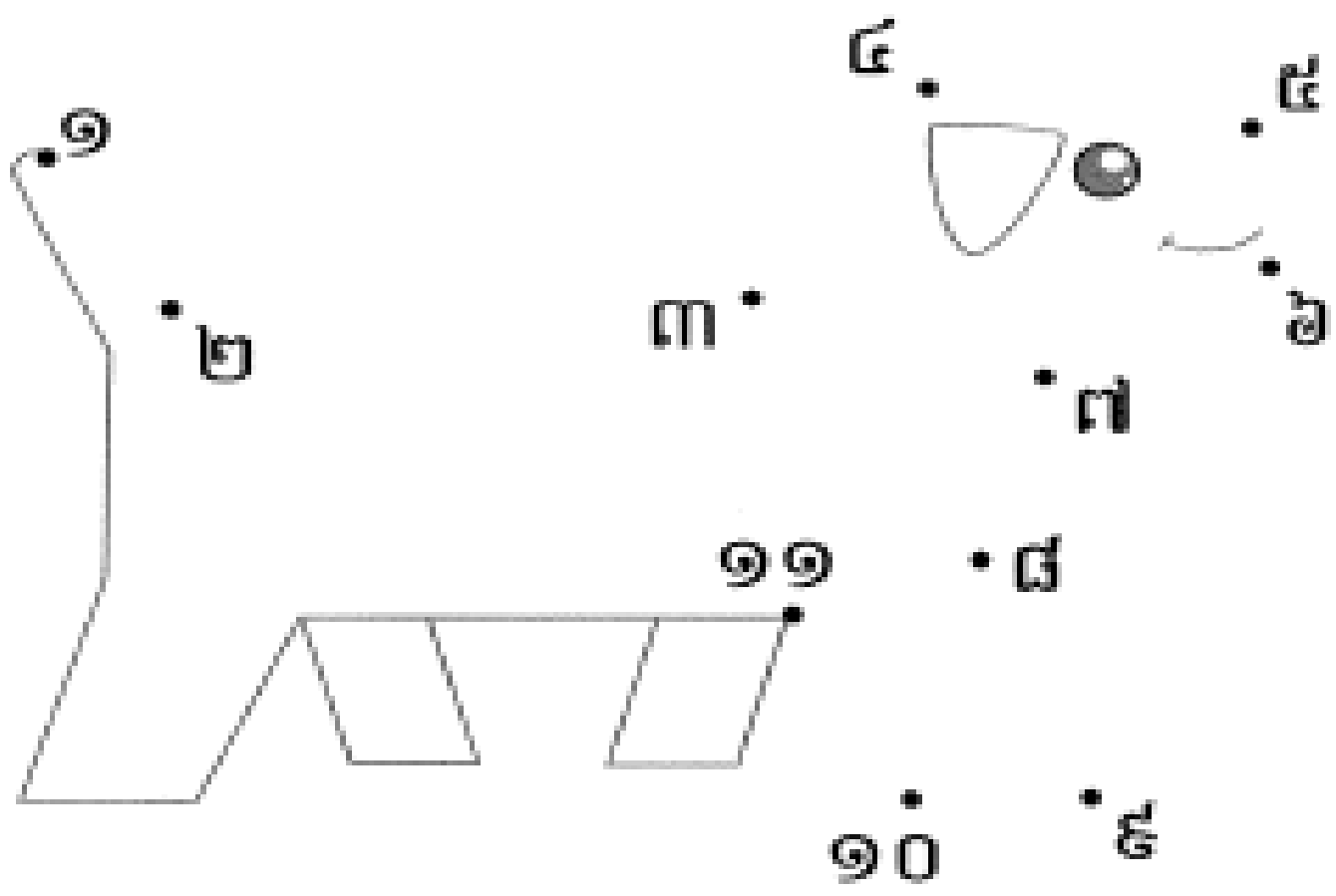
១  
១  
១



៧  
១  
១



# ភ្ជាប់ចំណុចតាមលំដាប់លេខ





បំពេញសញ្ញា > ឬ < ឬ =

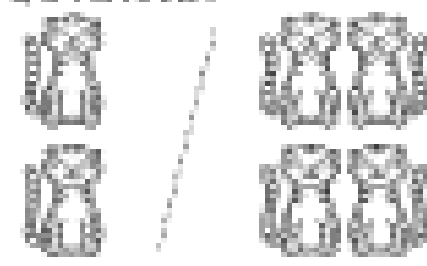
ឧទាហរណ៍



រុក្ខិទជាង

៤ > ៣


ឧទាហរណ៍



តិចជាង


២ < ៤

ឧទាហរណ៍



ស្មើ


៣ = ៣



៣  ៦





៤  ៥



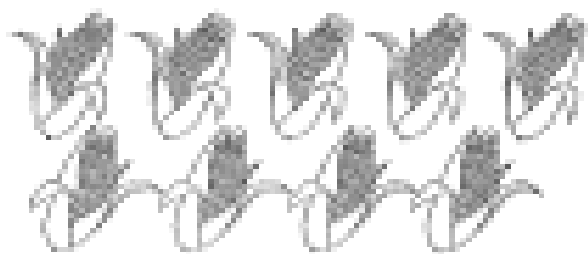

៥  ៣



?

បំពេញសញ្ញា > ឬ < ឬ =

	<input type="text"/>	
៨		៧

	<input type="text"/>	
៥		៦

	<input type="text"/>	
៩		១០

	<input type="text"/>	
១០		៤




សរសេរលេខតាមរូប

ឧទាហរណ៍






៤







សំណួរសំណួរសំណួរ ៦ តាមរូប





១

លំដាប់ទី





# សរសេរលំដាប់ទី

ទិសពាយ័ព្យ

- រូប ក នៅលំដាប់ទី .....៥.....
- រូប ឆ នៅលំដាប់ទី .....
- រូប ឃ នៅលំដាប់ទី .....
- រូប ជ នៅលំដាប់ទី .....


- តើអ្នកណានៅទី ២? .....៩.....
- តើអ្នកណានៅទី ៣? .....
- តើអ្នកណានៅទី ៦? .....
- តើអ្នកណានៅទី ៨? .....

ឧទាហរណ៍



$$១ + ១ = ២$$

មួយបូកនឹងមួយស្មើពីរ



$$\begin{array}{r} 1 \\ + 1 \\ \hline 2 \end{array}$$



$$1 + 2 = \square$$



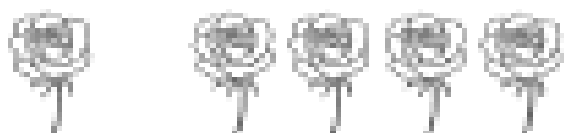
$$2 + 1 = \square$$



$$1 + 3 = \square$$




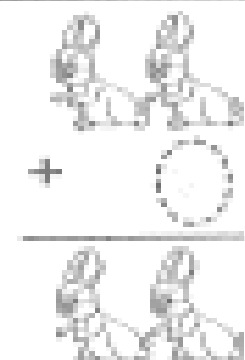
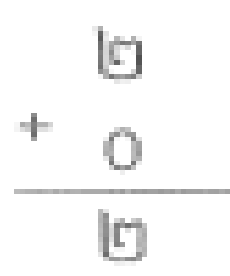





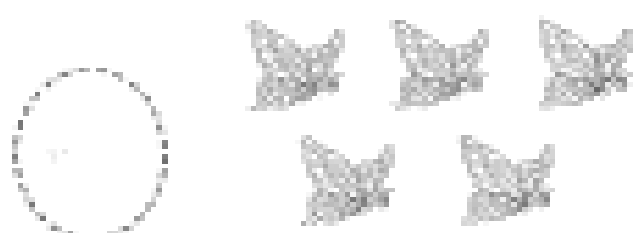
$$3 + 1 = \square$$



$$1 + 4 = \square$$




$$4 + 1 = \square$$

<p>ទាហានណ៍</p>  <p><math>2 + 0 = 2</math></p> <p>ពីរបូកនឹងសូន្យស្មើពីរ</p>	 
 <p><math>2 + 0 = \square</math></p>	 <p><math>2 + 0 = \square</math></p>
 <p><math>3 + 0 = \square</math></p>	 <p><math>4 + 0 = \square</math></p>
 <p><math>5 + 0 = \square</math></p>	 <p><math>0 + 5 = \square</math></p>



ប្រកបដំណូង

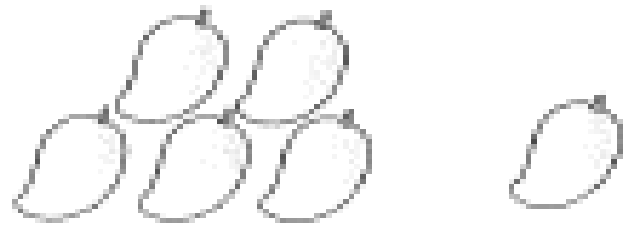
ទាញរូបភាព



៣ + ៣ = ៦



២ +  = ៦



+ ១ = ៦



+ ៣ = ៦



+  = ៦

១  
+ ៥  
-----

២  
+ ៤  
-----

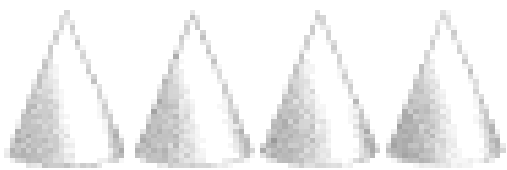

១  
+ ៤  
-----



៣  
+ ៣  
-----


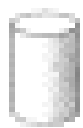








៤  
+ ១  
-----

៤  
+ ២  
-----

២  
+ ៣  
-----


		$\begin{array}{r} + ៤ \\ ៣ \\ \hline \end{array}$
$៤ + ៣ = \square$		

		$\begin{array}{r} + ៣ \\ ៤ \\ \hline \end{array}$
$៣ + ៤ = \square$		

		$\begin{array}{r} + ៦ \\ ១ \\ \hline \end{array}$		$\begin{array}{r} + ១ \\ ៦ \\ \hline \end{array}$	
		$\begin{array}{r} + ៥ \\ ២ \\ \hline \end{array}$			$\begin{array}{r} + ២ \\ ៥ \\ \hline \end{array}$
		$\begin{array}{r} + ៣ \\ ៤ \\ \hline \end{array}$		$\begin{array}{r} + ៤ \\ ៣ \\ \hline \end{array}$	



ប្រកបំប្រួល



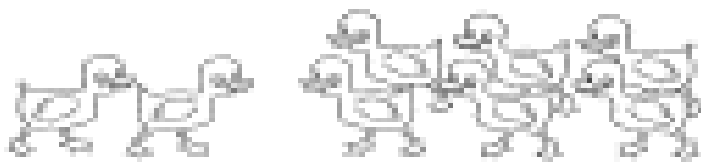
$1 + 7 = \square$

$\square + 1 = 8$



$7 + 1 = \square$

$7 + \square = 8$




$2 + 6 = \square$

$2 + \square = 8$




$6 + 2 = \square$

$\square + 6 = 8$



$3 + 5 = \square$

$\square + 5 = 8$



$5 + 3 = \square$

$5 + \square = 8$



$6 + 6 = \square$

$6 + \square = 12$

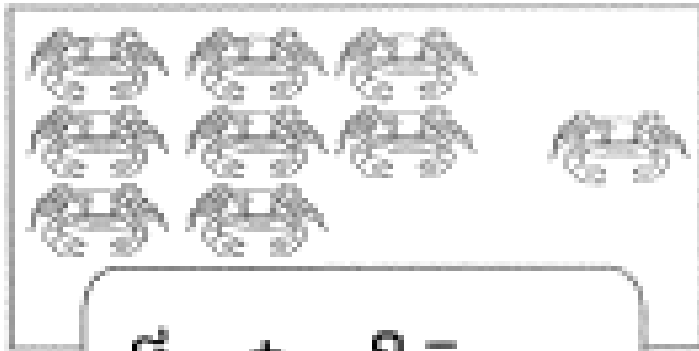


$5 + 0 = \square$


$\square + 0 = 5$



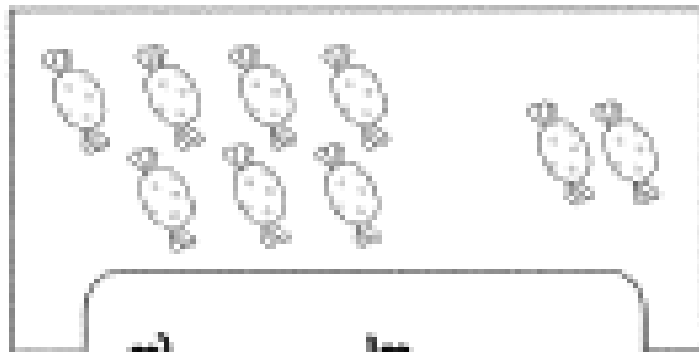
បូកចំនួន



៨ + ១ = ...



១ + ៨ = ...



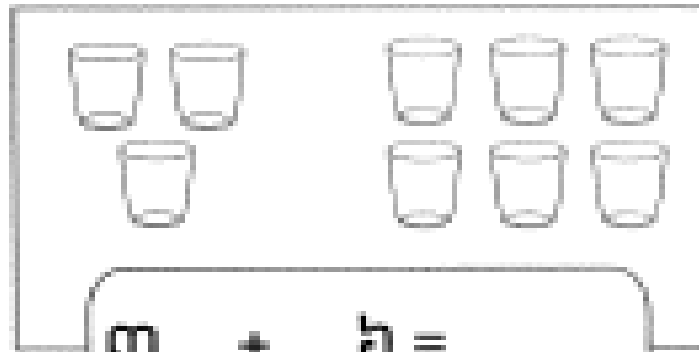
៧ + ២ = ...



២ + ៧ = ...



៦ + ៣ = ...



៣ + ៦ = ...



៥ + ៧ = ...



៦ + ៥ = ...

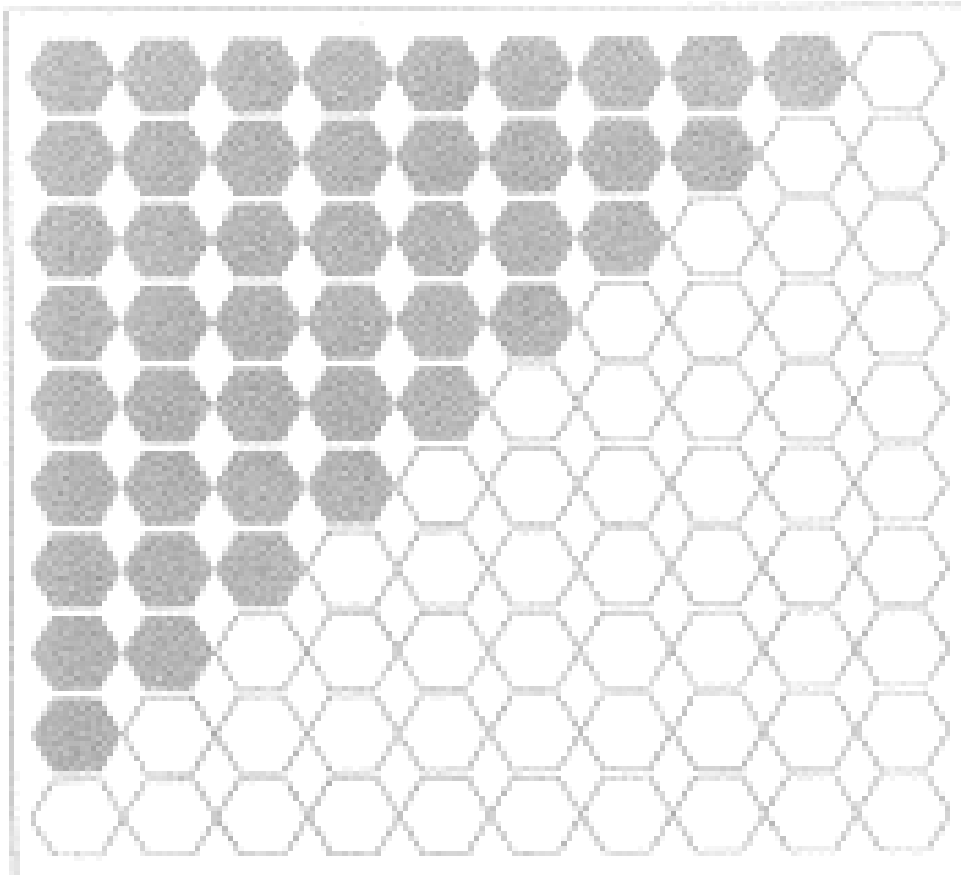




# បូកចំនួន

	$៧ + ៣ = \square$
	$៣ + ៧ = \square$
	$៥ + ៤ = \square$
	$៤ + ៦ = \square$
	$៥ + ៥ = \square$

$៥ + ១ = \square$	$\square + ១ = ១០$
$៤ + ២ = \square$	$\square + ២ = ១០$
$៧ + ៣ = \square$	$\square + ៣ = ១០$
$៦ + ៤ = \square$	$\square + ៤ = ១០$
$៥ + ៥ = \square$	$\square + ៥ = ១០$




- 90 = ៩ + 9
- 90 = ... + ...
- 90 = ... + ...
- 90 = ... + ...
- 90 = ... + ...
- 90 = ... + ...
- 90 = ... + ...
- 90 = ... + ...
- 90 = ... + ...
- 90 = ... + ...

- ៩ + ... = 90
- ៩ + ... = 90
- ៧ + ... = 90
- ៧ + ... = 90
- ៧ + ... = 90
- ៧ + ... = 90
- ៧ + ... = 90
- ៧ + ... = 90
- ៧ + ... = 90
- ៧ + ... = 90









- ... + ៩ = 90
- ... + ៩ = 90
- ... + ៧ = 90
- ... + ៧ = 90
- ... + ៧ = 90
- ... + ៧ = 90
- ... + ៧ = 90
- ... + ៧ = 90
- ... + ៧ = 90
- ... + ៧ = 90



សរសេរលេខតាមរូបខាងក្រោម



ឧទាហរណ៍





# ចំនួននៅសល់

ឧទាហរណ៍

	<del></del>		
--	-------------	--	--

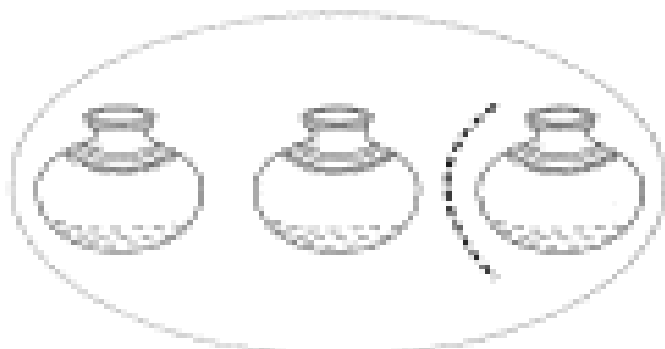
<del></del>	<del></del>		
-------------	-------------	--	--

<del></del>	<del></del>					
-------------	-------------	--	--	--	--	--

<del></del>								
-------------	--	--	--	--	--	--	--	--

<del></del>	<del></del>	<del></del>			
-------------	-------------	-------------	--	--	--

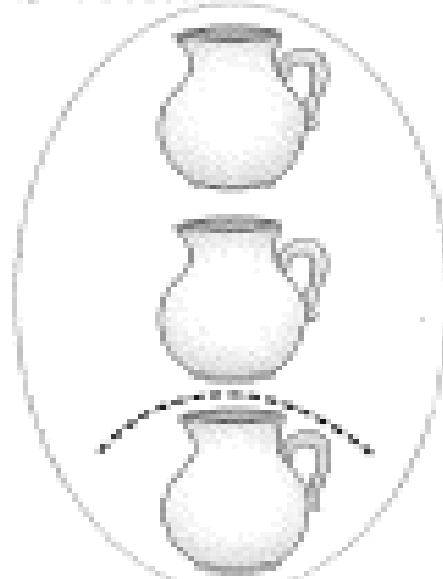
ឧទាហរណ៍



$$៣ - ១ = ២$$

ថិបកមួយស្មើពីរ

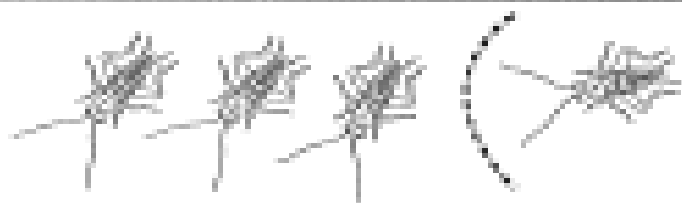
ឧទាហរណ៍



៣

- ១


២




$$៤ - ១ = \square$$




$$៣ - ១ = \square$$




$$៤ - ២ = \square$$



$$៣ - ២ = \square$$



$$៥ - ២ = \square$$




$$៥ - ១ = \square$$




# ដកចំនួន



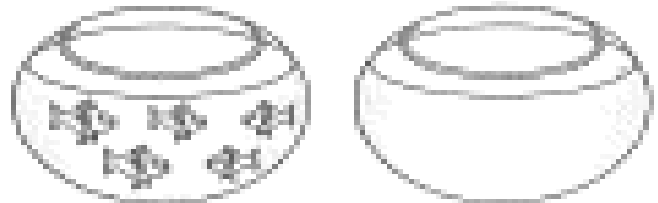
$$៤ - ៤ = \square$$



$$៣ - ៣ = \square$$



$$៤ - ០ = \square$$



$$៥ - ០ = \square$$

$$១ - ១ = \square$$

$$២ - ០ = \square$$

$$៣ - ៣ = \square$$

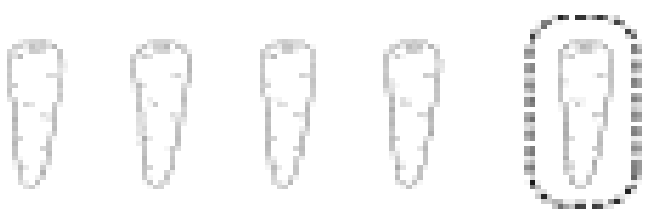
$$៣ - ០ = \square$$

$$៤ - ០ = \square$$


$$៤ - ២ = \square$$

$$៥ - ៥ = \square$$


$$៥ - ០ = \square$$




၉ - ၅ =



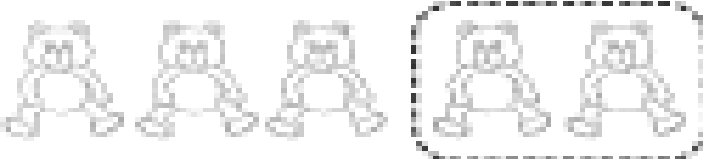
၉ - ၆ =




၉ - ၆ =




၉ - ၈ =




၉ - ၅ =



၉ - ၅ =



၉ - ၈ =



၉ - ၆ =




ដកចំនួន



៥  
- ៤  
=



៥  
- ៤  
=



៥ - ២ =



៥ - ៤ =



៥ - ៣ =



៥ - ៥ =

៥  
- ៥  
=

៥  
- ២  
=

៥  
- ៣  
=

៥  
- ៤  
=


៥  
- ០  
=

៥  
- ៥  
=

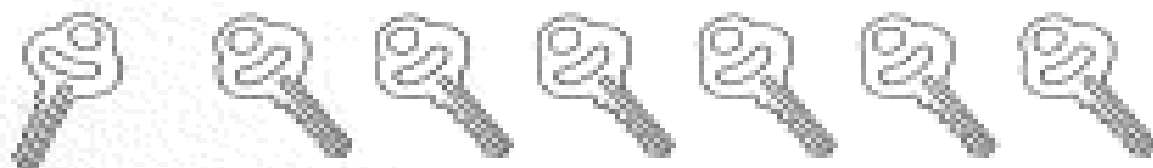




# ដកចំនួន



$$៧ - ១ = \square$$



$$៧ - ៦ = \square$$



$$៧ - ២ = \square$$



$$៦ - ៤ = \square$$



$$៧ - \square = ៣$$


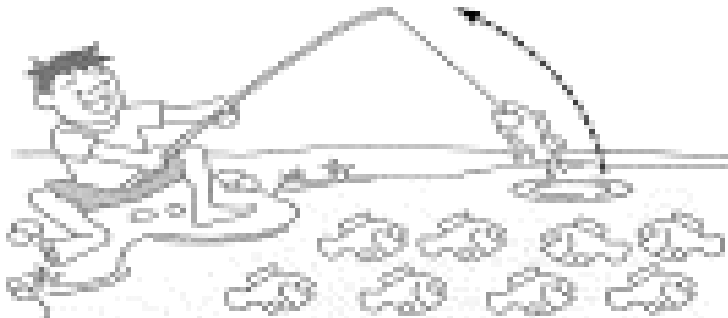










$$៧ - \square = ៤$$

៧	៧	៧	៧	៧	៧	៧
-	-	-	-	-	-	-
២	៥	១	៦	៣	០	៧
<hr/>	<hr/>	<hr/>	<hr/>	<hr/>	<hr/>	<hr/>
<input type="text"/>	<input type="text"/>	<input type="text"/>	<input type="text"/>	<input type="text"/>	<input type="text"/>	<input type="text"/>




# ជំហានទី១

 <p><math>៩ - ១ = \square</math></p>	 <p><math>៩ - ១ = \square</math></p>
 <p><math>៩ - ២ = \square</math></p>	 <p><math>៩ - ៧ = \square</math></p>
 <p><math>៩ - ៣ = \square</math></p>	 <p><math>៩ - \square = ៣</math></p>
 <p><math>៩ - ៥ = \square</math></p>	 <p><math>៩ - \square = ៤</math></p>
 <p><math>៩ - ៥ = \square</math></p>	 <p><math>៩ - ០ = \square</math></p>



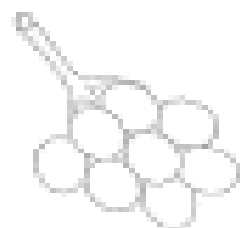
# ដកចំនួន



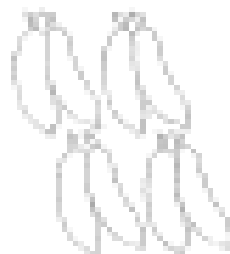
$90 - 9 =$




$90 - ៥ =$




$$\begin{array}{r} 90 \\ - 2 \\ \hline \end{array}$$





$$\begin{array}{r} 90 \\ - 2 \\ \hline \end{array}$$



$$\begin{array}{r} 90 \\ - 3 \\ \hline \end{array}$$



$$\begin{array}{r} 90 \\ - 2 \\ \hline \end{array}$$



$$\begin{array}{r} 90 \\ - 5 \\ \hline \end{array}$$



$$\begin{array}{r} 90 \\ - 6 \\ \hline \end{array}$$



$$\begin{array}{r} 90 \\ - 8 \\ \hline \end{array}$$



$$\begin{array}{r} 90 \\ - 3 \\ \hline \end{array}$$



# ចំណោទ



១. ព្រលានមួយមានយន្តហោះ ៩ គ្រឿង ហោះចេញ ៣ គ្រឿង ។  
តើយន្តហោះនៅសល់ប៉ុន្មានគ្រឿង?

ប្រមាណវិធី

$$\begin{array}{r} 9 \\ - 3 \\ \hline \end{array}$$

ចម្លើយ

យន្តហោះទាំងអស់ ៩ គ្រឿង  
ហោះឡើង ៣ គ្រឿង  
យន្តហោះនៅសល់  $9 - 3 = \boxed{6}$  គ្រឿង

២. ទីងសំមានទា ៩ ក្បាល គាត់លក់អស់ ៥ ក្បាល ។  
តើទានៅសល់ប៉ុន្មានក្បាល?

ប្រមាណវិធី

$$\begin{array}{r} 9 \\ - 5 \\ \hline \square \end{array}$$

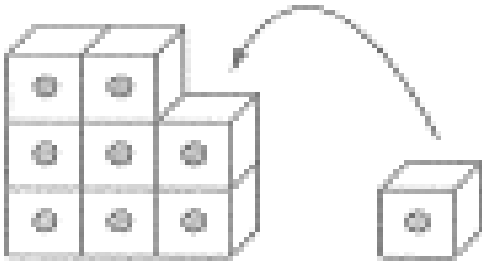
ចម្លើយ

ទាទាំងអស់ ៩ ក្បាល  
លក់អស់ ៥ ក្បាល  
ទានៅសល់  $9 - 5 = \square$  ក្បាល



ប្លុកឆឹងដកចំនួន

ឧទាហរណ៍




៨ + ១ = ៩

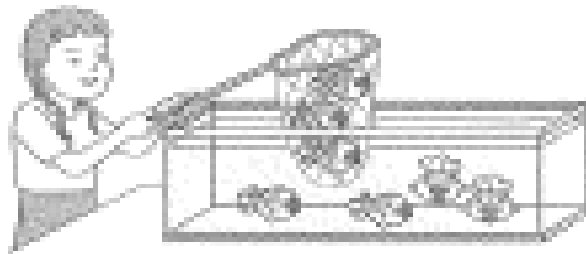
ឧទាហរណ៍



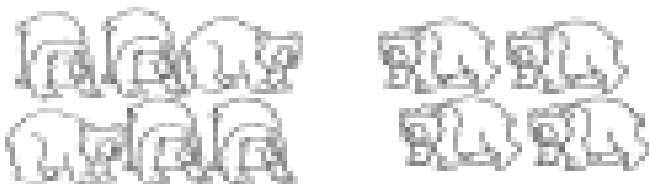
៩ - ១ = ៨



៥ + ៣ =



៧ - ៣ =





៥ + ៤ =



១០ - ៥ =





ប្លុកឆ្លងជំនាញ

១ + ៨ =

៨ - ១ =



៨ -  = ១

២ + ៧ =

៧ - ៧ =



៧ -  = ៧

៣ + ៦ =

៧ - ៣ =

៧ -  = ៣

៤ + ៥ =

៧ - ៤ =

៧ -  = ៤

$\begin{array}{r} + \\ ៧ \\ + \\ ២ \\ \hline \end{array}$	$\begin{array}{r} + \\ ៦ \\ + \\ ៣ \\ \hline \end{array}$	$\begin{array}{r} + \\ ៤ \\ + \\ ៥ \\ \hline \end{array}$	$\begin{array}{r} - \\ ៧ \\ - \\ ៧ \\ \hline \end{array}$
<input type="text"/>	<input type="text"/>	<input type="text"/>	<input type="text"/>

$\begin{array}{r} + \\ ៣ \\ + \\ ២ \\ \hline \end{array}$	$\begin{array}{r} - \\ ៧ \\ - \\ ៦ \\ \hline \end{array}$	$\begin{array}{r} - \\ ៧ \\ - \\ ០ \\ \hline \end{array}$	$\begin{array}{r} - \\ ៧ \\ - \\ ២ \\ \hline \end{array}$
<input type="text"/>	<input type="text"/>	<input type="text"/>	<input type="text"/>

$\begin{array}{r} - \\ ៧ \\ - \\ ៤ \\ \hline \end{array}$	$\begin{array}{r} + \\ ៨ \\ + \\ ១ \\ \hline \end{array}$	$\begin{array}{r} + \\ ៥ \\ + \\ ៤ \\ \hline \end{array}$	$\begin{array}{r} + \\ ០ \\ + \\ ៧ \\ \hline \end{array}$
<input type="text"/>	<input type="text"/>	<input type="text"/>	<input type="text"/>

$\begin{array}{r} - \\ ៧ \\ - \\ ៣ \\ \hline \end{array}$	$\begin{array}{r} + \\ ២ \\ + \\ ៧ \\ \hline \end{array}$	$\begin{array}{r} - \\ ៧ \\ - \\ ៥ \\ \hline \end{array}$	$\begin{array}{r} + \\ ៨ \\ + \\ ១ \\ \hline \end{array}$
<input type="text"/>	<input type="text"/>	<input type="text"/>	<input type="text"/>



ប្លុកឆឹងដកចំនួន



១០ - ៥ =



១ + ៣ =

១០ - ១ =

- ៣ = ១

២ + ៨ =

១០ - ៨ =

១០ -  = ២



៣ +  = ១០

១០ - ៣ =

១០ -  = ៣

៤ + ៦ =

១០ - ៤ =

១០ -  = ៤

១០      ៥      ១០

- ៤      + ១      - ៥

---

៥      ១០      ៦

+ ៥      - ៥      + ៤

---

១០      ២      ១០

- ៨      + ៨      - ៧

---

៧      ១០      ១០

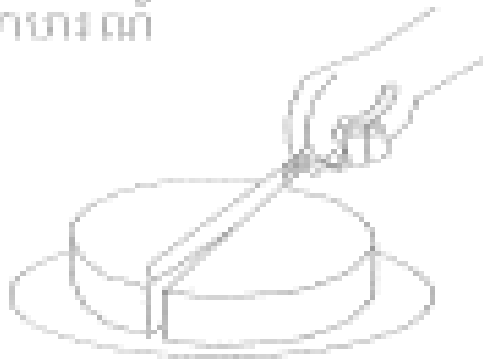
+ ៣      - ១០      - ០

---

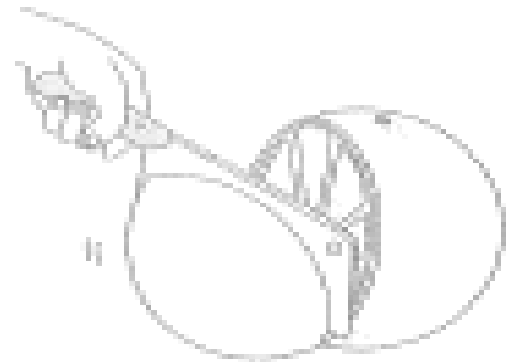


# ចំណែក

ឧទាហរណ៍



ចំណែកស្មើគ្នា



ចំណែកមិនស្មើគ្នា

## ១. ចូរគូសវង់ចំណែកស្មើគ្នា

ក	ខ	គ	ឃ	ង	ច

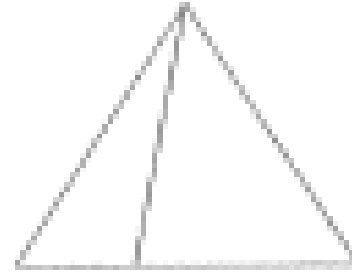
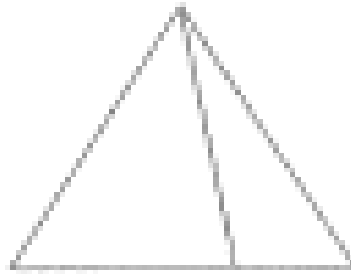
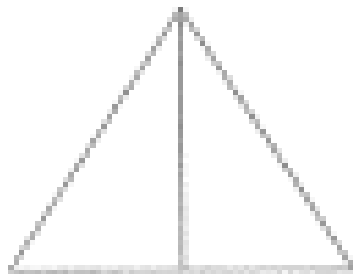
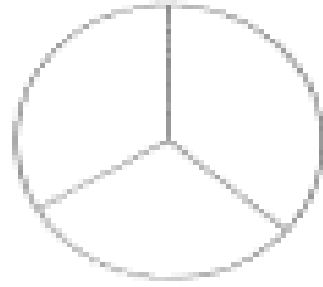
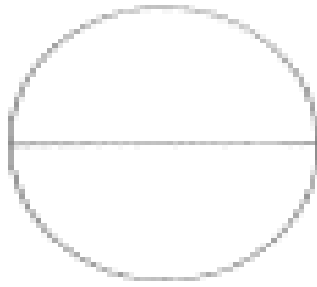
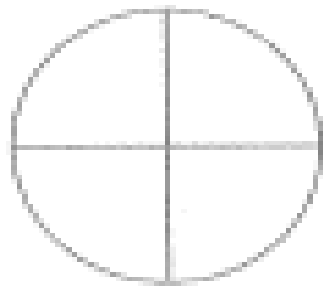






## ២. ចូរគូសវង់ចំណែកមិនស្មើគ្នា

ក	ខ	គ	ឃ	ង	ច



# ១) ដាត់ពណ៌រូបមានចំណែកស្មើគ្នា


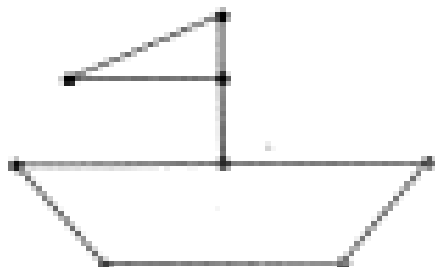


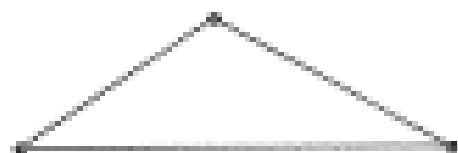

ឧទាហរណ៍






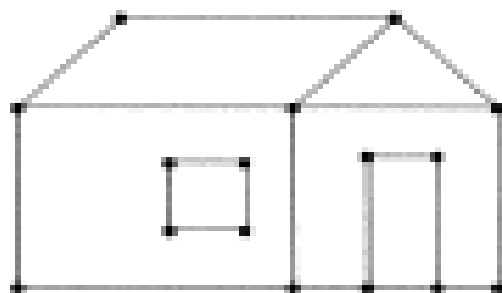

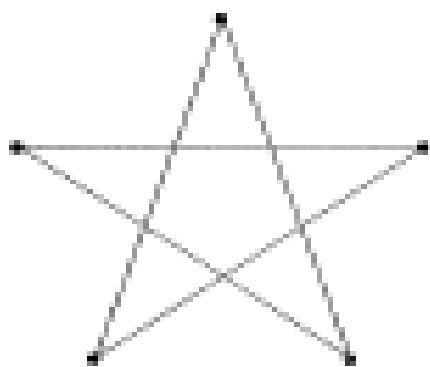

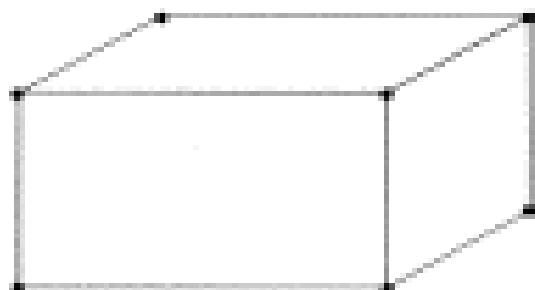
# ភ្ជាប់ចំណុចតាមគំរូ











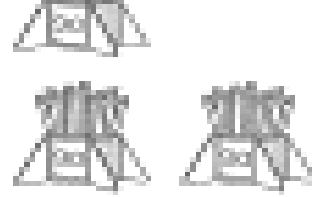
ឧទាហរណ៍





# ភ្ជាប់ចំណុចតាមគំរូ



ខ្ទង់ដប់	ខ្ទង់រាយ	លេខ	អានថា
		១០	ដប់
		១១	ដប់មួយ
		១២	ដប់ពីរ
		១៣	ដប់បី
		១៤	ដប់បួន
		១៥	ដប់ប្រាំ
		១៦	ដប់ប្រាំមួយ
		១៧	ដប់ប្រាំពីរ
		១៨	ដប់ប្រាំបី
		១៩	ដប់ប្រាំបួន
		២០	ម្ភៃ



បំពេញលេខតាមលំដាប់

១. បំពេញលេខតាមលំដាប់ឡើង


	២		៤	
១០		៨		៦
	១២		១៤	
២០		១៨		១៦

២. បំពេញលេខតាមលំដាប់ចុះ

២០		១៨		១៦
		១៣		
១០				៥
៥				១

១


ភ្ជាប់ចំណុចតាមលំដាប់លេខ





# បំពេញលេខ

ទាញចេញ






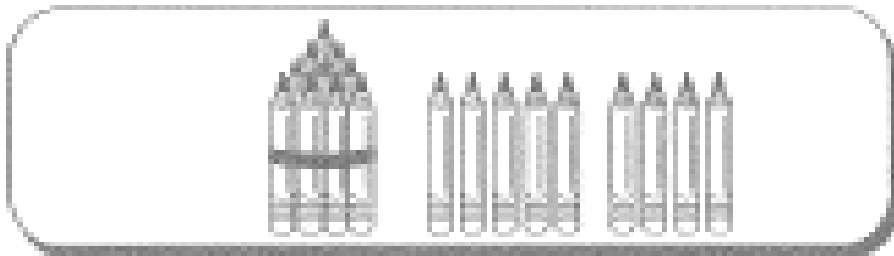
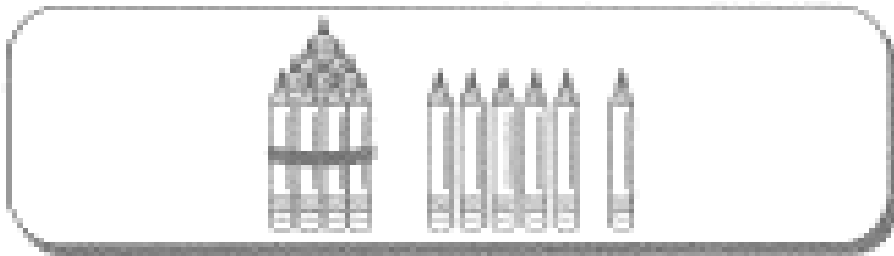








# បំពេញលេខ











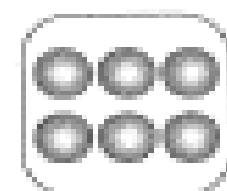











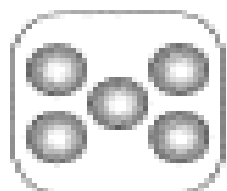


បំពេញលេខ

ឧទាហរណ៍



១២





បំពេញលេខ

--	--	--	--

--	--	--	--	--

--	--	--	--	--

--	--	--	--	--

--	--	--	--	--



# ប្លុកចំនួន

ឧទាហរណ៍



$$៥ + ៦ = ៥ + ៥ + ១ = ១០ + ១ = ១១$$



$$៦ + ៨ = ៦ + \dots + \dots = ១០ + \dots = \dots$$



$$៩ + ៤ = ៩ + \dots + \dots = ១០ + \dots = \dots$$



$$៨ + ៥ = ៨ + \dots + \dots = ១០ + \dots = \dots$$



$$៧ + ៧ = ៧ + \dots + \dots = ១០ + \dots = \dots$$



$$៩ + ៥ = ៩ + \dots + \dots = ១០ + \dots = \dots$$



ប្រកបដំណូង



៨+៧ = ១០+... = ...



៧+៩ = ១០+... = ...

៨+៣ = ១០+...  
= ...

៥+៩ = ១០+...  
= ...

៥+៧ = ...+...  
= ...

៦+៦ = ...+...  
= ...

៩+៤ = ...+...  
= ...

៨+៨ = ...+...  
= ...

៤+៨ = ...+...  
= ...

៧+៦ = ...+...  
= ...

៧+៤ = ...+...  
= ...

៤+៩ = ...+...  
= ...

៩+៦ = ...+...  
= ...

៨+៩ = ...+...  
= ...



ប្លុកចំនួន

៧ + ២ =	៤ + ៨ =	១០ + ១ =
៣ + ៤ =	៨ + ៨ =	៤ + ៦ =
៣ + ៥ =	៦ + ៦ =	៥ + ៥ =
១ + ៦ =	៧ + ៧ =	៦ + ៤ =
២ + ៧ =	៨ + ៥ =	៧ + ៣ =
១ + ៨ =	៥ + ៨ =	៨ + ២ =
២ + ៦ =	៧ + ៥ =	៥ + ១ =
៤ + ៥ =	៨ + ៧ =	១០ + ១០ =
៦ + ១ =	៧ + ៨ =	១០ + ៨ =
៥ + ៣ =	៥ + ៥ =	១០ + ៦ =
៤ + ៣ =	៥ + ៥ =	១០ + ៤ =
៧ + ៣ =	៦ + ៥ =	១០ + ២ =
៣ + ៧ =	៥ + ៦ =	១០ + ៥ =
៦ + ២ =	៧ + ៦ =	១០ + ៧ =
៥ + ៤ =	៦ + ៧ =	១០ + ៥ =
៦ + ៣ =	៨ + ៤ =	១០ + ៣ =

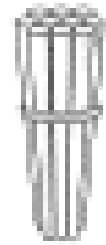

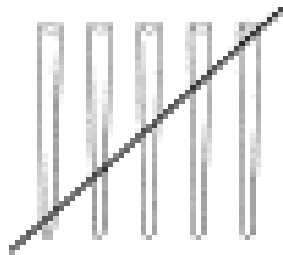


ដកចំនួន

	$  \begin{aligned}  96 - 6 &= 90 + \cancel{6} - \cancel{6} \\  &= 90 + 0 \\  &= 90  \end{aligned}  $
	$  \begin{aligned}  95 - 2 &= 90 + \dots - 2 \\  &= 90 + \dots \\  &= \dots  \end{aligned}  $
	$  \begin{aligned}  98 - 6 &= 90 + \dots - 6 \\  &= 90 + \dots \\  &= \dots  \end{aligned}  $
$  \begin{aligned}  96 - 3 &= 90 + \dots - 3 = 90 + \dots = \dots \\  97 - 5 &= 90 + \dots - 5 = 90 + \dots = \dots \\  95 - 2 &= 90 + \dots - 2 = 90 + \dots = \dots \\  98 - 7 &= 90 + \dots - 7 = 90 + \dots = \dots  \end{aligned}  $	



# ដកចំនួន



ដប់	រាយ
១	៥
-	៥
១	០

៥ ដក ៥ ស្មើ ០  
សរសេរលេខ ០ ។

១ ម្នាក់ចុះ  
សរសេរលេខ ១ ។

១៥ ដក ៥  
ស្មើ ១០ ។

$$\begin{array}{r} ១៣ \\ - ២ \\ \hline \end{array}$$

$$\begin{array}{r} ១៦ \\ - ៤ \\ \hline \end{array}$$

$$\begin{array}{r} ១៧ \\ - ៣ \\ \hline \end{array}$$

$$\begin{array}{r} ១៤ \\ - ១ \\ \hline \end{array}$$

$$\begin{array}{r} ១៥ \\ - ២ \\ \hline \end{array}$$

$$\begin{array}{r} ១៨ \\ - ៥ \\ \hline \end{array}$$

$$\begin{array}{r} ១៩ \\ - ៦ \\ \hline \end{array}$$

$$\begin{array}{r} ១៦ \\ - ២ \\ \hline \end{array}$$

$$\begin{array}{r} ១៧ \\ - ៦ \\ \hline \end{array}$$

$$\begin{array}{r} ១៩ \\ - ៧ \\ \hline \end{array}$$



# ចំណោទ



១. សៅមានស្ករ ១១ គ្រាប់ ។ ឪពុកវាឱ្យ ៥ គ្រាប់ទៀត ។  
តើសៅមានស្ករគ្រាប់ទាំងអស់ប៉ុន្មានគ្រាប់?

ប្រមាណវិធី

$$\begin{array}{r} 11 \\ + 5 \\ \hline \end{array}$$

ចម្លើយ  
សៅមានស្ករគ្រាប់ទាំងអស់  គ្រាប់ ។

២. បងស្រីវីតាដាំចេកបាន ១៤ ដើម ។ វីតាដាំចេកបាន ៥ ដើម ។  
តើអ្នកទាំងពីរដាំចេកបានប៉ុន្មានដើម?

ប្រមាណវិធី

$$\begin{array}{r} 14 \\ + 5 \\ \hline \end{array}$$

ចម្លើយ  
អ្នកទាំងពីរដាំចេកបាន  ដើម ។

៣. សុខមានមាត់ ១៨ ក្បាល ។ វាលក់អស់ ៦ ក្បាល ។  
តើសុខនៅសល់មាត់ប៉ុន្មានក្បាល?


ប្រមាណវិធី

$$\begin{array}{r} 18 \\ - 6 \\ \hline \end{array}$$

ចម្លើយ  
សុខនៅសល់មាត់  ក្បាល ។




ឧទាហរណ៍



ជើងលុបមានប្រវែង ៣ ឃ្លាប



ខ្នាតដៃមានប្រវែង ៦ ឃ្លាប



សៀវភៅមានប្រវែង ..... ឃ្លាប

ជើងលុបមានប្រវែង ..... ឃ្លាប

សៀវភៅវែងជាងជើងលុប ..... ឃ្លាប ។



# ប្រៀបធៀបប្រវែង



ក

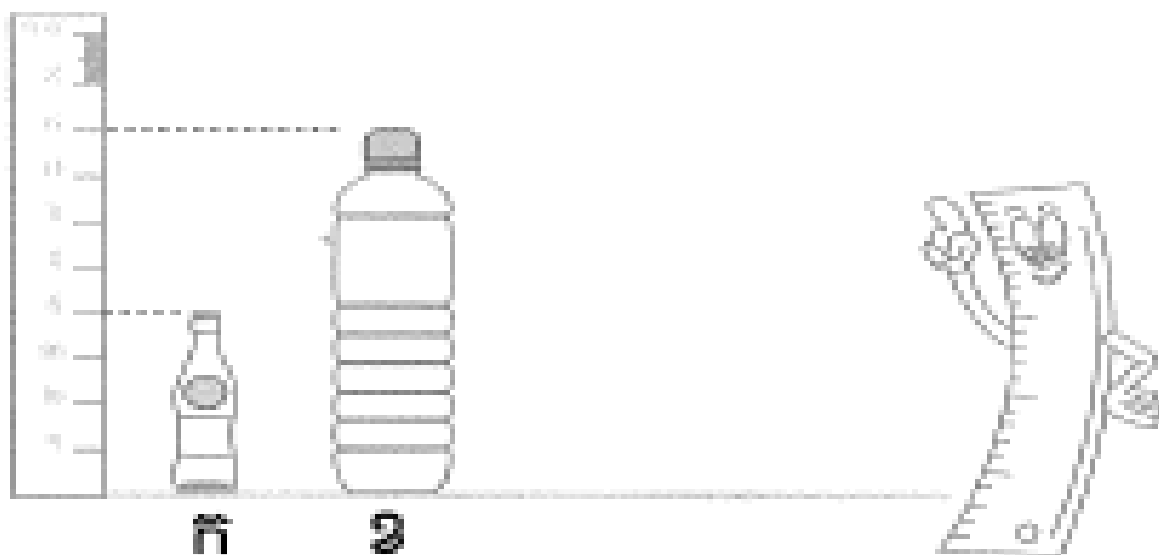
ខ

គ

រូប ក មានកំពស់ ..... ប្រលោះក្រិត

រូប ខ មានកំពស់ ..... ប្រលោះក្រិត

រូប គ មានកំពស់ ..... ប្រលោះក្រិត ។



ក

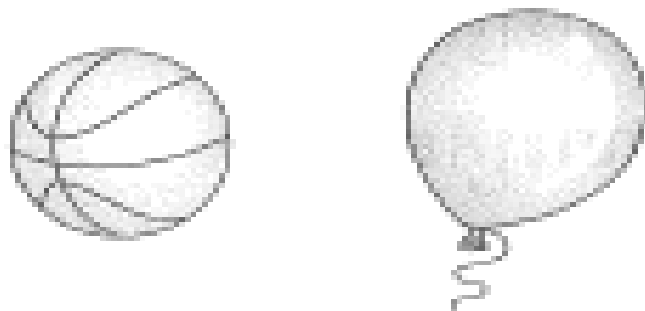
ខ

ដប ខ មានកំពស់ខ្ពស់ជាងដប ក ... ក្រិត




# ប្រៀបធៀបទម្ងន់

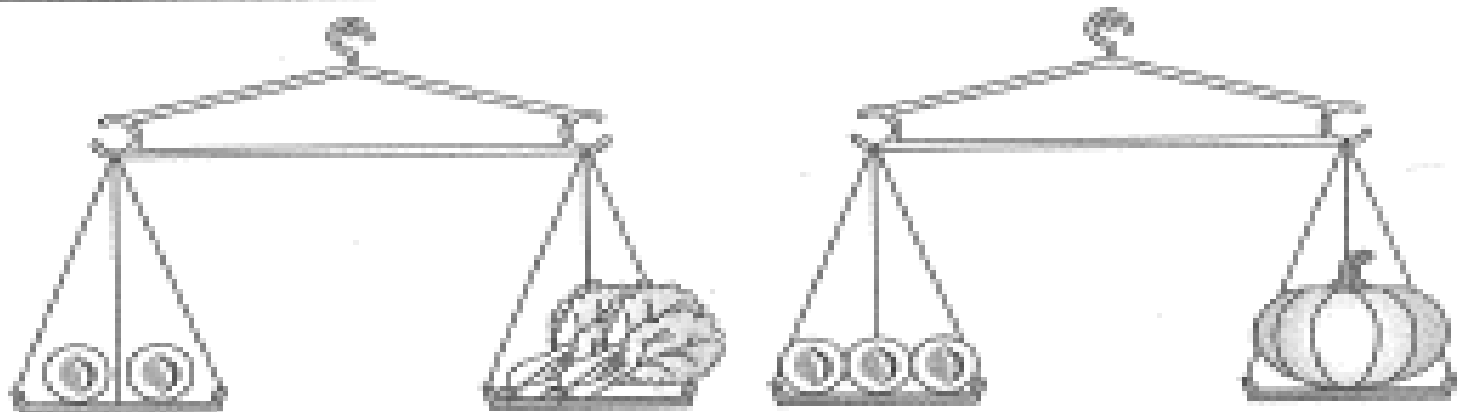
ឧទាហរណ៍



ប៉ោងប៉ោង..... ជាងបាល់



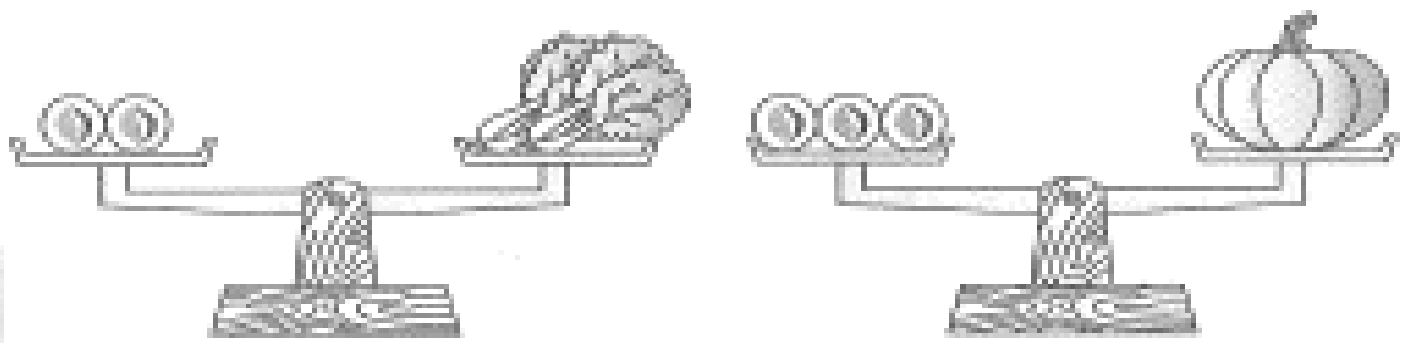
កុមារា..... ជាងកុមារី



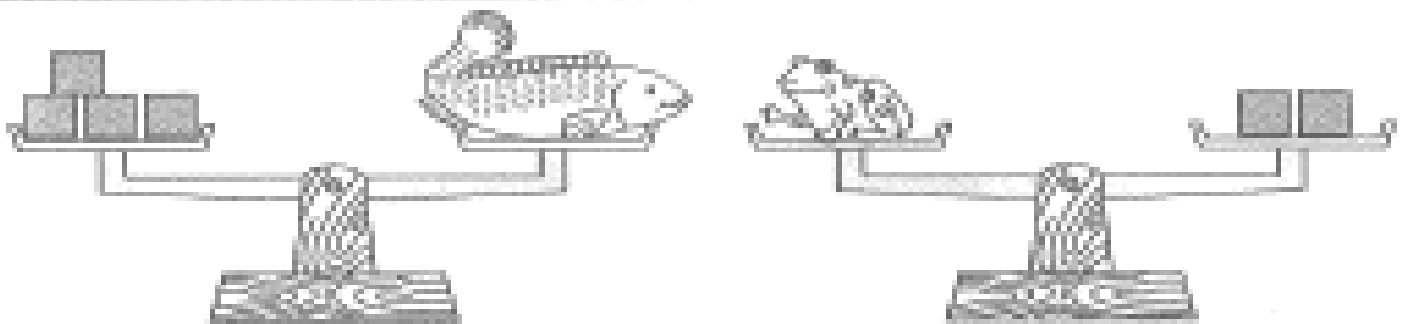
ល្បែក..... ជាងស្ពៃ

១

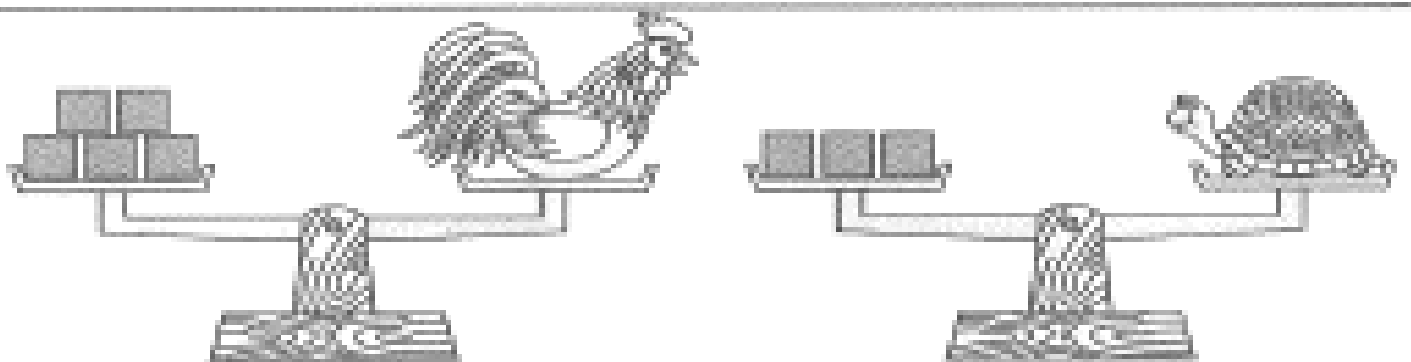
ប្រៀបធៀបទម្ងន់



ល្បោច្នុងជាងស្បៃ..... ខ្នាត



កង្កែបស្រាលជាងត្រី..... ខ្នាត

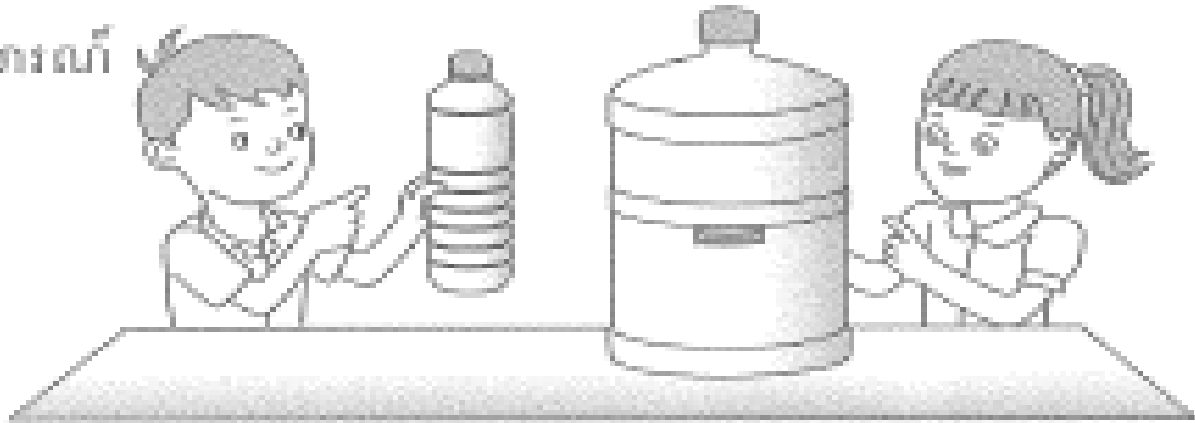


មាន់ធ្ងន់ជាងអណ្តើក..... ខ្នាត

?

ប្រៀបធៀបចំណុះ

ឧទាហរណ៍

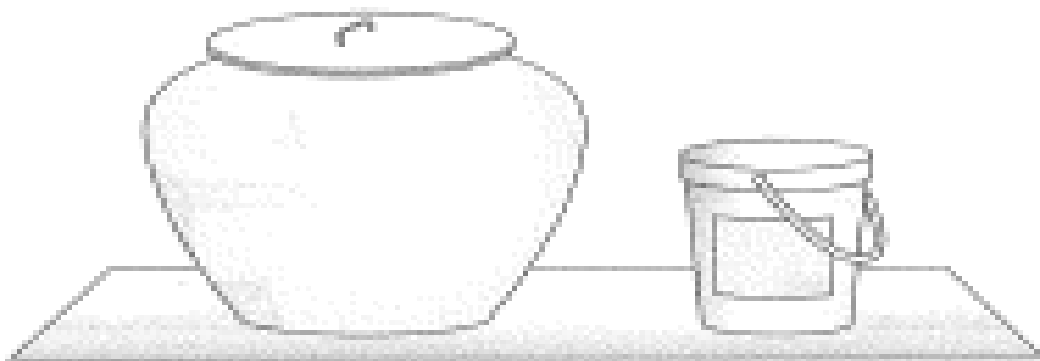


ចំណុះតិចជាង

ចំណុះច្រើនជាង



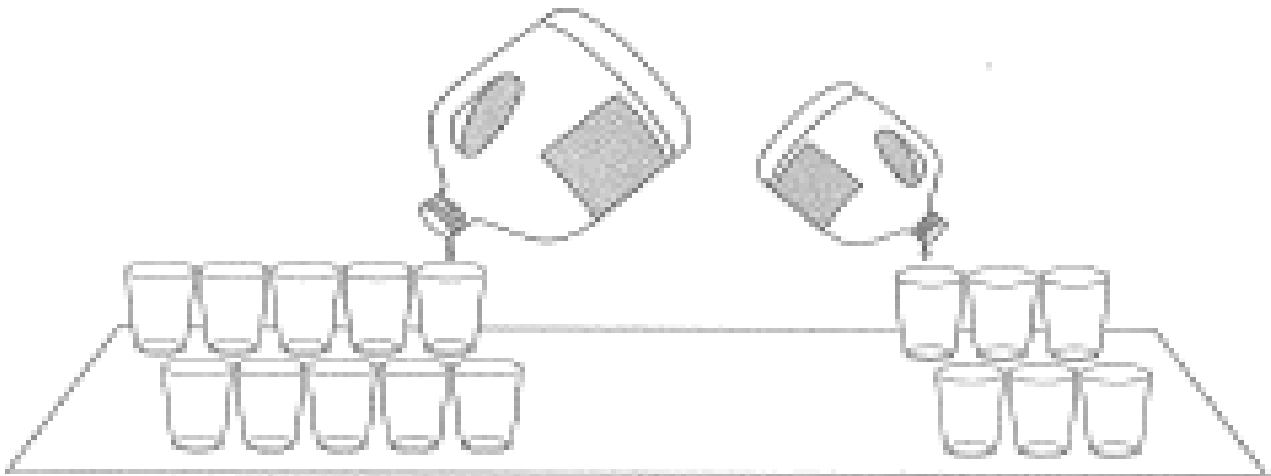
ថ្នូមានចំណុះ..... ជាងកែវ



ពុងមានចំណុះ..... ជាងពាង

?

ប្រៀបធៀបចំណុះ



ធុងធំមានចំណុះ..... កែវ

ធុងតូចមានចំណុះ..... កែវ ។



កំសៀវមានចំណុះ..... កែវ

ថ្នូមានចំណុះ..... កែវ

កំសៀវមានចំណុះតិចជាងថ្នូ..... កែវ ។



# អាណតិ៍សរសេរលេខសកល

លេខខ្មែរ            ០ ១ ២ ៣ ៤ ៥ ៦ ៧ ៨ ៩  
 លេខសកល        ០ ១ ២ ៣ ៤ ៥ ៦ ៧ ៨ ៩

1

2

3

4

5

6

7

8

9

0

1	1	1	1																
2	2	2	2																
3	3	3	3																
4	4	4	4																
5	5	5	5																
6	6	6	6																
7	7	7	7																
8	8	8	8																
9	9	9	9																
0	0	0	0																

# ១ សរសេរលេខខ្មែរជាលេខសកល


## ១. សរសេរលេខខ្មែរជាលេខសកល

ក. ១	ខ. ៥	គ. ៧	ឃ. ៩
.....	.....	.....	.....
ឃ. ១៣	ច. ១៥	ន. ១៧	ដ. ១៩
.....	.....	.....	.....
ឈ. ១៦	ញ. ១៤	ដ. ១២	ប. ១៨
.....	.....	.....	.....

## ២. សរសេរពាក្យជាលេខសកល

ក. ប្រាំពីរ	ខ. ដប់ប្រាំ	គ. ប្រាំបួន
<input type="text"/>	<input type="text"/>	<input type="text"/>

## ៣. សរសេរចំនួនតាមលំដាប់









# ការអានម៉ោង

១. តើនាឡិកាចង្អុលម៉ោងប៉ុន្មាន?



ម៉ោង ៤




ម៉ោង ....




ម៉ោង ....


២. ភ្ជាប់នាឡិកាឱ្យត្រូវនឹងម៉ោង




ម៉ោង ២



ម៉ោង ១១




ម៉ោង ៧




ម៉ោង ៥


៣. គូសទ្រង់ទ្រាយត្រឹមត្រូវនឹងម៉ោង




ម៉ោង ៣



ម៉ោង ៩



ម៉ោង ៦




ម៉ោង ៨



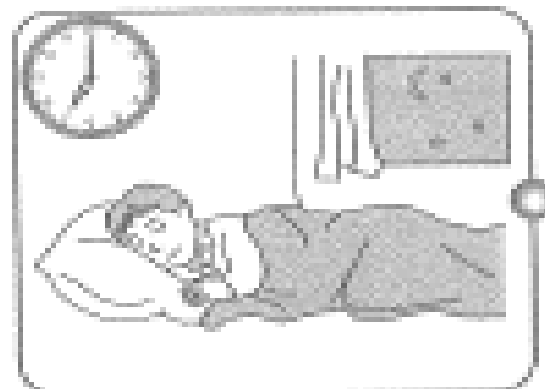
# ភ្ជាប់រូបឱ្យត្រូវនឹងពេលវេលា




ពេលព្រឹក



ពេលថ្ងៃត្រង់



ពេលល្ងាច



ពេលយប់

១

ក្រាប

ឧទាហរណ៍

រូប

ក្រាប

១			
២			
៣			
៤			
៥			
៦			
៧			
៨			
៩			
១០			

តាមក្រាប

- មានចំនួន ៧ ក្បាល
- មានចំនួន ៣ ក្បាល
- មានចំនួន ៥ ក្បាល
- សរុបទាំងអស់មានចំនួន ១៥ ក្បាល

១

ក្រាប

### ផ្គត់ផ្គង់ក្រាបតាមរូប

The image shows a collection of animal icons on the left and a counting grid on the right. The grid has 10 rows and 4 columns. The rows are labeled with numbers 1 through 10 on the left side. The columns are labeled with animal icons at the bottom: a sheep, a lion, a giraffe, and another sheep.

១				
២				
៣				
៤				
៥				
៦				
៧				
៨				
៩				
១០				

### តាមក្រាប

- មានចំនួន..... ក្បាល
- មានចំនួន..... ក្បាល
- មានចំនួន..... ក្បាល
- មានចំនួន..... ក្បាល
- សរុបទាំងអស់មានចំនួន..... ក្បាល



សរសេរលេខ ២១ ដល់ ៥០

២១	២២	២៣	២៤	២៥
----	----	----	----	----

២១

២៦	២៧	២៨	២៩	៣០
----	----	----	----	----

៣១	៣២	៣៣	៣៤	៣៥
----	----	----	----	----

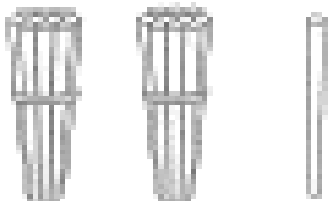



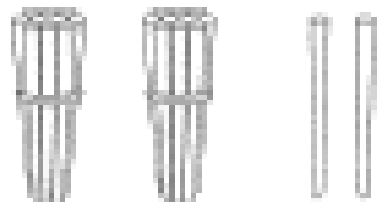



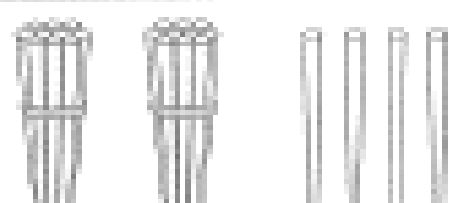





៣៦	៣៧	៣៨	៣៩	៤០
----	----	----	----	----

៤១	៤២	៤៣	៤៤	៤៥
----	----	----	----	----

៤៦	៤៧	៤៨	៤៩	៥០
----	----	----	----	----



សរសេរលេខតាមចំនួនរូប

	ឧទាហរណ៍	
		
		
		
		
		
		



៥១ ៥២ ៥៣ ៥៤ ៥៥ ៥៦ ៥៧ ៥៨ ៥៩ ៦០

៥១

៦១ ៦២ ៦៣ ៦៤ ៦៥ ៦៦ ៦៧ ៦៨ ៦៩ ៧០

៧១ ៧២ ៧៣ ៧៤ ៧៥ ៧៦ ៧៧ ៧៨ ៧៩ ៨០

៨១ ៨២ ៨៣ ៨៤ ៨៥ ៨៦ ៨៧ ៨៨ ៨៩ ៩០

៩១ ៩២ ៩៣ ៩៤ ៩៥ ៩៦ ៩៧ ៩៨ ៩៩ ១០០





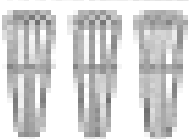
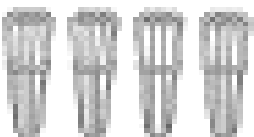

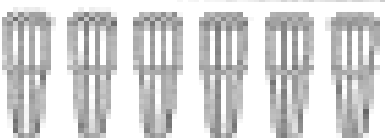



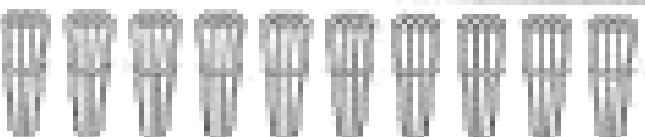
បំពេញលេខតាមលំដាប់

១	២	.....	៤	៥	៦	.....	៨	.....	១០
១១	.....	១៣	.....	១៥	.....	១៧	.....	១៩	២០
២១	.....	២៣	.....	២៥	.....	២៧	.....	២៩	៣០
.....	៣២	.....	៣៤	.....	៣៦	.....	៣៨	.....	.....
៤១	.....	៤៣	.....	៤៥	.....	៤៧	.....	៤៩	៥០
.....	៥២	.....	៥៤	.....	៥៦	.....	៥៨	.....	៦០
៦១	.....	៦៣	.....	៦៥	.....	៦៧	.....	៦៩	.....
.....	៧២	.....	៧៤	.....	៧៦	.....	៧៨	.....	៨០
៨១	.....	៨៣	.....	៨៥	.....	៨៧	.....	៨៩	.....
.....	៩២	.....	៩៤	.....	៩៦	.....	៩៨	.....	១០០








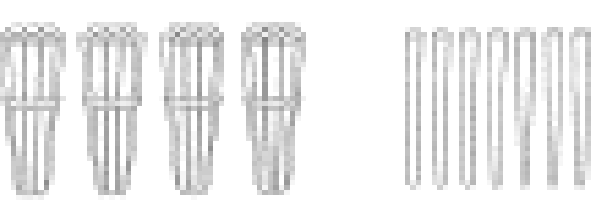
សរសេរលេខ និង ពាក្យ តាមចំនួនរូប



ចំនួន	លេខ	ពាក្យ
 ឧទាហរណ៍	១០	ដប់
		
		
		
		
		
		
		
	៩០	ប្រាំបី
	១០០	រៀបរយ



សរសេរលេខតាមខ្ទង់

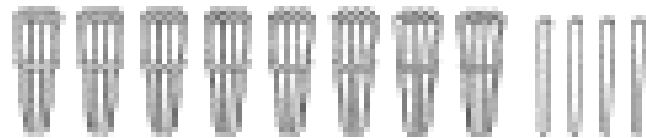
			
ខ្ទង់ដប់	ខ្ទង់រាយ	ខ្ទង់ដប់	ខ្ទង់រាយ
២០	២	.....	.....

			
ខ្ទង់ដប់	ខ្ទង់រាយ	ខ្ទង់ដប់	ខ្ទង់រាយ
.....	.....	.....	.....

			
ខ្ទង់ដប់	ខ្ទង់រាយ	ខ្ទង់ដប់	ខ្ទង់រាយ
.....	.....	.....	.....



សរសេរលេខ និងពាក្យតាមចំនួនរូប

ចំនួន	លេខ	ពាក្យ
 <span data-bbox="544 399 763 462">ឧទាហរណ៍</span>	៥២	ហាសិបពីរ
		
		
		
		
		
		
		
		
		



ភ្ជាប់លេខនឹងពាក្យ

The diagram consists of a vertical line of balloons on the left, each containing a number. A curved line starts from the bottom balloon and connects to a box on the right. The numbers in the balloons are: ១៧, ៣២, ៦១, ២៨, ៤០, ៥៧, ៨៦, ៧៣, ៣៩, ៩៥. The boxes on the right contain the following Khmer words: ខ្ញុំប្រាំបី, ប៉ែតសិបប្រាំមួយ, ដប់ប្រាំពីរ, ហុកសិបមួយ, សាមសិបពីរ, ៤០សិប, សាមសិបប្រាំបួន, កៅសិបប្រាំ, មីតសិបបី, ហាសិបប្រាំពីរ.

ហាសិប

៤២

ដប់ប្រាំមួយ

២០

ម្ភៃ

១៦

សែសិបពីរ

៦៩

ហុកសិបប្រាំបួន

៥០

សាមសិបមួយ

៥៤

ហាសិបបួន

៨៨

ប៉ែតសិបប្រាំបី

៣១

សែសិបប្រាំពីរ

២៥

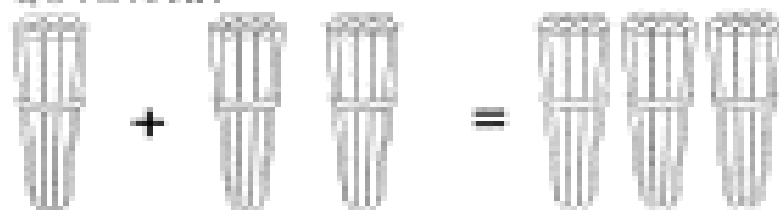
ម្ភៃប្រាំ

៤៧




# បូកចំនួន

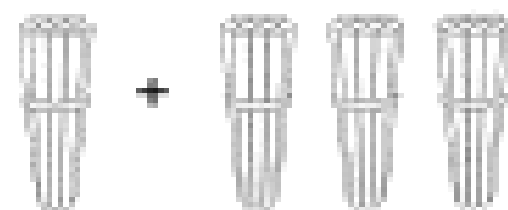
ឧទាហរណ៍



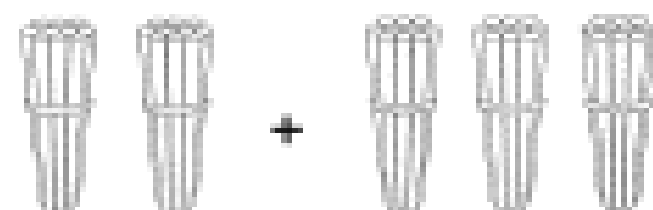
$$10 + 20 = 30$$



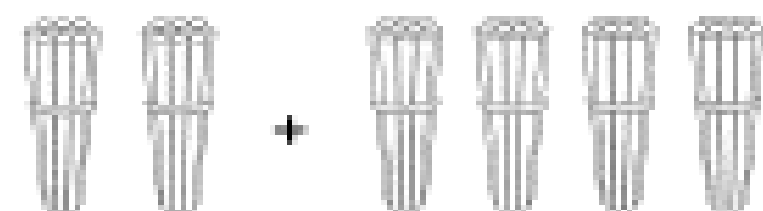
$$20 + 20 = \dots$$



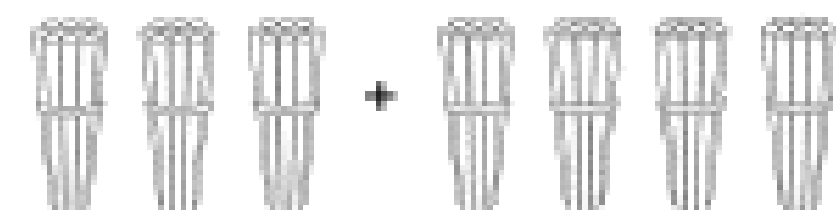
$$\dots + \dots = \dots$$



$$\dots + \dots = \dots$$



$$\dots + \dots = \dots$$



$$\dots + \dots = \dots$$



ប្រកបចំនួន

១០ + ៣០ = ...	៧០ + ២០ = ...	៥០ + ៣០ = ...
៥០ + ៥០ = ...	៤០ + ៤០ = ...	៨០ + ១០ = ...
១០ + ៧០ = ...	៣០ + ៤០ = ...	២០ + ៤០ = ...
២០ + ៥០ = ...	២០ + ៨០ = ...	៦០ + ៤០ = ...
៤០ + ៣០ = ...	៣០ + ៣០ = ...	១០ + ៤០ = ...
៦០ + ១០ = ...	៤០ + ៥០ = ...	២០ + ៨០ = ...
១០ + ៧០ = ...	២០ + ៦០ = ...	៦០ + ៣០ = ...

$\begin{array}{r} ៦០ \\ + ១០ \\ \hline \end{array}$	$\begin{array}{r} ៣០ \\ + ២០ \\ \hline \end{array}$	$\begin{array}{r} ២០ \\ + ៥០ \\ \hline \end{array}$	$\begin{array}{r} ២០ \\ + ២០ \\ \hline \end{array}$	$\begin{array}{r} ៦០ \\ + ៤០ \\ \hline \end{array}$	$\begin{array}{r} ៤០ \\ + ៥០ \\ \hline \end{array}$
---	---	---	---	---	---


$\begin{array}{r} ៥០ \\ + ៥០ \\ \hline \end{array}$	$\begin{array}{r} ៨០ \\ + ២០ \\ \hline \end{array}$	$\begin{array}{r} ៧០ \\ + ២០ \\ \hline \end{array}$	$\begin{array}{r} ១០ \\ + ៩០ \\ \hline \end{array}$	$\begin{array}{r} ៦០ \\ + ២០ \\ \hline \end{array}$	$\begin{array}{r} ៣០ \\ + ៤០ \\ \hline \end{array}$
---	---	---	---	---	---

$\begin{array}{r} ៥០ \\ + ១០ \\ \hline \end{array}$	$\begin{array}{r} ៨០ \\ + ១០ \\ \hline \end{array}$	$\begin{array}{r} ៧០ \\ + ៣០ \\ \hline \end{array}$	$\begin{array}{r} ៨០ \\ + ២០ \\ \hline \end{array}$	$\begin{array}{r} ២០ \\ + ៦០ \\ \hline \end{array}$	$\begin{array}{r} ៩០ \\ + ១០ \\ \hline \end{array}$
---	---	---	---	---	---




# ប្រតិបត្តិ

ឧទាហរណ៍



$$\begin{aligned}
 22 + 4 &= 20 + 2 + 4 \\
 &= 20 + 6 \\
 &= 26
 \end{aligned}$$



$$\begin{aligned}
 43 + 2 &= 40 + 3 + 2 \\
 &= 40 + \dots \\
 &= \dots
 \end{aligned}$$

$$\begin{aligned}
 24 + 4 &= 20 + \dots \\
 &= \dots
 \end{aligned}$$

$$\begin{aligned}
 42 + 3 &= 40 + \dots \\
 &= \dots
 \end{aligned}$$

$$\begin{aligned}
 74 + 2 &= 70 + \dots \\
 &= \dots
 \end{aligned}$$

$$\begin{aligned}
 39 + 3 &= 30 + \dots \\
 &= \dots
 \end{aligned}$$

$$\begin{aligned}
 83 + 3 &= 80 + \dots \\
 &= \dots
 \end{aligned}$$

$$\begin{aligned}
 92 + 3 &= 90 + \dots \\
 &= \dots
 \end{aligned}$$

$$\begin{aligned}
 93 + 3 &= \dots + 3 \\
 &= \dots
 \end{aligned}$$

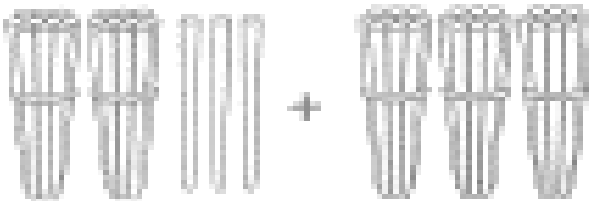
$$\begin{aligned}
 99 + 3 &= 90 + \dots \\
 &= \dots
 \end{aligned}$$





# ប្រូកចំនួន

ឧទាហរណ៍



$$\begin{aligned}
 23 + 30 &= 20 + 3 + 30 \\
 &= 20 + 30 + 3 \\
 &= 50 + 3 \\
 &= 53
 \end{aligned}$$

ឧទាហរណ៍



$$\begin{aligned}
 32 + 34 &= 30 + 2 + 30 + 4 \\
 &= 30 + 30 + 2 + 4 \\
 &= 60 + 6 \\
 &= 66
 \end{aligned}$$

$$\begin{aligned}
 24 + 30 &= \dots + 4 \\
 &= \dots
 \end{aligned}$$

$$\begin{aligned}
 53 + 32 &= 80 + \dots \\
 &= \dots
 \end{aligned}$$

$$\begin{aligned}
 70 + 24 &= \dots + 4 \\
 &= \dots
 \end{aligned}$$

$$\begin{aligned}
 26 + 29 &= \dots + 5 \\
 &= \dots
 \end{aligned}$$

$$\begin{aligned}
 58 + 90 &= \dots + 8 \\
 &= \dots
 \end{aligned}$$

$$\begin{aligned}
 35 + 22 &= \dots + 7 \\
 &= \dots
 \end{aligned}$$

$$\begin{aligned}
 95 + 39 &= \dots + 6 \\
 &= \dots
 \end{aligned}$$

$$\begin{aligned}
 29 + 38 &= \dots + 8 \\
 &= \dots
 \end{aligned}$$

?

បូកចំនួន

$$\begin{array}{r} ១១ \\ + ១៨ \\ \hline \end{array}$$

$$\begin{array}{r} ១២ \\ + ១៤ \\ \hline \end{array}$$

$$\begin{array}{r} ២៣ \\ + ២៥ \\ \hline \end{array}$$

$$\begin{array}{r} ៤២ \\ + ១៥ \\ \hline \end{array}$$

$$\begin{array}{r} ៧២ \\ + ២៥ \\ \hline \end{array}$$

$$\begin{array}{r} ៥១ \\ + ៣១ \\ \hline \end{array}$$

$$\begin{array}{r} ៣០ \\ + ៧ \\ \hline \end{array}$$

$$\begin{array}{r} ៤៣ \\ + ២១ \\ \hline \end{array}$$

$$\begin{array}{r} ៦៣ \\ + ២៣ \\ \hline \end{array}$$

$$\begin{array}{r} ៧៤ \\ + ១៣ \\ \hline \end{array}$$

$$\begin{array}{r} ១៣ \\ + ២៣ \\ \hline \end{array}$$

$$\begin{array}{r} ៧ \\ + ១២ \\ \hline \end{array}$$

$$\begin{array}{r} ៤២ \\ + ៥៥ \\ \hline \end{array}$$

$$\begin{array}{r} ៦៤ \\ + ១២ \\ \hline \end{array}$$

$$\begin{array}{r} ៨២ \\ + ១៣ \\ \hline \end{array}$$

$$\begin{array}{r} ២០ \\ + ៣០ \\ \hline \end{array}$$

$$\begin{array}{r} ១៥ \\ + ៦២ \\ \hline \end{array}$$

$$\begin{array}{r} ៥២ \\ + ៣៣ \\ \hline \end{array}$$

$$\begin{array}{r} ១២ \\ + ១៣ \\ \hline \end{array}$$

$$\begin{array}{r} ២៣ \\ + ៥៥ \\ \hline \end{array}$$

$$\begin{array}{r} ១១ \\ + ១៨ \\ \hline \end{array}$$

$$\begin{array}{r} ២៣ \\ + ៦៤ \\ \hline \end{array}$$

$$\begin{array}{r} ៣២ \\ + ២២ \\ \hline \end{array}$$

$$\begin{array}{r} ៤៤ \\ + ៤៤ \\ \hline \end{array}$$

$$\begin{array}{r} ៤៣ \\ + ៥៤ \\ \hline \end{array}$$

$$\begin{array}{r} ៣៥ \\ + ៣៤ \\ \hline \end{array}$$

$$\begin{array}{r} ៦៣ \\ + ៣៦ \\ \hline \end{array}$$

$$\begin{array}{r} ៤៣ \\ + ៥៣ \\ \hline \end{array}$$

$$\begin{array}{r} ៥០ \\ + ២៥ \\ \hline \end{array}$$

$$\begin{array}{r} ៧១ \\ + ១៨ \\ \hline \end{array}$$



# ដកចំនួន

ឧទាហរណ៍

$$\begin{aligned}
 54 - 20 &= \cancel{50} + 4 - \cancel{20} \\
 &= 30 + 4 \\
 &= 34
 \end{aligned}$$

ឧទាហរណ៍

$$\begin{aligned}
 67 - 32 &= 60 + 7 - 30 - 2 \\
 &= \cancel{60} - \cancel{30} + \cancel{7} - \cancel{2} \\
 &= 30 + 5 \\
 &= 35
 \end{aligned}$$

៦៤ - ៣០ = ...

៧៥ - ១១ = ...

៥៨ - ១០ = ...

៧៨ - ២៦ = ...

៩៦ - ១០ = ...

៨៩ - ៥៣ = ...

៧៥ - ១១ = ...

២៨ - ១២ = ...



ដកចំនួន

<u>៣៨</u>	<u>៦៣</u>	<u>៦៩</u>	<u>៤៥</u>	<u>៥៤</u>
<u>៣១</u>	<u>៣១</u>	<u>៣២</u>	<u>៥</u>	<u>២២</u>
<u>៦៦</u>	<u>៣៥</u>	<u>៤៦</u>	<u>៥៦</u>	<u>៧២</u>
<u>២៥</u>	<u>៣៣</u>	<u>៤២</u>	<u>២</u>	<u>៥១</u>
<u>៥២</u>	<u>២៨</u>	<u>១៩</u>	<u>៤១</u>	<u>៤៨</u>
<u>៥០</u>	<u>៦</u>	<u>៣</u>	<u>២១</u>	<u>២២</u>
<u>៤៩</u>	<u>៥៦</u>	<u>៥៦</u>	<u>២៧</u>	<u>៣៦</u>
<u>២៦</u>	<u>៣២</u>	<u>៤៥</u>	<u>៧</u>	<u>៤</u>
<u>២៨</u>	<u>២៤</u>	<u>៣៦</u>	<u>១៩</u>	<u>៣២</u>
<u>១៧</u>	<u>៣</u>	<u>១១</u>	<u>១៧</u>	<u>១០</u>
<u>៤៨</u>	<u>៤៦</u>	<u>១៨</u>	<u>៣៤</u>	<u>២៦</u>
<u>២៣</u>	<u>១៥</u>	<u>១១</u>	<u>១២</u>	<u>៥</u>



ជាកំណត់

៩៦  
៥៤

៨៨  
៤៤

៤០  
២០

៩៥  
៤១

៦៣  
៣១

៧៤  
៤៣

៥៨  
៣០

៩៩  
៧៦

៦៦  
២១

៥៩  
២៧

៨៦  
៦៦

៦៧  
២៣

៧៤  
៤២

៣៧  
២៦

៥៨  
៥១

៧៥  
៦៣

៩៤  
៣៣

៤៨  
២៧

៦៨  
៤០

៣៩  
២០

៦៧  
២៧

៤៩  
៣៩

៩៨  
៤៨

៩៣  
៨១

៧៩  
៤៦

៦៤  
៤៣

៦៩  
៥២

៨៥  
៤៥

៤២  
២២

៧៦  
៣៤



ដកចំនួន

៤៦ - ២៣ = ..... ៨៤ - ៦៥ = ..... ៩៤ - ៩១ = .....

៦៩ - ១០ = ..... ៩៥ - ៣៤ = ..... ៨៧ - ៧៦ = .....

៣៣ - ១២ = ..... ៨៧ - ៧៥ = ..... ៩៣ - ១២ = .....

៤៧ - ១៤ = ..... ៧៤ - ៧១ = ..... ៩៥ - ៣៤ = .....

៧៨ - ៤៣ = ..... ៨៥ - ២១ = ..... ៩៤ - ៥៣ = .....

៥៨ - ៣៨ = ..... ៨៩ - ៥២ = ..... ៩៧ - ៧៣ = .....

៧៣ - ១២ = ..... ៧៦ - ៦៣ = ..... ៧៧ - ៧៥ = .....

៧៩ - ៣៧ = ..... ៧៨ - ៥២ = ..... ៩៦ - ៤៦ = .....

៦៧ - ៤០ = ..... ៩០ - ៣០ = ..... ៨៥ - ២៣ = .....

២៧ - ១០ = ..... ៨៧ - ៣០ = ..... ៣៨ - ១៤ = .....

៨០ - ៤០ = ..... ៤៧ - ៣០ = ..... ៩៦ - ២៤ = .....

៧០ - ៥០ = ..... ៧៦ - ៣០ = ..... ៧០ - ៣០ = .....



# ប្រូកថ្មីនួន

ឧទាហរណ៍

$34 + 16 = 30 + 4 + 10 + 6$   
 $= 40 + 4$   
 $= 44$

$45 + 12 = 40 + 5 + 10 + 2$   
 $= 50 + \dots$   
 $= \dots$

$25 + 14 = 20 + \dots$   
 $= \dots$

$43 + 13 = 40 + \dots$   
 $= \dots$

$74 + 13 = 70 + \dots$   
 $= \dots$

$39 + 12 = 30 + \dots$   
 $= \dots$

$83 + 16 = 80 + \dots$   
 $= \dots$

$83 + 16 = 80 + \dots$   
 $= \dots$

$99 + 15 = \dots + 5$   
 $= \dots$

$59 + 17 = 50 + \dots$   
 $= \dots$



ប្រូកចំនួន

$$\begin{array}{r} ១១ \\ + ១៤ \\ \hline \end{array}$$

$$\begin{array}{r} ១៤ \\ + ១៤ \\ \hline \end{array}$$

$$\begin{array}{r} ២២ \\ + ២៥ \\ \hline \end{array}$$

$$\begin{array}{r} ៤៤ \\ + ១៥ \\ \hline \end{array}$$

$$\begin{array}{r} ៧១ \\ + ២៥ \\ \hline \end{array}$$

$$\begin{array}{r} ៥៦ \\ + ៣១ \\ \hline \end{array}$$

$$\begin{array}{r} ៣១ \\ + ៧ \\ \hline \end{array}$$

$$\begin{array}{r} ៤៥ \\ + ២១ \\ \hline \end{array}$$

$$\begin{array}{r} ៦៣ \\ + ៣៣ \\ \hline \end{array}$$

$$\begin{array}{r} ៧៤ \\ + ២៣ \\ \hline \end{array}$$

$$\begin{array}{r} ១៥ \\ + ២៣ \\ \hline \end{array}$$

$$\begin{array}{r} ៧ \\ + ១១ \\ \hline \end{array}$$

$$\begin{array}{r} ២២ \\ + ៥៥ \\ \hline \end{array}$$

$$\begin{array}{r} ៦៦ \\ + ១២ \\ \hline \end{array}$$

$$\begin{array}{r} ៨៣ \\ + ១៣ \\ \hline \end{array}$$

$$\begin{array}{r} ២០ \\ + ២០ \\ \hline \end{array}$$

$$\begin{array}{r} ១៣ \\ + ៦២ \\ \hline \end{array}$$

$$\begin{array}{r} ៥៣ \\ + ៣៣ \\ \hline \end{array}$$

$$\begin{array}{r} ១៥ \\ + ១៣ \\ \hline \end{array}$$

$$\begin{array}{r} ២១ \\ + ៥៥ \\ \hline \end{array}$$

$$\begin{array}{r} ១០ \\ + ១៨ \\ \hline \end{array}$$

$$\begin{array}{r} ៣៣ \\ + ៦៤ \\ \hline \end{array}$$

$$\begin{array}{r} ៥២ \\ + ២២ \\ \hline \end{array}$$

$$\begin{array}{r} ១៤ \\ + ៤៤ \\ \hline \end{array}$$

$$\begin{array}{r} ២៣ \\ + ៥៤ \\ \hline \end{array}$$

$$\begin{array}{r} ៤៥ \\ + ៣៤ \\ \hline \end{array}$$

$$\begin{array}{r} ៣៣ \\ + ៣៦ \\ \hline \end{array}$$

$$\begin{array}{r} ៤៣ \\ + ៤៣ \\ \hline \end{array}$$


$$\begin{array}{r} ៥០ \\ + ៣៥ \\ \hline \end{array}$$

$$\begin{array}{r} ៧០ \\ + ១៨ \\ \hline \end{array}$$





ចំណោម



១. បូណ្ណមានចម្កី៖ ៥២ដើម ហើយអ្នកគ្រូឱ្យ ១៧ដើមទៀត ។  
តើបូណ្ណមានចម្កីទាំងអស់ប៉ុន្មានដើម?

<b>ប្រមាណវិធី</b> $\begin{array}{r} 52 \\ + 17 \\ \hline 69 \end{array}$	<b>ចម្លើយ</b> បូណ្ណមានចម្កីទាំងអស់ <input type="text" value="69"/> ដើម ។
---	---

២. សំមានលុយ ៥០រៀល ឪពុកវាឱ្យ ៥០រៀលទៀត ។  
តើសំមានលុយទាំងអស់ប៉ុន្មានរៀល?

<b>ប្រមាណវិធី</b> $\begin{array}{r} 50 \\ + 50 \\ \hline \end{array}$	<b>ចម្លើយ</b> សំមានលុយទាំងអស់ <input type="text"/> រៀល ។
--	---

៣. ទានៅលើតោក ៨៣ក្បាល ទានៅក្នុងទឹក ១៤ក្បាល ។  
តើទាទាំងអស់មានប៉ុន្មានក្បាល?

<b>ប្រមាណវិធី</b> $\begin{array}{r} 83 \\ + 14 \\ \hline \end{array}$	<b>ចម្លើយ</b> ទាទាំងអស់មាន <input type="text"/> ក្បាល ។
--	--



ចំណោទ

៤. សុក្រចីក្ដីមាន់បាន ៤៧ ក្បាល ទា ២២ ក្បាលទៀត ។  
តើសត្វទាំងពីរប្រភេទមានប៉ុន្មានក្បាល ?

ប្រមាណវិធី $\begin{array}{r} 47 \\ + 22 \\ \hline \end{array}$	ចម្លើយ សត្វទាំងពីរប្រភេទ <input type="text"/> ក្បាល ។
---	--

៥. លើកទី១ សៅភាំឆៃបាន ៤៤ គុម្ព និងលើកទី២ វាបាន ៣២ គុម្ព ។  
តើទាំងពីរលើកវាបានប៉ុន្មានគុម្ព ?

ប្រមាណវិធី $\begin{array}{r} 44 \\ + 32 \\ \hline \end{array}$	ចម្លើយ ទាំងពីរលើកវាបាន <input type="text"/> គុម្ព ។
---	--

៦. បន្ទប់រៀនមួយមានសិស្សប្រុស ១៦ នាក់ និងសិស្សស្រី ២៣ នាក់ ។  
តើក្នុងបន្ទប់នោះមានសិស្សសរុបប៉ុន្មាននាក់ ?

ប្រមាណវិធី $\begin{array}{r} 16 \\ + 23 \\ \hline \end{array}$	ចម្លើយ ក្នុងបន្ទប់នោះមានសិស្ស <input type="text"/> នាក់ ។
---	--



ចំណោម

៧. ក្ដីបកីឡាមួយមានបុគ្គលិកប្រុស ៥៧នាក់ ស្រី ៤២នាក់ ។  
តើបុគ្គលិកទាំងអស់មានចំនួននាក់ ?

ប្រមាណវិធី $\begin{array}{r} 57 \\ + 42 \\ \hline \end{array}$	ចម្លើយ បុគ្គលិកទាំងអស់មាន <input type="text"/> នាក់ ។
---	--

៨. លើកទី១សៅចាប់ត្រីបាន ៦៨ លើកទី២ចាប់បាន ៣១ ។  
តើទាំងពីរលើកសៅចាប់បានត្រីចំនួន ?

ប្រមាណវិធី $\begin{array}{r} 68 \\ + 31 \\ \hline \end{array}$	ចម្លើយ ទាំងពីរលើកចាប់ត្រីបាន <input type="text"/> ។
---	--

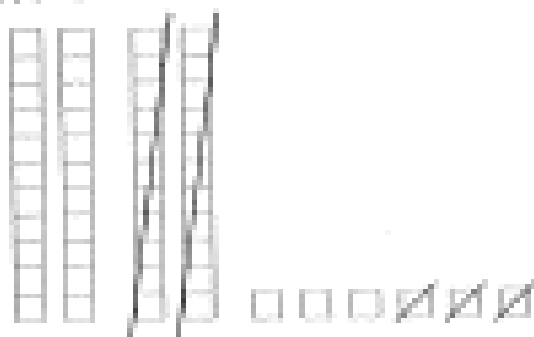
៩. សាលារៀនមួយមានលោកគ្រូ ២៥នាក់ និងអ្នកគ្រូ ៣៤នាក់ ។  
តើសាលារៀននោះមានគ្រូសរុបចំនួននាក់ ?

ប្រមាណវិធី $\begin{array}{r} 25 \\ + 34 \\ \hline \end{array}$	ចម្លើយ សាលារៀនមានគ្រូសរុប <input type="text"/> នាក់ ។
---	--



# ចំណោទ

១. ដានីមាន ៤៦ កាដេ យកចេញ ២៣ កាដេ ។  
 តើដានីនៅសល់កាដេប៉ុន្មាន?



ប្រមាណវិធី

$$\begin{array}{r} 46 \\ - 23 \\ \hline 23 \end{array}$$

ចម្លើយ

ដានីនៅសល់កាដេ  ។

២. មីងសំមានប្រាក់ ៩០ គ្រាប គាត់យកអស់ ៣០ គ្រាប ។  
 តើមីងសំនៅសល់ប្រាក់ប៉ុន្មានគ្រាប?

ប្រមាណវិធី

$$\begin{array}{r} 90 \\ - 30 \\ \hline \end{array}$$

ចម្លើយ

មីងសំនៅសល់ប្រាក់  គ្រាប ។

៣. ពារីមានក្រុច ៩៤ ផ្លែ ឱ្យទៅលាវ ៥៣ ផ្លែ ។  
 តើពារីនៅសល់ក្រុចប៉ុន្មានផ្លែ?

ប្រមាណវិធី

$$\begin{array}{r} 94 \\ - 53 \\ \hline \end{array}$$

ចម្លើយ

ពារីនៅសល់ក្រុច  ផ្លែ ។



ចំណោទ

៤. កសិដ្ឋានមួយមានកោសរុបចំនួន ៨៩ ក្បាល ។ ក្នុងគោរមានឈ្មោល ៤៧ ក្បាល ។ តើគោញីមានប៉ុន្មានក្បាល?

ប្រមាណវិធី $\begin{array}{r} ៨៩ \\ - ៤៧ \\ \hline \square \end{array}$	ចម្លើយ គោញីមាន <input type="text"/> ក្បាល ។
---	--

៥. បូណ្យមានក្រូច៨៦ ថ្លៃ វាលកំអស់ ៦៣ ថ្លៃ ។ តើក្រូចនៅសល់ប៉ុន្មានថ្លៃ?

ប្រមាណវិធី $\begin{array}{r} ៨៦ \\ - ៦៣ \\ \hline \square \end{array}$	ចម្លើយ ក្រូចនៅសល់ <input type="text"/> ថ្លៃ ។
---	--

៦. គេដាំអំពៅបាន ៨៩ គុម្ព គេលក់អស់ ៦៧ គុម្ព ។ តើអំពៅនៅសល់ប៉ុន្មានគុម្ព?

ប្រមាណវិធី $\begin{array}{r} ៨៩ \\ - ៦៧ \\ \hline \square \end{array}$	ចម្លើយ អំពៅនៅសល់ <input type="text"/> គុម្ព ។
---	--



ចំណោម

៧. ដីការកប្រាក់បាន ៩៧ ។ វាថ្លៃសៀវភៅអស់ប្រាក់ ៥៤ ។  
តើដីការនៅសល់ប្រាក់ប៉ុន្មានរៀល?

<b>ប្រមាណវិធី</b> $\begin{array}{r} 97 \\ - 54 \\ \hline \end{array}$	<b>ចម្លើយ</b> ដីការនៅសល់ប្រាក់ <input type="text"/> រៀល ។
--	--

៨. សាលារៀនមួយមានសិស្ស ៩៥ នាក់ ។ លោកនាយកបានចាត់តាំងឱ្យ  
សិស្ស ៦៥ នាក់ទៅធ្វើពលកម្ម ។ តើសិស្សដែលនៅរៀនប៉ុន្មាននាក់?


<b>ប្រមាណវិធី</b> $\begin{array}{r} 95 \\ - 65 \\ \hline \end{array}$	<b>ចម្លើយ</b> សិស្សដែលនៅរៀន <input type="text"/> នាក់ ។
--	--

៩. សត្វមានមាត់ ៨៩ ក្បាល ។ សុទ្ធាមានមាត់តិចជាងសត្វ ១៥ ក្បាល ។  
តើសុទ្ធាមានមាត់ប៉ុន្មានក្បាល?

<b>ប្រមាណវិធី</b> $\begin{array}{r} 89 \\ - 15 \\ \hline \end{array}$	<b>ចម្លើយ</b> សុទ្ធាមានមាត់ <input type="text"/> ក្បាល ។
--	---

?

ក្របីយកត



?

រូបិយវត្ថុ

១. ចូរគូសវង់លើក្រដាសប្រាក់ ១០០ រៀល



ក



ខ

២. ចំណោទ



តើសុខទិញក្រូចបានប៉ុន្មាន?






តើនារីត្រូវអាប់លុយឱ្យផលប៉ុន្មាន?





# លំដាប់

ឧទាហរណ៍




**យើងបម្រើសេវាកម្ម :**

- អភិវឌ្ឍសៀវភៅនិងសម្ភារឧបទេស
- បោះពុម្ព
- ចែកចាយដល់សាលារៀន

**WE SERVE :**

- Book and teaching-aid development
- Printing
- Distribution to schools



**គ្រឹះស្ថានចែកចាយនិងបោះពុម្ព ( គ.ប.ច )**  
**PUBLISHING AND DISTRIBUTION HOUSE ( PDH )**

**បណ្ណាគារ គ.ប.ច**  
**PDH BOOKSHOP**

អាសយដ្ឋាន: 148, Nervosa Boulevard, Phnom Penh, Tel: 85-23-43 000

មានលក់សៀវភៅសិក្សាគោលសម្រាប់សិស្សនិង  
 សម្រាប់គ្រូ សៀវភៅហ្វឹកហាង សៀវភៅអំណាចបន្ថែម  
 សម្ភារឧបទេស ព្រមទាំងសម្ភារភារិយាល័យគ្រប់មុខ :

Selling textbooks, teacher's manuals,  
 workbooks, supplementary readers,  
 teaching-aids and stationary !

